

• Question No. 1

Select the option that is related to the third word in the same way as the second word is related to the first word.

(The words must be considered as meaningful English words and must not be related to each other based on the number of letters/number of consonants/vowels in the word.)

Movie : Director :: Orchestra : ?

Options :

1. Conductor
2. Choreographer
3. Dancer
4. Audience
- 5.

Answer : Conductor

• Question No. 2

Three different positions of the same dice are shown. Find the number on the face opposite the face showing '5'.

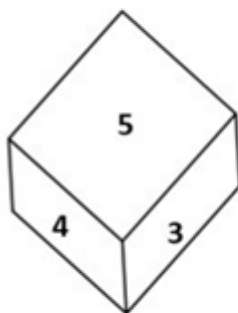


Figure 1

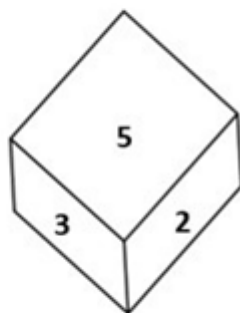


Figure 2

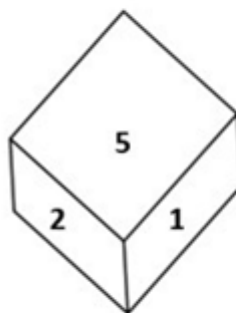


Figure 3

Options :

1. 1
2. 2
3. 3
4. 6
- 5.

Answer : 6

• Question No. 3

After interchanging the given two numbers and two signs what will be the values of equation (I) and (II) respectively?

– and \times , 6 and 4

I. $7 \times 6 + 8 \div 2 - 4$

II. $4 - 7 \times 6 + 8 \div 2$

Options :

1. 27, 49
2. 25, 40
3. 27, 47
4. 27, 42
- 5.

Answer : 27, 42

• Question No. 4

If $A \div B$ means that A is the brother of B, $A \times B$ means that A is the sister of B, $A - B$ means that A is the father of B then which of the following expression shows that P is the paternal uncle of Q?

Options :

1. $P \div R - Q$

2. $P - R \div Q$

3. $P \div R \times Q$

4. $P \times R - Q$

5.

Answer : $P \div R - Q$

• Question No. 5

Which two numbers, from amongst the given options, should be interchanged to make the given equation correct?

$$(6)^2 - 20 + (28 \div 7) - [(\sqrt{4}) \times 8] + (2)^2 = 40$$

Options :

1. 6 and 8

2. 2 and 8

3. 7 and 2

4. 20 and 8

5.

Answer : 6 and 8

• Question No. 6

Three of the following four letter-clusters are alike in a certain way and one is different. Pick the odd one out.

Options :

1. TQR

2. MJK

3. NKI

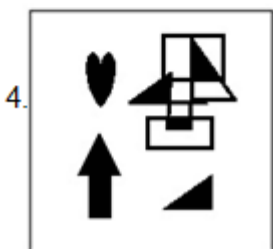
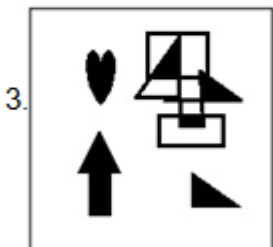
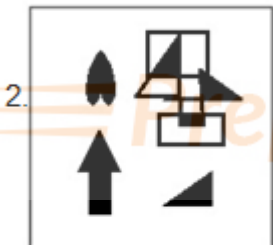
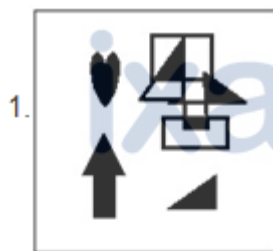
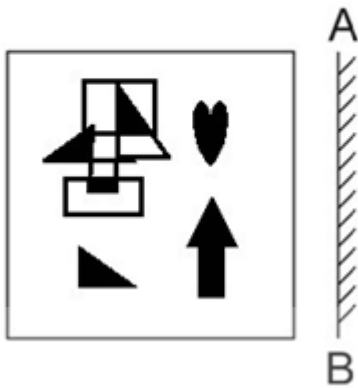
4. IFG

5.

Answer : NKI

• Question No. 7

Select the correct mirror image of the given figure when the mirror is placed at AB as shown.



Options :

1. 1
2. 2
3. 3
4. 4
- 5.

Answer : 1

• Question No. 8

Select the correct mirror image of the given combination when the mirror is placed at 'PQ' as shown below.



1. 2U8EGR0G
2. 2U0EGR0G
3. 2U8EGR0G
4. 2U0EGR0G

Options :

1. 1
2. 2
3. 3
4. 4
- 5.

Answer : 1

- Question No. 9

In the following question, select the missing number from the given series. 41, 54, 67, 80, 93, ?

Options :

1. 110
2. 108
3. 105
4. 106
- 5.

Answer : 106

- Question No. 10

By interchanging the given two signs and numbers which of the following equation will be not correct?

\times and \div , 2 and 6

I. $7 - 4 \times 3 \div 6 + 2 = 8$

II. $6 - 8 \times 2 + 9 \div 3 = 5$

Options :

1. Only II
2. Neither I nor II
3. Only I
4. Both I and II
- 5.

Answer : Both I and II

- Question No. 11

Which of the following terms will replace the question mark (?) in the given series?

AVTE CTRG ERPI GPNK ?

Options :

1. MINL
2. INJM
3. ILNM
4. INLM
- 5.

Answer : INLM

• Question No. 12

In a certain code language, 'CHILDREN' is written as 'FKLOGUHQ' and 'SCHOOL' is written as 'VFKRRO', how will 'CLASSROOM' be written in that language?

Options :

1. FODVVURRP
2. FOEWWURRP
3. EMCTTTQOQ
4. EMCTTURRP
- 5.

Answer : FODVVURRP

• Question No. 13

Select the set in which the numbers are related in the same way as are the numbers of the following sets.

(NOTE : Operations should be performed on the whole numbers, without breaking down the numbers into its constituent digits. E.g. 13 – Operations on 13 such as adding /subtracting /multiplying etc. to 13 can be performed.

Breaking down 13 into 1 and 3 and then performing mathematical operations on 1 and 3 is not allowed)

(70, 14, 56)

(88, 30, 58)

Options :

1. (44, 24, 23)

2. (52, 19, 33)

3. (59, 36, 25)

4. (38, 16, 24)

5.

Answer : (52, 19, 33)

• Question No. 14

Select the option that is related to the third number in the same way as the second number is related to the first number and the sixth number is related to the fifth number.

8 : 128 :: 6 : ? :: 11 : 242

Options :

1. 68

2. 72

3. 64


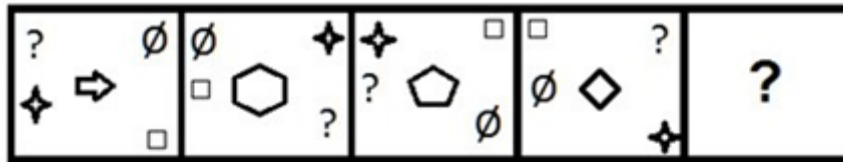
4. 70

5.

Answer : 72

• Question No. 15

Select the figure that will come next in the following figure series.



Options :

1. 1
2. 2
3. 3
4. 4
- 5.

Answer : 4

• Question No. 16

Select the option that represents the correct order of the given words as they would appear in an English dictionary.

1- Sennet

2- Sennight

3- Sennit

4- Seniority

5- Senna

Options :

1. 4, 5, 1, 2, 3

2. 4, 5, 1, 3, 2

3. 4, 5, 2, 1, 3

4. 5, 4, 2, 1, 3

5.

Answer : 4, 5, 1, 2, 3

• Question No. 17

Select the option that is related to the fifth letter-cluster in the same way as the second letter-cluster is related to the first letter-cluster and the fourth letter-cluster is related to the third letter-cluster.

GAIN : HBKP :: ACHE : BDJG :: CAKE : ?

Options :

1. DBMH

2. DBNG

3. DBNH

4. DBMG

5.

Answer : DBMG

• Question No. 18

A + B means 'A is the father of B'

A - B means 'A is the mother of B'

A % B means 'A is the brother of B'

A # B means 'A is the daughter of B'

If $P + Q \% R \% S \# T - U$, then how is Q related to U?

Options :

1. Brother-in-law
2. Father
3. Brother
4. Son
- 5.

Answer : Brother

• Question No. 19

Which of the following letter-clusters will replace the question mark (?) and complete the following letter-cluster series?

LE, OJ, UO, DT, ?

Options :

1. PX
2. PZ
3. QY
4. PY
- 5.

Answer : PY

• Question No. 20

Read the given statement(s) and conclusions carefully. Assuming that the information given in the statements is true, even if it appears to be at variance with commonly known facts, decide which of the given conclusions logically follow(s) from the statement(s).

Statements:

Some ships are cups.

No cup is a stool.

All windows are cups.

Conclusions:

I. Some ships being windows is a possibility.

II. No window is a stool.

III. All cups are windows.

IV. No ship is a stool.

Options :

1. Only Conclusions I and II follow
2. Only Conclusions I, II and IV follow
3. Only Conclusion I follows
4. Only Conclusions II and III follow
- 5.

Answer : Only Conclusions I and II follow

- Question No. 21

Select the figure from among the given options that can replace the question mark (?) in the following series.



Options :

1. 1

2. 2

3. 3

4. 4

5.

Answer : 4

• Question No. 22

Select the option that is related to the fifth number in the same way as the second number is related to the first number and the fourth number is related to the third number.

7 : 25 :: 4 : 4 :: 3 : ?

Options :

1. 4

2. 7

3. 5

4. 1

5.

Answer : 1

• Question No. 23

3 In the following question below are given some statements followed by some conclusions based on those statements. Taking the given statements to be true even if they seem to be at variance from commonly known facts. Read all the conclusions and then decide which of the given conclusion logically follows the given statements.

Statements:

I. Some F are D.

II. No A is D.

Conclusion:

I. Some F are A.

II. No D is A.

III. Some F are not A.

Options :

1. Neither conclusion follows

2. Both conclusions II and III follows

3. Only conclusion III follows

4. Only conclusion I follows

5.

Answer : Both conclusions II and III follows

- Question No. 24

In the following question, four number pairs are given. In each pair the number on left side of (–) is related to the number of the right side of (–) with some Logic/Rule/Relation. Three pairs are similar on basis of same Logic/Rule/Relation. Select the odd one out from the given alternatives. (NOTE: Operations should be performed on the whole numbers, without breaking down the numbers into its constituent digits. E.g.13 – Operations on 13 such as adding /subtracting /multiplying etc. to 13 can be performed. Breaking down 13 into 1 and 3 and then performing mathematical operations on 1 and 3 is not allowed)

Options :

1. 17 – 31
2. 15 – 27
3. 9 – 15
4. 13 – 25
- 5.

Answer : 13 – 25

- Question No. 25

In a certain code language, 'INBOX' is written as 'MRYCL' and 'EMAIL' is written as 'NVZOR'. How will 'DRAFT' be written in that language?

Options :

1. UGZWI
2. WIZGU
3. IWZGU
4. IWGZU
- 5.

Answer : IWZGU

- Question No. 26

Which of the following is used in photography?

Options :

1. Sodium thiosulphate
2. Sodium bicarbonate
3. Sodium hydroxide
4. Sodium sulphate
- 5.

Answer : Sodium thiosulphate

• Question No. 27

In honour of an Indian musician, the US state of Massachusetts proclaimed 20 April as _____ in 1984.

Options :

1. Amjad Ali Khan Day
2. Sakhawat Hussain Day
3. Allauddin Khan Day
4. Sharan Rani Backliwal Day
- 5.

Answer : Amjad Ali Khan Day

• Question No. 28

The 'flag-raising' ceremony by the Prime Minister of India on Independence Day is held at which of the following places in Delhi?

Options :

1. Parliament House
2. Red Fort
3. Old Fort
4. Rashtrapati Bhavan

5.

Answer : Red Fort

• Question No. 29

Earth's core is mainly made up of _____.

Options :

1. nickel and iron
2. nickel and magnesium
3. nickel and alumina
4. nickel and copper
- 5.

Answer : nickel and iron

• Question No. 30

In which group are the non-metal elements placed in a vertical column on the right side of the periodic table?

Options :

1. Group 1
2. Group 1
3. Group 2
4. Group 17
- 5.

Answer : Group 17

• Question No. 31

Who has been appointed as the country's second Chief of Defence Staff (CDS)?

Options :

1. Manoj Kumar
2. Anil Chauhan
3. Sanjay Agarwal
4. R Dinesh
- 5.

Answer : Anil Chauhan

• Question No. 32

_____ measures the aggregate production of final goods and services taking place within the domestic economy during a year.

Options :

1. Net national product
2. Gross domestic product
3. Gross National income
4. National income at factor price
- 5.

Answer : Gross domestic product

• Question No. 33

Which organic compound has the structure $R-COOH$, with R referring to the alkyl, alkenyl, aryl, or other group?

Options :

1. Ester
2. Aldehydes
3. Carboxylic acid
4. Ketone
- 5.

Answer : Carboxylic acid

- Question No. 34

According to the Brihat Samhita, what do you call the process of making scents, mouth perfumes and bath powders?

Options :

1. Jatuka
2. Kamplicica
3. Gandhayukli
4. Pattanga
- 5.

Answer : Gandhayukli

- Question No. 35

The Durga temple at Aihole, built about _____ years ago.

Options :

1. 2000
2. 1100
3. 1700
4. 1400
- 5.

Answer : 1400

- Question No. 36

Pivoting is related to which of the following sports?

Options :

1. Hockey
2. Volleyball

3. Badminton
4. Basketball
- 5.

Answer : Basketball

• Question No. 37

Who has been appointed as new National e-Governance Division CEO in March 2022?

Options :

1. TS Ramakrishnan
2. Nitin Chugh
3. Abhishek Singh
4. Rajiv Kumar
- 5.

Answer : Abhishek Singh

• Question No. 38

The subject of the Study of Macro Economics is based on which principle?

Options :

1. The principle of Producer
2. The principle of Investment
3. The principle of Consumer
4. The principle of National Income
- 5.

Answer : The principle of National Income

• Question No. 39

Nuts, vegetable oil and fish are good source of which of the following?

Options :

1. Minerals
2. Carbohydrates
3. Proteins
4. Omega 3
- 5.

Answer : Omega 3

• Question No. 40

The British Parliament transferred the powers of the East India company to the British crown in _____.

Options :

1. 1856
2. 1860
3. 1854
4. 1858
- 5.

Answer : 1858

• Question No. 41

Who among the following contemporary style dancers was the first Indian dancer to receive the dance WEB Europe Scholarship? He/She also won the 2002 American Choreography Award for his/her work in the movie 'Lagaan'?

Options :

1. Shakti Mohan
2. Ashley Lobo
3. Terence Lewis
4. Padmini Chettur
- 5.

Answer : Terence Lewis

- Question No. 42

The Central Universities (Amendment) Bill, 2022 was passed in Lok Sabha in _____.

Options :

1. July
2. November
3. September
4. August
- 5.

Answer : August

- Question No. 43

Who among the following rulers appointed Ladha and Pira, two gardeners to high administrative post?

Options :

1. Muhammad Tughluq
2. Bahlul Lodi
3. Iltutmish
4. Khizr Khan
- 5.

Answer : Muhammad Tughluq

- Question No. 44

According to census 2001, sex ratio is _____ females per 1000 males.

Options :

1. 913

2. 923

3. 933

4. 943

5.

Answer : 933

• Question No. 45

In all AIBA Boxing competitions, the rest time between each round is _____ minutes.

Options :

1. 3

2. 2

3. 5

4. 1

5.

Answer : 1

• Question No. 46

In which of the following years was the Indian National Congress split into two groups named as Moderates and Extremists?

Options :

1. 1899

2. 1895

3. 1904

4. 1907

5.

Answer : 1907

- Question No. 47

Rukmini Devi Arundale is the exponent of which of the following Indian classical dance forms?

Options :

1. Sattriya
2. Odissi
3. Manipuri
4. Bharatanatyam
- 5.

Answer : Bharatanatyam

- Question No. 48

Which city is called the 'Manchester of India'?

Options :

1. Ludhiana
2. Hyderabad
3. Ahmedabad
4. Visakhapatnam
- 5.

Answer : Ahmedabad

- Question No. 49

To safeguard public property and to abjure violence is a _____ in the Indian Constitution.

Options :

1. fundamental duty
2. directive principle of state policy
3. fundamental right

4. social ethic

5.

Answer : fundamental duty

• Question No. 50

Which Article of the Constitution of India authorises the President to seek the opinion of the Supreme Court in specific categories of matters?

Options :

1. Article 144

2. Article 142

3. Article 143

4. Article 145

5.

Answer : Article 143

• Question No. 51

Study the given table and answer the question that follows.

The table shows the number of donuts sold by three different stores in five different months.

| Store | Month | | | | |
|-------|-------|--------|-----------|---------|----------|
| | July | August | September | October | November |
| P | 400 | 350 | 263 | 125 | 420 |
| Q | 660 | 170 | 465 | 905 | 180 |
| R | 342 | 182 | 700 | 960 | 235 |

What is the ratio of the total number of donuts sold by stores P and R together in October to the total number of donuts sold by stores Q and R together in the same month?

Options :

1. 217 : 353

2. 217 : 373

3. 373 : 217

4. 353 : 217

5.

Answer : 217 : 373

• Question No. 52

If $\sin \theta + \cos \theta = \frac{\sqrt{3}-1}{2\sqrt{2}}$, then what is the value of $\tan \theta + \cot \theta$?

Options :

1. $12(\sqrt{3}+2)$

2. $8(\sqrt{3}+2)$

3. $8(\sqrt{3}-2)$

4. $12(\sqrt{3}-2)$

5.

Answer : $8(\sqrt{3}-2)$

• Question No. 53

In how much time will a sum of Rs. 5250 amounts to Rs. 9870 at the rate of 11 percent per annum at simple interest?

Options :

1. 14 years

2. 8 years

3. 12 years

4. 15 years

5.

Answer : 8 years

• Question No. 54

A policeman saw a thief from a distance of 450 m. When the policeman started chasing him, the thief also started running. The ratio of speeds of the thief to the policeman is 7 : 8. After running how much distance (in km) can the policeman catch the thief?

Options :

1. 3.15
2. 3.6
3. 3.75
4. 3.4
- 5.

Answer : 3.6

• Question No. 55

R jogs at twice the speed of walking and runs at twice the speed of jogging. From his home to office, he covers half of the distance by walking and the rest by jogging. From his office to home, he covers half the distance jogging and the rest by running. What is his average speed (in km/h) in a complete round from his home to office and back home if the distance between his office and home is 10 km and he walks at the speed of 5 km/h?

Options :

1. 60/9
2. 80/9
3. 60/8
4. 90/8
- 5.

Answer : 80/9

• Question No. 56

The following table shows the amount of annual rainfall in inches in 8 different states of India.

| | T | A | M | N | K | P | D | R |
|------|----|----|----|----|----|----|----|----|
| 2015 | 80 | 70 | 98 | 78 | 68 | 65 | 70 | 59 |
| 2016 | 85 | 70 | 95 | 77 | 69 | 60 | 71 | 59 |
| 2017 | 86 | 71 | 96 | 76 | 66 | 67 | 71 | 60 |
| 2018 | 84 | 70 | 96 | 75 | 67 | 66 | 69 | 61 |
| 2019 | 80 | 74 | 97 | 74 | 67 | 64 | 75 | 60 |
| 2020 | 81 | 75 | 98 | 75 | 68 | 65 | 74 | 65 |
| 2021 | 82 | 72 | 98 | 73 | 70 | 65 | 73 | 65 |

How many states have witnessed an increase in the amount of annual rainfall continuously for two times in immediate years?

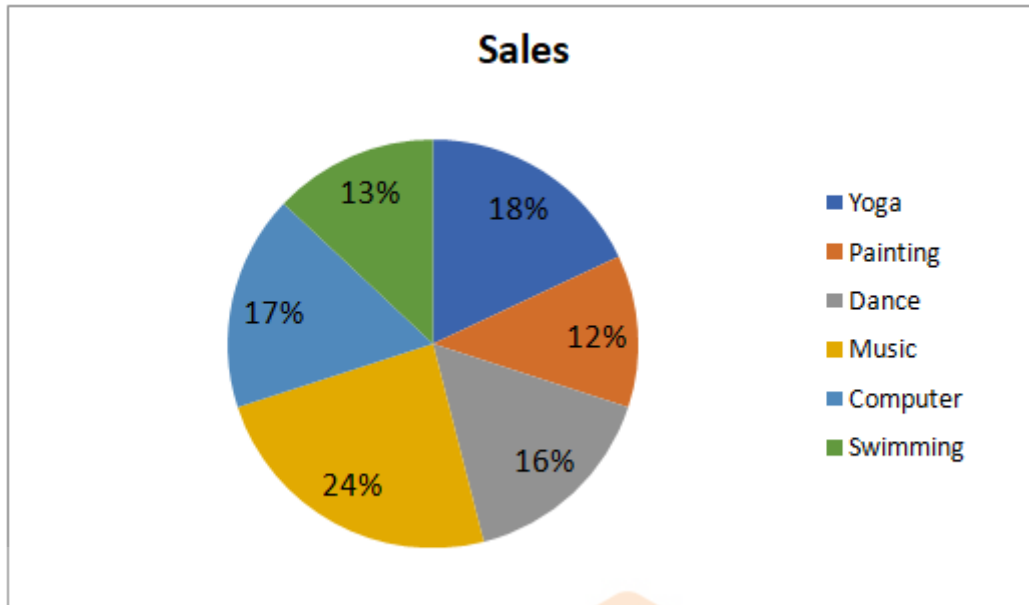
Options :

1. 3
2. 5
3. 6
4. 4
- 5.

Answer : 5

• Question No. 57

The given pie-chart shows the total number of children who opted different courses in a summer camp in May 2019.



300 students attended the summer camp, and every child was allowed to opt only one activity for the camp. The total number of students who opted for Yoga and Painting taken together is how much less than the total number of children who opted for Music and Dance taken together?

Options :

1. 45
2. 30
3. 40
4. 35
- 5.

Answer : 30

- Question No. 58

If $x + \frac{1}{x} = -14$, and $x < -1$, what will be the value of $x^2 - \frac{1}{x^2}$?

1. $112\sqrt{3}$
2. $140\sqrt{2}$
3. $-112\sqrt{3}$
4. $-140\sqrt{2}$

Options :

1. 1
2. 2
3. 3
4. 4
- 5.

Answer : 1

• Question No. 59

A hotel is giving a discount of 12% on the booking of 2 or more rooms. Additionally, the hotel is offering a 5% discount only on payment using any card of SBI. Rakesh booked 2 rooms in the hotel for a day at the rate of Rs.1,500 per room per day. While checking out, he paid the bill using SBI Silver Card. How much amount did he have to pay?

Options :

1. Rs.2,498
2. Rs.2,618
3. Rs.2,418
4. Rs.2,508
- 5.

Answer : Rs.2,508

- Question No. 60

The curved surface area of the sphere is 154 cm^2 . Find the volume of the sphere (rounded off to one digit after decimal).

Options :

1. 161.1
2. 156.9
3. 179.7
4. 147.8
- 5.

Answer : 179.7

- Question No. 61

Ram sold a plot for Rs.4,00,000 at a 20% loss. For what price should he sell the plot to gain a 5% profit?

Options :

1. Rs.5,05,000
2. Rs.5,20,000
3. Rs.5,25,000
4. Rs.5,00,000
- 5.

Answer : Rs.5,25,000

- Question No. 62

0.5 is what percentage of 20?

Options :

1. 25%
2. 0.025%

3. 2.5%

4. 0.25%

5.

Answer : 2.5%

• Question No. 63

In triangle ABC, the bisector of angle BAC cuts the side BC at D. If AB = 10 cm, and AC = 14 cm then what is BD : BC ?

Options :

1. 7 : 5

2. 5 : 3

3. 5 : 7

4. 5 : 2

5.

Answer : 5 : 7

• Question No. 64

If $\sin \theta = \frac{8}{17}$, then find the value of $\tan \theta$.

Options :

1. 17/15

2. 15/17

3. 8/15

4. 15/8

5.

Answer : 8/15

• Question No. 65

The ratio of the present ages of Ram and Ramesh is 3 : 5. After 7 years the ratio of their ages will be 4 : 5. Find the present age of Ramesh.

Options :

1. 5 years
2. 12 years
3. 15 years
4. 7 years
- 5.

Answer : 7 years

- Question No. 66

The HCF of two numbers 110 and 1980 is:

Options :

1. 110
2. 120
3. 180
4. 140
- 5.

Answer : 110

- Question No. 67

The simplified form of $(x + 2y)^3 + (x - 2y)^3$ is:

1. $2x^3 + 24xy^2$
2. $x^3 + 8y^3$
3. $2x^3 - 24xy^2$
4. $x^3 - 8y^3$

Options :

1. 1
2. 2
3. 3
4. 4
- 5.

Answer : 1

• Question No. 68

Which of the following pairs of non-zero values of p and q make 6-digit number 674pq0 divisible by both 3 and 11?

Options :

1. p = 5 and q = 4
2. p = 2 and q = 2
3. p = 5 and q = 2
4. p = 4 and q = 2
- 5.

Answer : p = 5 and q = 2

• Question No. 69

The table given below shows the production of bike and truck by five companies.

| Companies | Production | |
|-----------|------------|-------|
| | Bike | Truck |
| G | 800 | 600 |
| H | 550 | 400 |
| I | 600 | 300 |
| J | 350 | 700 |
| K | 400 | 750 |

What is the ratio of the production of truck by company H and I together to the production bike by company J and K together?

Options :

1. 14 : 15
2. 15 : 14
3. 14 : 17
4. 14 : 19
- 5.

Answer : 14 : 15

• Question No. 70

In triangle ABC, AD is the angle bisector of angle A. If AB = 8.4 cm and AC = 5.6 cm and DC = 2.8 cm, then the length of side BC will be:

Options :

1. 7 cm
2. 5.6 cm
3. 4.2 cm
4. 2.8 cm
- 5.

Answer : 7 cm

• Question No. 71

Find the number of common tangents, if $r_1 + r_2 = C_1C_2$. (With usual notations, r_1 & r_2 and C_1 & C_2 are the radii and centres of the two circles.)

Options :

1. 3
2. 4
3. 0
4. 1
- 5.

Answer : 3

• Question No. 72

The length of the side of a cube is 5.6 cm. What is the volume of the largest sphere that can be taken out of the cube?

Options :

1. 91.98 cm^3
2. 90.69 cm^3
3. 99.96 cm^3
4. 96.98 cm^3
- 5.

Answer : 91.98 cm^3

• Question No. 73

If $k^4 + \frac{1}{k^4} = 47$, then what is the value of $k^3 + \frac{1}{k^3}$?

Options :

1. 54
2. 4.5
3. 18
4. 9
- 5.

Answer : 18

• Question No. 74

Numan does half as much work as Gagan in four-fifth of the time. If together they take 16 days to complete a work, how much time shall Gagan take to do it?

Options :

1. 23 days
2. 24 days
3. 25 days
4. 26 days
- 5.

Answer : 26 days

• Question No. 75

If $\sec 2\theta = \operatorname{cosec}(\theta - 36^\circ)$, where 2θ is an acute angle, find the value of θ

Options :

1. 20°
2. 32°

3. 42°

4. 46°

5.

Answer : 42°

• Question No. 76

Select the INCORRECTLY spelt word.

Options :

1. Delight

2. Fright

3. Knight

4. Striphe

5.

Answer : Striphe

• Question No. 77

Identify the most appropriate ANTONYM of the bold word in the given sentence. The patient was happy that he was given **ancient** methods of treatment to cure her health condition.

Options :

1. Primitive

2. Modern

3. Multiple

4. Slow

5.

Answer : Modern

• Question No. 78

Select the most appropriate option that can substitute the bold segment in the given sentence.

Don't disturb the boy, he **prepares** for his examination.

Options :

1. is preparing
2. prepared
3. was preparing
4. will be preparing
- 5.

Answer : is preparing

• Question No. 79

Rearrange the parts of the sentence in correct order. Jobseekers are not

P. being unemployed are a test of faith

Q. self-purification, where the difficulties of

R. relentlessly to a pilgrimage of

S. fatalistic but reapply themselves

Options :

1. SPQR
2. SRQP
3. PQSR
4. RPSQ
- 5.

Answer : SRQP

• Question No. 80

Select the most appropriate meaning of the bold idiom in the given sentence. "Just add a bit of cheese to your pasta and **Bob's your uncle!**" Reena suggested to me over dinner last night.

Options :

1. It changes nothing
2. It ruins everything
3. It changes the appearance
4. It becomes easily and quickly achievable
- 5.

Answer : It becomes easily and quickly achievable

• Question No. 81

Select the most appropriate ANTONYM of the given word.

Consent

Options :

1. Sanction
2. Integrity
3. Dissent
4. Variety
- 5.

Answer : Dissent

• Question No. 82

Select the most appropriate ANTONYM of the given word.

Native

Options :

1. Vicinity

2. Aboriginal
3. Foreign
4. Realm
- 5.

Answer : Foreign

• Question No. 83

Select the correct indirect form of the given sentence.

Priya assured me, "I can stay in tonight."

Options :

1. Priya told me that she could stay in tonight.
2. Priya told me that she can stay in that night.
3. Priya told me that she could stay in this night.
4. Priya told me that she could stay in that night.
- 5.

Answer : Priya told me that she could stay in that night.

• Question No. 84

Select the option that expresses the given sentence in active voice.

I was fascinated by the movie.

Options :

1. The movie was fascinated to me.
2. The movie fascinate me.
3. The movie fascinated me.
4. The movie fascinates me.
- 5.

Answer : The movie fascinated me.

- Question No. 85

The following sentence has been split into four segments. Identify the segment that contains a grammatical error.

I had walked / for most of the day / to Kanpur and then / get on the train by Mumbai.

Options :

1. to Kanpur and then
2. for most of the day
3. get on the train by Mumbai
4. I had walked
- 5.

Answer : get on the train by Mumbai

- Question No. 86

Choose the incorrectly spelt word.

Options :

1. Governance
2. Insufficient
3. Innocense
4. Enforcement
- 5.

Answer : Innocense

- Question No. 87

The question below consists of a set of labeled sentences. Out of the four options given, select the most logical order of the sentences to form a coherent paragraph.

P. He is well aware of the role he and his people play in keeping Shivsagar Lake as beautiful and ecologically thriving.

Q. However, he is also deeply aware of the fact that the urban idea of conservation often seeks to keep traditional dwellers out.

R. Jason, 45, has a quiet, confident presence.

S. He takes a long time to open up and even after that, he speaks little.

Options :

1. PRSQ
2. RQPS
3. RSPQ
4. PSQR
- 5.

Answer : RSPQ

• Question No. 88

Select the option that can be used as a one-word substitute for the given group of words.

A person having significant experience in an occupation

Options :

1. Fastidious
2. Veteran
3. Novice
4. Agnostic
- 5.

Answer : Veteran

• Question No. 89

Parts of the following sentence have been given as options. Select the option that contains a grammatical error.

The jury was not happy with the performance / and was quite harsh. / The singer took / their criticism in heart.

Options :

1. their criticism in heart.
2. The singer took
3. The jury was not happy with the performance
4. and was quite harsh.
- 5.

Answer : their criticism in heart.

• Question No. 90

Select the option that expresses the given sentence in passive voice.

The first-year students are bidding farewell to their seniors.

Options :

1. Their seniors is being bid farewell by the first-year students.
2. Farewell is to be bid to their seniors by the first-year students.
3. Farewell was being bid to their seniors by the first-year students.
4. Farewell is being bid to their seniors by the first-year students.
- 5.

Answer : Farewell is being bid to their seniors by the first-year students.

• Question No. 91

Select the most appropriate option to complete the given sentence.

He booked the tickets for the show _____.

Options :

1. in advance
2. in demand
3. in depth

4. in common

5.

Answer : in advance

• Question No. 92

Select the most appropriate option to fill in the blank and complete the collocation.

Although she didn't reveal her plans clearly, I had a _____ idea.

Options :

1. Rough
2. Concise
3. Complete
4. Clear
- 5.

Answer : Rough

• Question No. 93

Select the most appropriate meaning of the bold idiom in the given sentence.

When the District Attorney asked the convict about details of the day of the crime, he started **beating about the bush**.

Options :

1. Speaking in a confusing manner without giving a correct answer
2. Trying to invoke sympathy
3. Accusing others of the crime
4. Being excessively aggressive
- 5.

Answer : Speaking in a confusing manner without giving a correct answer

• Question No. 94

Select the most appropriate option that can substitute the bold segment in the given sentence. If there is no need to substitute it, select 'No substitution required'.

Have you want me to come with you to the dentist?

Options :

1. No substitution required
2. Has you wanted me
3. Do you want me
4. Had you want me
- 5.

Answer : Do you want me

• Question No. 95

Select the most appropriate synonym of the given word.

Perseverance

Options :

1. Discipline
2. Tolerance
3. Humbleness
4. Steadfastness
- 5.

Answer : Steadfastness

Direction:

In the following passage, some words have been deleted. Read the passage carefully and select the most appropriate option to fill in each blank.

Four of the most popular forms i.e. Facebook, Twitter, Snapchat and Instagram of social media (1)_____ great damage upon young people's mental health. These four platforms have a negative effect because they can (2) _____ children's and young people's body image worries, and worsen bullying, sleep problems, anxiety, depression and loneliness. The findings follow growing (3) _____ among politicians, health bodies, doctors and parents about young people suffering harm as a result of cyber bullying and social media (4)_____ feelings of self-loathing and leading them to commit suicide. However, the leader of the UK's psychiatrists said these findings were too simplistic and they (5)_____ blamed social media for the complex reasons why the mental health of so many young people is suffering.

• Question No. 96

Select the most appropriate option to fill in blank number 1.

Options :

1. Impious
2. Inflict
3. Discrete
4. Perpetrating
- 5.

Answer : Inflict

Direction:

In the following passage, some words have been deleted. Read the passage carefully and select the most appropriate option to fill in each blank.

Four of the most popular forms i.e. Facebook, Twitter, Snapchat and Instagram of social media (1)_____ great damage upon young people's mental health. These four platforms have a negative effect because they can (2) _____ children's and young people's body image worries, and worsen bullying, sleep problems, anxiety, depression and loneliness. The findings follow growing (3) _____ among politicians, health bodies, doctors and parents about young people suffering harm as a result of cyber bullying and social media (4)_____ feelings of self-loathing and leading them to commit suicide. However, the leader of the UK's psychiatrists said these findings were too simplistic and they (5)_____ blamed social media for the complex reasons why the mental health of so many young people is suffering.

- Question No. 97

Select the most appropriate option to fill in blank number 2.

Options :

1. Exacerbate
2. Mitigate
3. Alleviate
4. Effectuate
- 5.

Answer : Exacerbate

Direction:

In the following passage, some words have been deleted. Read the passage carefully and select the most appropriate option to fill in each blank.

Four of the most popular forms i.e. Facebook, Twitter, Snapchat and Instagram of social media (1)_____ great damage upon young people's mental health. These four platforms have a negative effect because they can (2) _____ children's and young people's body image worries, and worsen bullying, sleep problems, anxiety, depression and loneliness. The findings follow growing (3) _____ among politicians, health bodies, doctors and parents about young people suffering harm as a result of cyber bullying and social media (4)_____ feelings of self-loathing and leading them to commit suicide. However, the leader of the UK's psychiatrists said these findings were too simplistic and they (5)_____ blamed social media for the complex reasons why the mental health of so many young people is suffering.

- Question No. 98

Select the most appropriate option to fill in blank number 3.

Options :

1. Concern
2. Consternate
3. Bridle

4. Poise

5.

Answer : Concern

Direction:

In the following passage, some words have been deleted. Read the passage carefully and select the most appropriate option to fill in each blank.

Four of the most popular forms i.e. Facebook, Twitter, Snapchat and Instagram of social media (1)_____ great damage upon young people's mental health. These four platforms have a negative effect because they can (2) _____ children's and young people's body image worries, and worsen bullying, sleep problems, anxiety, depression and loneliness. The findings follow growing (3) _____ among politicians, health bodies, doctors and parents about young people suffering harm as a result of cyber bullying and social media (4)_____ feelings of self-loathing and leading them to commit suicide. However, the leader of the UK's psychiatrists said these findings were too simplistic and they (5)_____ blamed social media for the complex reasons why the mental health of so many young people is suffering.

• Question No. 99

Select the most appropriate option to fill in blank number 4.

Options :

1. Ebbing

2. Reinforcing

3. Accentuate

4. Augment

5.

Answer : Reinforcing

Direction:

In the following passage, some words have been deleted. Read the passage carefully and select the most appropriate option to fill in each blank.

Four of the most popular forms i.e. Facebook, Twitter, Snapchat and Instagram of social media (1)_____ great damage upon young people's mental health. These four platforms have a negative effect because they can (2) _____ children's and young people's body image worries, and worsen bullying, sleep problems, anxiety, depression and loneliness. The findings follow growing (3) _____ among politicians, health bodies, doctors and parents about young people suffering harm as a result of cyber bullying and social media (4)_____ feelings of self-loathing and leading them to commit suicide. However, the leader of the UK's psychiatrists said these findings were too simplistic and they (5)_____ blamed social media for the complex reasons why the mental health of so many young people is suffering.

- Question No. 100

Select the most appropriate option to fill in blank number 5.

Options :

1. Impartially
2. Unfairly
3. Legitimately
4. Outlandish
- 5.

Answer : Unfairly

[Attempt Mock Test Now](#)

All ixamBee Mock Test are FREE @ www.ixamBee.com