

Direction:

Select the odd letters/number/symbols form the given alternatives.

- Question No. 1

Find the one which does not belong to that group?

Options :

1. Atlas
2. physical
3. climate
4. political
- 5.

Answer : Atlas

Direction:

Find the wrong number in the series:

- Question No. 2

16, 18, 39, 111, 489, 2451

Options :

1. 111
2. 18
3. 489
4. 2451
- 5.

Answer : 111

Direction:

In the following question, select the related letter/number/ word from the given alternatives.

- Question No. 3

34 : 144 :: 27 : ?

Options :

1. 121
2. 125
3. 196
4. 169
- 5.

Answer : 196

- Question No. 4

In a certain code language, if 'DROP' is written as ^@#\$ and 'HOPE' is written as %#\$^, then what is the code for ROPE?

Options :

1. @#\$^
2. #@^&
3. ^#@\$.
4. @^&#
- 5.

Answer : @#\$^

- Question No. 5

In each of the following questions, a group of four words is given. Choose the odd word.

Options :

1. P
2. S

3. Q

4. W

5.

Answer : P

• Question No. 6

In the following number sequence, how many such even numbers are there which are exactly divisible by its immediate preceding number but not exactly divisible by its immediate following number?

4 9 5 2 6 8 3 9 4 5 9 8 4 8 5 3 2 6 9 3

Options :

1. One

2. Two

3. Four

4. Three

5.

Answer : Three

• Question No. 7

G is the daughter of H. F is the only daughter of N but N is not the father of F. I is the son of P and brother of F. How is P related to F if H is the brother of I?

Options :

1. Brother

2. Father-in-law

3. Father

4. Uncle

5.

Answer : Father

Direction:

In questions, a series is given, with one term missing. Choose the correct alternative from the given ones that will complete the series.

- Question No. 8

2, 6, 8, 11, 15, 17, ?

Options :

1. 22
2. 25
3. 20
4. 15
- 5.

Answer : 20

Direction:

In each of the following questions, a group of four words are given. Choose the word which is odd.

- Question No. 9

Options :

1. Incisors
2. Molars
3. Scissors
4. Premolars
- 5.

Answer : Scissors

- Question No. 10

If 'SOME' is coded as 'TLNB' then how will 'TIME' be coded?

Options :

1. UNFB
2. UBNF
3. UFNB
4. UNBF
- 5.

Answer : UFNB

• Question No. 11

Which day falls on 04th March of a year? If 16th December of the previous year was a Monday.

Options :

1. Sunday
2. Monday
3. Tuesday
4. Can't be determined
- 5.

Answer : Can't be determined

Direction:

In each question below are given some statements followed by some conclusions. You have to take the given statements to be true even if they seem to be at variance with commonly known facts. Read all the conclusions and then decide which of the given conclusions logically follows from the given statements, disregarding commonly known facts:

• Question No. 12

Statements:

Only steel is gold

No silver is steel

No iron is silver

Conclusions:

I. Some steels are irons.

II. All irons are gold is a possibility.

Options :

1. Only II follows
2. Either I or II follows
3. Only I follows
4. Neither I nor II follows
- 5.

Answer : Neither I nor II follows

• Question No. 13

I is the father of G but G is not the son of I, who is married to P. N is the mother-in-law of P. How is G related to E, if E is married to N?

Options :

1. Grand son
2. Nephew
3. Son-in-law
4. Grand daughter
- 5.

Answer : Grand daughter

Direction:

In each of the following questions, select the related letter/word/number from the given alternatives.

• Question No. 14

FRI : Dehradun :: RBI : (?)

Options :

1. Delhi
2. Kolkata
3. Chennai
4. Mumbai
- 5.

Answer : Mumbai

• Question No. 15

NPR : WUS :: DFH : ?

Options :

1. LKI
2. MJL
3. MKI
4. JKI
- 5.

Answer : MKI

Direction:

Select the related word/letters/number from the given alternatives.

• Question No. 16

HIJK : LMNO :: TUVW : ?

Options :

1. WXYZ
2. ZABC
3. YZAB
4. XYZA
- 5.

Answer : XYZA

Direction:

In each question below are given some statements followed by some conclusions. You have to take the given statements to be true even if they seem to be at variance with commonly known facts. Read all the conclusions and then decide which of the given conclusions logically follows from the given statements, disregarding commonly known facts:

- Question No. 17

Statements:

All hills are bills

All drills are grills

No hill is drill

Conclusions:

I. No grill is hill.

II. Some drills are bills is a possibility.

Options :

1. Neither I nor II follows
2. Either I or II follows
3. Only I follows
4. Only II follows
- 5.

Answer : Only II follows

- Question No. 18

Which one set of letters when sequentially placed at the gaps in the given letter series shall complete it ?

_ rq _ prp _ qqp _ pr _ qpr

Options :

1. pqrsr

2. pqrrq
3. qprpq
4. qqrrp
- 5.

Answer : pqrrq

• Question No. 19

If the digits in the number "73962548" are arranged in such a way that all the odd numbers are arranged first in ascending order and then all the even digits are arranged in descending order from left to right, what will be the sum of the digits which are fourth from the right and third from the left in the new arrangement.

Options :

1. 12
2. 14
3. 15
4. 21
- 5.

Answer : 15

Direction:

Read the direction carefully and answer the following question.

• Question No. 20

If '+' means '-', '-' means 'x', '÷' means '+', then what will be the value of $300 + 28 - 5 + 32 \div 14 = ?$

Options :

1. 156
2. 142
3. 124
4. 158
- 5.

Answer : 142

• Question No. 21

Select the option that is related to the third term in the same way as the second term is related to the first term.

EM : KS :: GO : ?

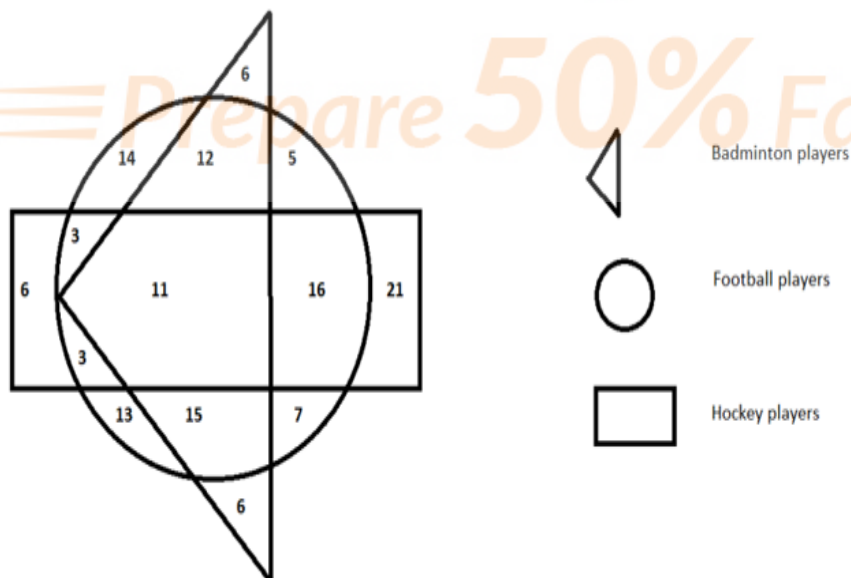
Options :

1. LT
2. MT
3. NV
4. MU
- 5.

Answer : MU

Direction:

Study the following diagram and answer questions based on it.



• Question No. 22

The number of non-football players is?

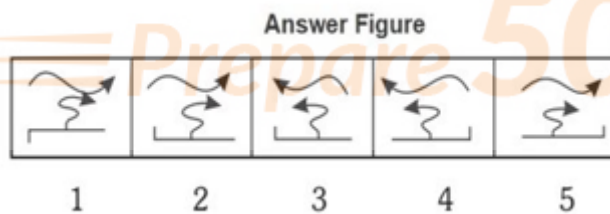
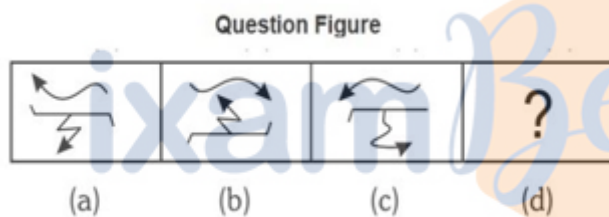
Options :

1. 45
2. 25
3. 39
4. 35
- 5.

Answer : 39

• Question No. 23

Select a suitable figure from the Answer Figures that would replace the question mark (?) from question figure.



Options :

1. 1
2. 2
3. 3
4. 4
- 5.

Answer : 2

• Question No. 24

Choose the alternative which is closely resembles the mirror image of the given combination.

TARAIN1014A

(1) A4101N1A9A1

(3) A1014TARA1N

(2) A1014N1A9AT

(4) A4101N1A9AT

Options :

1. 1

2. 2

3. 3

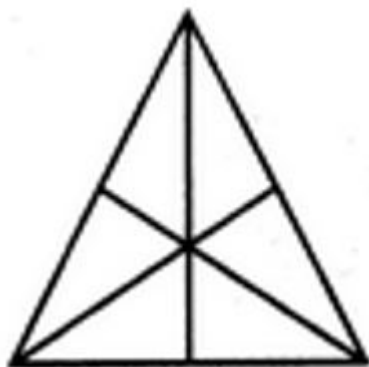
4. 4

5.

Answer : 4

• Question No. 25

Find the number of triangles in the given figure.



Options :

1. 16

2. 13

3. 9

4. 7

5.

Answer : 16

- Question No. 26

"Rukmani Devi" got which award in 1956?

Options :

1. Bharat Ratna

2. Padam Bhushan

3. Padam Shri

4. Padam Vibhushan

5.

Answer : Padam Bhushan

- Question No. 27

According to which article of the Indian Constitution is the procedure for amendment of the constitution laid down?

Options :

1. Article 356

2. Article 370

3. Article 368

4. Article 365

5.

Answer : Article 368

- Question No. 28

Which state in India celebrates the festival of Bihu?

Options :

1. Bihar
2. Assam
3. Kerala
4. Rajasthan
- 5.

Answer : Assam

• Question No. 29

Which article of the Indian Constitution deals with the prohibition of traffic in human beings and forced labor?

Options :

1. Article 21
2. Article 23
3. Article 19
4. Article 25
- 5.

Answer : Article 23

• Question No. 30

Pradhan Mantri Kaushal Vikas Yojana (PMKVY) is the flagship scheme of which ministry?

Options :

1. Ministry of Finance
2. Ministry of Skill Development and Entrepreneurship
3. Ministry of Education
4. Ministry of Health and Family Welfare
- 5.

Answer : Ministry of Skill Development and Entrepreneurship

• Question No. 31

What was the reason for awarding the Nobel Prize to Guglielmo Marconi and Karl Ferdinand Braun in 1909?

Options :

1. Their contributions to space exploration
2. Their work in nuclear physics
3. Their achievements in wireless telegraphy development
4. Their discoveries in quantum mechanics
- 5.

Answer : Their achievements in wireless telegraphy development

• Question No. 32

Who received the 2023 IPL Orange Cap?

Options :

1. Shubman Gill
2. Ishan Kishan
3. Faf Du Plessis
4. Devon Conway
- 5.

Answer : Shubman Gill

• Question No. 33

What is the byproduct of the reaction between Potassium and Alcohol?

Options :

1. Potassium oxide

2. Potassium alkoxide
3. Potassium hydroxide
4. Potassium chloride
- 5.

Answer : Potassium alkoxide

• Question No. 34

Who is the famous santoor player in India?

Options :

1. Girija Devi
2. Pt Shivkumar Sharma
3. Binda din
4. Vishnu Sharma
- 5.

Answer : Pt Shivkumar Sharma

• Question No. 35

Who among the following founded the Widow Remarriage Association in the year 1861?

Options :

1. MG Ranade
2. Keshavchandra sen
3. Jyotiba rao Phule
4. Dada Bhai Nauroji
- 5.

Answer : MG Ranade

• Question No. 36

What is the melting point of Aluminium?

Options :

1. 300.15°C (572.27°F)
2. 660.32°C (1220.58°F)
3. 1000°C (1832°F)
4. 1500°C (2732°F)
- 5.

Answer : 660.32°C (1220.58°F)

- Question No. 37

Night blindness is a condition caused by a deficiency of which vitamin?

Options :

1. Vitamin A
2. Vitamin B12
3. Vitamin D
4. Vitamin K
- 5.

Answer : Vitamin A

- Question No. 38

Pellagra is a condition associated with the deficiency of which vitamin?

Options :

1. Vitamin A
2. Vitamin B3 (Niacin)
3. Vitamin D
4. Vitamin E
- 5.

Answer : Vitamin B3 (Niacin)

• Question No. 39

What effect does adding salt to ice have on its melting point?

Options :

1. Increases the melting point
2. Decreases the melting point
3. Does not affect the melting point
4. Turns ice into steam
- 5.

Answer : Decreases the melting point

• Question No. 40

Aditi Ashok is associated with which sports?

Options :

1. Golf
2. Badminton
3. Table Tennis
4. Cricket
- 5.

Answer : Golf

• Question No. 41

When the central bank increases the repo rate, what is its impact on borrowing and lending in the economy?

Options :

1. It encourages more borrowing and lending

2. It discourages borrowing and encourages saving
3. It has no impact on borrowing and lending
4. It increases interest rates for borrowers and decreases rates for lenders
- 5.

Answer : It discourages borrowing and encourages saving

• Question No. 42

Which physical instrument is used to measure the intensity of earthquakes?

Options :

1. Anemometer
2. Seismometer
3. Hygrometer
4. Thermometer
- 5.

Answer : Seismometer

• Question No. 43

Warli painting is associated with which state in India?

Options :

1. Rajasthan
2. Maharashtra
3. Gujarat
4. Kerala
- 5.

Answer : Maharashtra

• Question No. 44

Head Quarter of "Bandhan Bank" is located in?

Options :

1. Kolkata
2. Hyderabad
3. Mumbai
4. Ahmedabad
- 5.

Answer : Kolkata

• Question No. 45

What is the standard size of a singles tennis court?

Options :

1. 23.77 meters x 10.97 meters
2. 23.77 meters x 8.23 meters
3. 27.43 meters x 12.80 meters
4. 27.43 meters x 8.23 meters
- 5.

Answer : 23.77 meters x 8.23 meters

• Question No. 46

"Mundari" Dance is associated with which state?

Options :

1. Jharkhand
2. Assam
3. Arunachal Pradesh
4. Tamil Nadu
- 5.

Answer : Jharkhand

• Question No. 47

Which DPSP emphasizes the importance of providing adequate means of livelihood to all citizens and preventing the concentration of wealth and resources in a few hands?

Options :

1. Right to work (Article 41)
2. Living wage for workers (Article 43)
3. Distribution of material resources (Article 39B)
4. Right to education (Article 45)
- 5.

Answer : Distribution of material resources (Article 39B)

• Question No. 48

Suraj Kund Mela is celebrated in which state?

Options :

1. Chattisgarh
2. Orissa
3. Telangana
4. Haryana
- 5.

Answer : Haryana

• Question No. 49

Who won the Nobel Prize in Chemistry in 2022?

Options :

1. Carolyn R. Bertozzi
2. Alain Aspect
3. John Clauser
4. Anton Zeilinger
- 5.

Answer : Carolyn R. Bertozzi

• Question No. 50

According to the octet rule, which group of elements tends to gain electrons to achieve a stable electron configuration?

Options :

1. Alkali metals (Group 1)
2. Alkaline earth metals (Group 2)
3. Halogens (Group 17)
4. Noble gases (Group 18)
- 5.

Answer : Halogens (Group 17)

• Question No. 51

If $x^4 + 1/(x^4) = 194$, then find the value of $1/(x^3) + x^3$?

Options :

1. 168
2. 14
3. 79
4. 52
- 5.

Answer : 52

- Question No. 52

If $a + b + c + d = 4$, then the value of

$$\frac{1}{(1-a)(1-b)(1-c)} + \frac{1}{(1-b)(1-c)(1-d)} + \frac{1}{(1-c)(1-d)(1-a)} + \frac{1}{(1-d)(1-a)(1-b)}$$

is -

Options :

1. 0
2. 5
3. 1
4. 4
- 5.

Answer : 0

Direction:

What value should come in place of the question-mark(?) in the following questions:

- Question No. 53

$$189500 - 22650 + 48 \times ? - 352 \times 18 = 162674$$

Options :

1. 45
2. 37
3. 30
4. 55
- 5.

Answer : 45

Direction:

What value should come in place of the question-mark (?) in the following questions:

- Question No. 54

$$\sqrt{4096} + \sqrt{(?)} + 13 - 29 = 148$$

Options :

1. 141000
2. 10000
3. 3600
4. 4900
5. None of these

Answer : 10000

- Question No. 55

$$\text{If } x + y + z = 0 \text{ Find } \frac{x^2}{yz} + \frac{y^2}{xz} + \frac{z^2}{xy} = ?$$

Options :

1. 6
2. 3
3. -3
4. -6
- 5.

Answer : 3

- Question No. 56

$$\frac{\sqrt{1+x} + \sqrt{1-x}}{\sqrt{1+x} - \sqrt{1-x}} = 3 \text{ then find the value of } x.$$

Options :

1. $\frac{3}{4}$

2. $3/5$ 3. $4/5$ 4. $6/7$

5.

Answer : $3/5$

- Question No. 57

If $\frac{x}{y+z} + \frac{y}{z+x} + \frac{z}{x+y} = 1$, Find $\frac{x^2}{y+z} + \frac{y^2}{z+x} + \frac{z^2}{x+y}$

Options :

1. 0

2. -1

3. 1

4. 2

5.

Answer : 0

- Question No. 58

If $x = a(b - c)$, $y = b(c - a)$ and $z = c(a - b)$, find the value of $(x/a)^3 + (y/b)^3 + (z/c)^3$?

Options :

1. $xy^2/3abc$ 2. $3xy^2ab$ 3. $3xyz/abc$ 4. xy^2/abc

5.

Answer : $3xyz/abc$

- Question No. 59

What is the highest common factor of $(x^3 - x^2 - x - 15)$ and $(x^3 - 3x^2 - 3x + 9)$?

Options :

1. $(x - 1)$
2. $(x - 2)$
3. $(x - 3)$
4. $(x - 5)$
- 5.

Answer : $(x - 3)$

• Question No. 60

If the 14th term of an arithmetic series is 6 and 6th term is 14, then what is the 95th term?

Options :

1. - 75
2. 75
3. 80
4. - 80
- 5.

Answer : - 75

• Question No. 61

A shopkeeper sells an article for 10% profit. If he buys it for 4% less and sells it for profit then he gets Rs. 10 more.

What is the original cost price?

Options :

1. 250
2. 200
3. 255
4. 20

5.

Answer : 250

- Question No. 62

An alloy contains copper and zinc in the ratio 5 : 3 and another contains copper and tin in the ratio 8 : 5. If equal weights of the two are melted together to form a 3rd alloy, find the weight of tin per kg in the new alloy.

Options :

1. 40/129

2. 5/13

3. 5/26

4. 28/5

5.

Answer : 5/26

- Question No. 63

In a group of 3 numbers, the 1st is double of 2nd and half of third. If the average of the three numbers is 56 then find the difference between the third and first number.

Options :

1. 48

2. 43

3. 45

4. 40

5.

Answer : 48

- Question No. 64

Shankar borrowed Rs. 7,200 at simple interest and repaid an amount of Rs. 9,504 after 7 years. If the interest rate p.a. charged for first 4 years was 5% p.a., find the interest rate p.a. charged for the last 3 years.

Options :

1. 2%
2. 4%
3. 6%
4. 8%
5. None of these

Answer : 4%

• Question No. 65

Train 'A' of length 150 metres crosses a platform of length 250 meters in 20seconds. If the ratio of the speed of train 'A' to that of train 'B' is 5:7, then find $(1/5)$ th of the length (in metres) of train 'B' given that train 'B' can cross a pole in 10 seconds.

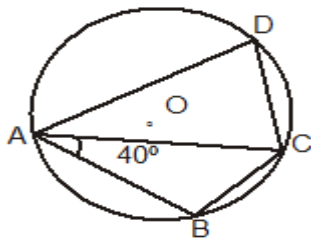
Options :

1. 84 metres
2. 102 metres
3. 66 metres
4. 56 metres
5. none of these

Answer : 56 metres

• Question No. 66

In the figure given below, O is the centre of a circle circumscribing a quadrilateral $ABCD$.
If $AB = BC$ and $\angle BAC = 40^\circ$, then what is $\angle ADC$ equal to ?



- (a) 50° (b) 60°
(c) 70° (d) 80°

Options :

1. a)
2. b)
3. c)
4. d)
- 5.

Answer : d)

• Question No. 67

Find the area of largest square that can be inscribed in a circle of radius ' r '.

Options :

1. r^2
2. $\sqrt{3}r^2$
3. $2r^2$
4. $\sqrt{5}r^2$
- 5.

Answer : $2r^2$

- Question No. 68

The sides of a triangle are 24 cm, 26 cm and 10 cm. At each of its vertices, circles of radius 4.2 cm are drawn. What is the area (in cm^2) of the triangle, excluding the portion covered by the sectors of the circles? ($\pi = 22/7$)

Options :

1. 27.72
2. 120
3. 105.86
4. 92.28
- 5.

Answer : 92.28

- Question No. 69

The angle of depression of two ships from the top of a light house are 45° and 30° . if the ships are 120m on the opposite sides of light house apart, find the height of the light house.

Options :

1. 35 m
2. 44 m
3. 51 m
4. 41 m
- 5.

Answer : 44 m

- Question No. 70

Line AB is 24 m in length and is tangent to the inner one of the two concentric circles at point C. Points A and B lie on the circumference of the outer circle. It is known that the radii of the two circles are integers. The radius of the outer circle is:

Options :

1. 13 m
2. 5 m
3. 7 m
4. 4 m
- 5.

Answer : 13 m

Direction:

The table is shown below Read the data carefully and answer the questions that follow. The Table shows the total number of students in four different colleges and the Percentage of students who appeared for an entrance examination in physics and math's.

College	Total number Of students	Percentage of students Appeared	
		Physics	Math's
P	900	25%	14%
Q	800	20%	12%
R	720	35%	20%
S	450	20%	24%

- Question No. 71

What is the difference in the number of students who appeared for the math's exam from Q and R together and the number of students who appeared for the physics exam from P and S together?

Options :

1. 80
2. 75
3. 95
4. 70
- 5.

Answer : 75

Direction:

The table is shown below Read the data carefully and answer the questions that follow. The Table shows the total number of students in four different colleges and the Percentage of students who appeared for an entrance examination in physics and math's.

College	Total number Of students	Percentage of students Appeared	
		Physics	Math's
P	900	25%	14%
Q	800	20%	12%
R	720	35%	20%
S	450	20%	24%

- Question No. 72

What is the total number of students who appeared for the math's exam from all the colleges?

Options :

1. 474
2. 475
3. 400
4. 450
- 5.

Answer : 474

Direction:

The table is shown below Read the data carefully and answer the questions that follow. The Table shows the total number of students in four different colleges and the Percentage of students who appeared for an entrance examination in physics and math's.

College	Total number Of students	Percentage of students Appeared	
		Physics	Math's
P	900	25%	14%
Q	800	20%	12%
R	720	35%	20%
S	450	20%	24%

- Question No. 73

What is the ratio of the number of students who appeared for the math's exam from P and R together to those who appeared for the physics exam from Q and S together?

Options :

1. 26:25
2. 27:25
3. 33:25
4. 22:25
- 5.

Answer : 27:25

• Question No. 74

If $\sec 53^\circ = (a+b)/(2\sqrt{ab})$, then, what will be the value of $\tan 37^\circ$?

Options :

1. $(a-b)/(a+b)$
2. $2ab/(a+b)$
3. $(2\sqrt{ab})/(a-b)$
4. $(a+b)/(a-b)$
- 5.

Answer : $(2\sqrt{ab})/(a-b)$

• Question No. 75

The value of $(3\tan 10^\circ - \tan^3 10^\circ)/(1 - 3\tan^2 10^\circ)$ is equal to

Options :

1. $1/\sqrt{3}$
2. $\sqrt{3}$
3. 1
4. $2/\sqrt{3}$
- 5.

Answer : $1/\sqrt{3}$

Direction:

Choose a word that is similar in meaning to the given words.

- Question No. 76

Fake

Options :

1. False
2. Real
3. Factual
4. Genuine
- 5.

Answer : False

Direction:

Choose a word that is similar in meaning to the given words.

- Question No. 77

Smug

Options :

1. complacent
2. amicable
3. aggressive
4. discontent
- 5.

Answer : complacent

Direction:

Choose the word that is opposite in meaning to the given words.

- Question No. 78

Secure

Options :

1. Fortify
2. Precarious
3. Grace
4. Scanty
- 5.

Answer : Precarious

Direction:

Choose the word that is opposite in meaning to the given words.

- Question No. 79

Exact

Options :

1. Real
2. Sincere
3. Inaccurate
4. Precise
- 5.

Answer : Inaccurate

Direction:

Select the most appropriate 'one word' for the expression given below.

- Question No. 80

Extreme fear of water

Options :

1. Aerophobia
2. kleptomania

3. Hydrophobia

4. Acrophobia

5.

Answer : Hydrophobia

Direction:

Select the most appropriate 'one word' for the expression given below.

• Question No. 81

A government run by a king or a queen

Options :

1. Democracy

2. Plutocracy

3. Monarchy

4. Aristocracy

5.

Answer : Monarchy

• Question No. 82

Select the wrongly spelled word.

Options :

1. Disappoint

2. Disappear

3. Disallow

4. Discomfort

5.

Answer : Disappoint

• Question No. 83

Select the correctly spelled word.

Options :

1. Liable
2. Fundemental
3. Frinzied
4. Exicution
- 5.

Answer : Liable

Direction:

Select the most appropriate meaning of the given idiom.

- Question No. 84

Couch potato

Options :

1. A person who sleeps all day.
2. A person who watches too much television.
3. A ripe potato.
4. A person who has a complex nature.
- 5.

Answer : A person who watches too much television.

Direction:

Select the most appropriate meaning of the given idiom.

- Question No. 85

A bed of roses

Options :

1. A bed full of roses

2. An easy and happy situation
3. A difficult path
4. A rose with a pleasant smell.
- 5.

Answer : An easy and happy situation

Direction:

Choose the option that is the correct passive form of the given sentences.

- Question No. 86

She gave him a book for his birthday.

Options :

1. She has been given him a book for his birthday.
2. She had given a book to him for his birthday.
3. A book was given to him for his birthday by her.
4. She will be giving him a book for his birthday.
- 5.

Answer : A book was given to him for his birthday by her.

Direction:

Choose the option that is the correct indirect form of the given sentences.

- Question No. 87

I said to him, "Why are you late?"

Options :

1. I said to him why are you late?
2. I told him why are you late?
3. I asked him why are you late.
4. I asked him why he was late.
- 5.

Answer : I asked him why he was late.

Direction:

In the following passage, at certain points, you are given a choice of four words one of which fits the meaning of the passage. Click on the option which you think is most suitable at this point.

A king has a tree that bears golden apples. When the apples are1....., they are counted. When one of those apples goes missing, it is reported to the king. The king's eldest son is told to watch the tree all night. He falls asleep, however, and another apple is taken. The following night, the king's second son watches the tree. He also falls asleep and2..... apple is taken. On the third night, the king's youngest son watches the tree. He stays awake and sees a golden bird take an apple. He fires an arrow3..... the bird. The bird escapes unharmed but loses a feather. The prince takes the4..... to his father. The king is told that the single feather is worth5..... than his entire kingdom. Not content with the single feather, the king decides that he wants an entire golden bird.

• Question No. 88

Fill in the blank 1.

Options :

1. Red
2. Green
3. Ripe
4. Rotten
- 5.

Answer : Ripe

Direction:

In the following passage, at certain points, you are given a choice of four words one of which fits the meaning of the passage. Click on the option which you think is most suitable at this point.

A king has a tree that bears golden apples. When the apples are1....., they are counted. When one of those apples goes missing, it is reported to the king. The king's eldest son is told to watch the tree all night. He falls asleep, however, and another apple is taken. The following night, the king's second son watches the tree. He also falls asleep and2..... apple is taken. On the third night, the king's youngest son watches the tree. He stays awake and sees a golden bird take an apple. He fires an arrow3..... the bird. The bird escapes unharmed but loses a feather. The prince takes the4..... to his father. The king is told that the single feather is worth5.....

than his entire kingdom. Not content with the single feather, the king decides that he wants an entire golden bird.

• Question No. 89

Fill in the blank 2.

Options :

1. Other
2. Another
3. None
4. Used
- 5.

Answer : Another

Direction:

In the following passage, at certain points, you are given a choice of four words one of which fits the meaning of the passage. Click on the option which you think is most suitable at this point.

A king has a tree that bears golden apples. When the apples are1....., they are counted. When one of those apples goes missing, it is reported to the king. The king's eldest son is told to watch the tree all night. He falls asleep, however, and another apple is taken. The following night, the king's second son watches the tree. He also falls asleep and2..... apple is taken. On the third night, the king's youngest son watches the tree. He stays awake and sees a golden bird take an apple. He fires an arrow3..... the bird. The bird escapes unharmed but loses a feather. The prince takes the4..... to his father. The king is told that the single feather is worth5..... than his entire kingdom. Not content with the single feather, the king decides that he wants an entire golden bird.

• Question No. 90

Fill in the blank 3.

Options :

1. On
2. At
3. Under

4. Higher

5.

Answer : At

Direction:

In the following passage, at certain points, you are given a choice of four words one of which fits the meaning of the passage. Click on the option which you think is most suitable at this point.

A king has a tree that bears golden apples. When the apples are1....., they are counted. When one of those apples goes missing, it is reported to the king. The king's eldest son is told to watch the tree all night. He falls asleep, however, and another apple is taken. The following night, the king's second son watches the tree. He also falls asleep and2..... apple is taken. On the third night, the king's youngest son watches the tree. He stays awake and sees a golden bird take an apple. He fires an arrow3..... the bird. The bird escapes unharmed but loses a feather. The prince takes the4..... to his father. The king is told that the single feather is worth5..... than his entire kingdom. Not content with the single feather, the king decides that he wants an entire golden bird.

• Question No. 91

Fill in the blank 4.

Options :

1. Claws

2. Feather

3. Egg

4. Tarsus

5.

Answer : Feather

Direction:

In the following passage, at certain points, you are given a choice of four words one of which fits the meaning of the passage. Click on the option which you think is most suitable at this point.

A king has a tree that bears golden apples. When the apples are1....., they are counted. When one of those apples goes missing, it is reported to the king. The king's eldest son is told to watch the tree all night. He falls asleep, however, and another apple is taken. The following night, the king's second son watches the tree. He also

falls asleep and2..... apple is taken. On the third night, the king's youngest son watches the tree. He stays awake and sees a golden bird take an apple. He fires an arrow3..... the bird. The bird escapes unharmed but loses a feather. The prince takes the4..... to his father. The king is told that the single feather is worth5..... than his entire kingdom. Not content with the single feather, the king decides that he wants an entire golden bird.

• Question No. 92

Fill in the blank 5.

Options :

1. More
2. Most
3. Vast
4. Decrease
- 5.

Answer : More

Direction:

The following sentence has been divided into parts. One of them contains an error. Select the part that contains an error from the given option. If the sentence is correct as it is given and No correction is required, mark (d) as your answer.

• Question No. 93

Rahul were (A)/ unable to join the meeting (B)/ because of an eye infection(C)/ no error (D).

Options :

1. A
2. B
3. C
4. D
- 5.

Answer : A

Direction:

The following sentence has been divided into parts. One of them contains an error. Select the part that contains an error from the given option. If the sentence is correct as it is given and No correction is required, mark (d) as your answer.

- Question No. 94

Viral conjunctivitis is (A)/ most of commonly caused by (B)/contagious viruses associated with the common cold(C)/ no error (D).

Options :

1. A
2. B
3. C
4. D
- 5.

Answer : B

Direction:

The following sentence has been divided into parts. One of them contains an error. Select the part that contains an error from the given option. If the sentence is correct as it is given and No correction is required, mark (d) as your answer.

- Question No. 95

The earth had (A)/ passed from a warming phase (B)/ into a “era of global boiling”(C)/ no error (D).

Options :

1. A
2. B
3. C
4. D
- 5.

Answer : C

Direction:

Read the following passage and answer the questions based on it.

The Gandhian philosophy of Satyagraha is a natural outcome of the supreme concept of truth. If truth is the ultimate reality, then it is imperative to safeguard the criteria and foundations of truth. A votary of God which is the highest Truth and the highest Reality must be utterly selfless and gentle. He should have an unconquerable determination to fight for the supremacy of spiritual and moral values. Thus alone can he vindicate his sense of ethical devotion.

Satyagraha means the exercise of the purest soul force against all injustice, oppression, and exploitation. Suffering and trust are attributes of soul force. The active nonviolent resistance of the 'heroic meek' makes an immediate appeal to the heart. It wants not to endanger the opponent but to overwhelm him with the over-flooding power of innocence. Satyagraha or stupendous effort at conversion can be applied against the Government, the social Czars, and leaders of 'orthodoxy'.

Satyagraha is an inherent birthright of a person. It is not merely a sacred right but it can also be a sacred duty. If the Government does not represent the will of the people, and if it begins to support dishonesty and terrorism, then it should be disobeyed. But one who wants to vindicate his rights should be prepared to bear all kinds of suffering.

There are different techniques of Satyagraha. Fasting can be one form of Satyagraha, but it has to be applied only against those who are bound by ties of close personal affection. Voluntary migration can be another form of Satyagraha. "Tyranny is a kind of plague and when it is likely to make us angry or weak, it is wise to leave the scene of such temptation," said Gandhi. He even supported Hijrat. The exodus refers to the planned flight of the Israelites. In Russia, there was the flight of the Doukhabours who were nonviolent. Gandhi would not consider the 'scorched earth policy' to be a form of Satyagraha. He ruled out underground activities, even though entirely innocent, as a part of a legitimate fight for freedom based on truth and nonviolence.

- Question No. 96

According to the passage, what do you understand about the term "SATYAGRAHA".

Options :

1. Satyagraha is a technique of war.
2. Satyagraha is a kind of plague.
3. Satyagraha means the exercise of the purest soul force against all injustice.
4. Satyagraha is a weapon of violence.
- 5.

Answer : Satyagraha means the exercise of the purest soul force against all injustice.

Direction:

Read the following passage and answer the questions based on it.

The Gandhian philosophy of Satyagraha is a natural outcome of the supreme concept of truth. If truth is the ultimate reality, then it is imperative to safeguard the criteria and foundations of truth. A votary of God which is the highest Truth and the highest Reality must be utterly selfless and gentle. He should have an unconquerable determination to fight for the supremacy of spiritual and moral values. Thus alone can he vindicate his sense of ethical devotion.

Satyagraha means the exercise of the purest soul force against all injustice, oppression, and exploitation. Suffering and trust are attributes of soul force. The active nonviolent resistance of the 'heroic meek' makes an immediate appeal to the heart. It wants not to endanger the opponent but to overwhelm him with the over-flooding power of innocence. Satyagraha or stupendous effort at conversion can be applied against the Government, the social Czars, and leaders of 'orthodoxy'.

Satyagraha is an inherent birthright of a person. It is not merely a sacred right but it can also be a sacred duty. If the Government does not represent the will of the people, and if it begins to support dishonesty and terrorism, then it should be disobeyed. But one who wants to vindicate his rights should be prepared to bear all kinds of suffering.

There are different techniques of Satyagraha. Fasting can be one form of Satyagraha, but it has to be applied only against those who are bound by ties of close personal affection. Voluntary migration can be another form of Satyagraha. "Tyranny is a kind of plague and when it is likely to make us angry or weak, it is wise to leave the scene of such temptation," said Gandhi. He even supported Hijrat. The exodus refers to the planned flight of the Israelites. In Russia, there was the flight of the Doukhabours who were nonviolent. Gandhi would not consider the 'scorched earth policy to be a form of Satyagraha. He ruled out underground activities, even though entirely innocent, as a part of a legitimate fight for freedom based on truth and nonviolence.

• Question No. 97

Which of the following is the most appropriate title of the passage?

Options :

1. Gandhi ji and Satyagraha

2. The Gandhian philosophy of Satyagraha.
3. Effect of Satyagraha on life
4. Satyagraha is an inherent right.
- 5.

Answer : The Gandhian philosophy of Satyagraha.

Direction:

Read the following passage and answer the questions based on it.

The Gandhian philosophy of Satyagraha is a natural outcome of the supreme concept of truth. If truth is the ultimate reality, then it is imperative to safeguard the criteria and foundations of truth. A votary of God which is the highest Truth and the highest Reality must be utterly selfless and gentle. He should have an unconquerable determination to fight for the supremacy of spiritual and moral values. Thus alone can he vindicate his sense of ethical devotion.

Satyagraha means the exercise of the purest soul force against all injustice, oppression, and exploitation. Suffering and trust are attributes of soul force. The active nonviolent resistance of the 'heroic meek' makes an immediate appeal to the heart. It wants not to endanger the opponent but to overwhelm him with the over-flooding power of innocence. Satyagraha or stupendous effort at conversion can be applied against the Government, the social Czars, and leaders of 'orthodoxy'.

Satyagraha is an inherent birthright of a person. It is not merely a sacred right but it can also be a sacred duty. If the Government does not represent the will of the people, and if it begins to support dishonesty and terrorism, then it should be disobeyed. But one who wants to vindicate his rights should be prepared to bear all kinds of suffering.

There are different techniques of Satyagraha. Fasting can be one form of Satyagraha, but it has to be applied only against those who are bound by ties of close personal affection. Voluntary migration can be another form of Satyagraha. "Tyranny is a kind of plague and when it is likely to make us angry or weak, it is wise to leave the scene of such temptation," said Gandhi. He even supported Hijrat. The exodus refers to the planned flight of the Israelites. In Russia, there was the flight of the Doukhabours who were nonviolent. Gandhi would not consider the 'scorched earth policy to be a form of Satyagraha. He ruled out underground activities, even though entirely innocent, as a part of a legitimate fight for freedom based on truth and nonviolence.

According to the passage, which is one of the forms of Satyagraha?

Options :

1. Fasting
2. Voluntary migration
3. Anger
4. Only a and b
- 5.

Answer : Only a and b

Direction:

Read the following passage and answer the questions based on it.

The Gandhian philosophy of Satyagraha is a natural outcome of the supreme concept of truth. If truth is the ultimate reality, then it is imperative to safeguard the criteria and foundations of truth. A votary of God which is the highest Truth and the highest Reality must be utterly selfless and gentle. He should have an unconquerable determination to fight for the supremacy of spiritual and moral values. Thus alone can he vindicate his sense of ethical devotion.

Satyagraha means the exercise of the purest soul force against all injustice, oppression, and exploitation. Suffering and trust are attributes of soul force. The active nonviolent resistance of the 'heroic meek' makes an immediate appeal to the heart. It wants not to endanger the opponent but to overwhelm him with the over-flooding power of innocence. Satyagraha or stupendous effort at conversion can be applied against the Government, the social Czars, and leaders of 'orthodoxy'.

Satyagraha is an inherent birthright of a person. It is not merely a sacred right but it can also be a sacred duty. If the Government does not represent the will of the people, and if it begins to support dishonesty and terrorism, then it should be disobeyed. But one who wants to vindicate his rights should be prepared to bear all kinds of suffering.

There are different techniques of Satyagraha. Fasting can be one form of Satyagraha, but it has to be applied only against those who are bound by ties of close personal affection. Voluntary migration can be another form of Satyagraha. "Tyranny is a kind of plague and when it is likely to make us angry or weak, it is wise to leave the scene of such temptation," said Gandhi. He even supported Hijrat. The exodus refers to the planned flight of the Israelites. In Russia, there was the flight of the Doukhabours who were nonviolent. Gandhi would not consider the 'scorched earth policy' to be a form of Satyagraha. He ruled out underground activities, even though entirely innocent, as a

part of a legitimate fight for freedom based on truth and nonviolence.

• Question No. 99

Which of the following words is the OPPOSITE of "voluntary" as per the passage?

Options :

1. Optional
2. Rational
3. Compulsory
4. Adoptable
- 5.

Answer : Compulsory

Direction:

Read the following passage and answer the questions based on it.

The Gandhian philosophy of Satyagraha is a natural outcome of the supreme concept of truth. If truth is the ultimate reality, then it is imperative to safeguard the criteria and foundations of truth. A votary of God which is the highest Truth and the highest Reality must be utterly selfless and gentle. He should have an unconquerable determination to fight for the supremacy of spiritual and moral values. Thus alone can he vindicate his sense of ethical devotion.

Satyagraha means the exercise of the purest soul force against all injustice, oppression, and exploitation. Suffering and trust are attributes of soul force. The active nonviolent resistance of the 'heroic meek' makes an immediate appeal to the heart. It wants not to endanger the opponent but to overwhelm him with the over-flooding power of innocence. Satyagraha or stupendous effort at conversion can be applied against the Government, the social Czars, and leaders of 'orthodoxy'.

Satyagraha is an inherent birthright of a person. It is not merely a sacred right but it can also be a sacred duty. If the Government does not represent the will of the people, and if it begins to support dishonesty and terrorism, then it should be disobeyed. But one who wants to vindicate his rights should be prepared to bear all kinds of suffering.

There are different techniques of Satyagraha. Fasting can be one form of Satyagraha, but it has to be applied only against those who are bound by ties of close personal affection. Voluntary migration can be another form of

Satyagraha. "Tyranny is a kind of plague and when it is likely to make us angry or weak, it is wise to leave the scene of such temptation," said Gandhi. He even supported Hijrat. The exodus refers to the planned flight of the Israelites. In Russia, there was the flight of the Doukhabours who were nonviolent. Gandhi would not consider the 'scorched earth policy to be a form of Satyagraha. He ruled out underground activities, even though entirely innocent, as a part of a legitimate fight for freedom based on truth and nonviolence.

- Question No. 100

Which of the following words is the SYNONYM of "stupendous" as per the passage?

Options :

1. Wonderful
2. Ordinary
3. Secure
4. Drastic
- 5.

Answer : Wonderful

[Attempt Mock Test Now](#)

All ixamBee Mock Test are FREE @ www.ixamBee.com