

Direction:

What will come in place of (?) question mark in the following questions.

- Question No. 1

144% of 200 + 11% of 900 + 10% of 20 =?

Options :

1. 350
2. 389
3. 360
4. 260
- 5.

Answer : 389

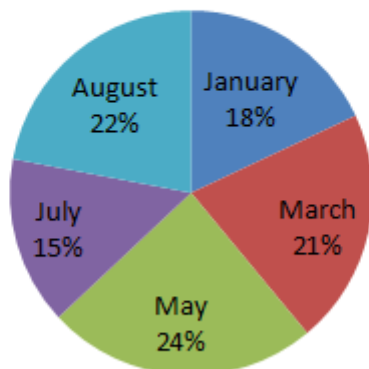
Direction:

Study the following pie chart carefully and answer the questions given beside.

TATA Motors' production of Transport goods Vehicles for five months has been given in the pie chart for the year 2022. The company produces two kinds of Transport goods Vehicles – Truck and Pickup Van.

Note:- In March, 900 unit Transport goods vehicles were produced than in July.

Production of Truck and Pickup van for 5 months



- Question No. 2

Average number of Transport goods Vehicles produced in July, May and March is what % of Average number of Transport goods Vehicles produced in January and August?

Options :

1. 20%
2. 45%
3. 100%
4. 120%
- 5.

Answer : 100%

- Question No. 3

A man row a boat 1 km in 5 min, along the stream and 6 km in 1hrs against the stream, The speed of the stream will be

Options :

1. 12 km/hr
2. 6 km/hr
3. 2 km/hr
4. 3 km/hr
- 5.

Answer : 3 km/hr

- Question No. 4

A trader bought an article for Rs. 3000 and marked it 20% above of its cost price. If he sold it after giving a discount of Rs. 120 then find the profit percent earned by him.

Options :

1. 16%
2. 15%
3. 10%
4. 20%
- 5.

Answer : 16%

• Question No. 5

A spent 25% of his monthly income on study and 60% of the remaining on rent. If amount spent on rent is Rs. 945, then find the amount spent on study

Options :

1. Rs. 535
2. Rs. 520
3. Rs. 525
4. Rs. 545
- 5.

Answer : Rs. 525

Direction:

Simplify the following questions:

• Question No. 6

$\frac{3}{5}$ of 24% of 250 = ?

Options :

1. 36
2. 44
3. 21
4. 26
- 5.

Answer : 36

• Question No. 7

A sphere has a volume of 154 cm^3 . If a cylinder of diameter 0.28 cm has the same volume as that of the sphere, find the height of the cylinder.

Options :

1. 25m
2. 50m
3. 37.5m
4. 24m
- 5.

Answer : 25m

• Question No. 8

A can complete a work in 40 days. B takes 20 days less than A to complete the same work. In how many days can both of them together complete 90% of the work together?

Options :

1. 8 days
2. 3.6 days
3. 5.5 days
4. 12 days
- 5.

Answer : 12 days

• Question No. 9

The speed of two cars A and B are in the ratio of 12:15 respectively. Car A travels 15 km less than the car B in the same time duration. What was the distance (in km) travelled by the car B during that time?

Options :

1. 91 km
2. 60 km
3. 66 km
4. 75 km
- 5.

Answer : 75 km

• Question No. 10

If 45% of a certain number is equal to $\frac{3}{5}$ th of another number, what is the ratio between the numbers?

Options :

1. 15:7
2. 6:5
3. 4:3
4. 12:7
- 5.

Answer : 4:3

• Question No. 11

A seller marked his article 75% above the cost price and sold it after offering two successive discounts of 60% and 25% respectively. In the whole transaction the seller lost Rs. 855. Find the selling price of the article.

Options :

1. Rs. 675
2. Rs. 561
3. Rs. 693
4. Rs. 945
- 5.

Answer : Rs. 945

• Question No. 12

If $(7a + b) : (7a - b) = 7:3$, then find the value of $a:b$?

Options :

1. 5:14
2. 7:14
3. 3:14
4. 5:18
- 5.

Answer : 5:14

• Question No. 13

'A' and 'B' can complete a certain work in 13 days and 26 days, respectively. They started working together and worked till completion of the work for which they got Rs. 18000 as wage. Find the share of 'B' out of total wage.

Options :

1. Rs 6500
2. Rs 6200
3. Rs 6000
4. Rs 6700
- 5.

Answer : Rs 6000

• Question No. 14

The ratio of length of two trains is 5:2 and the ratio of their speed is 7:12. The ratio of time taken by them to cross a man is:

Options :

1. 28:5
2. 30:7
3. 32:11
4. 21:3
- 5.

Answer : 30:7

• Question No. 15

A gave 60% of amount to B. B gave 20% of amount received from A to C. If amount received by C from B is Rs.192, then find the amount received by B from A.

Options :

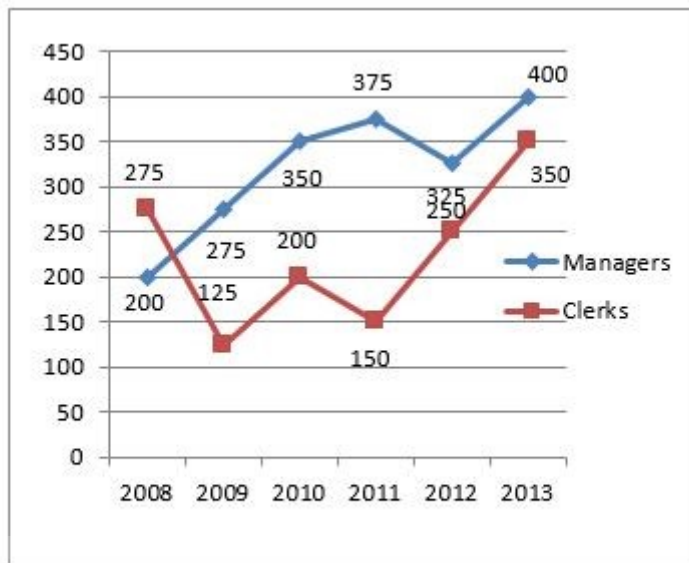
1. 960
2. 800
3. 768
4. 920
- 5.

Answer : 960

Direction:

Study the following graph carefully to answer these questions:

Number of Managers and Clerks appointed by a Company in six years.



- Question No. 16

What was the approximate average number of managers in all the years together?

Options :

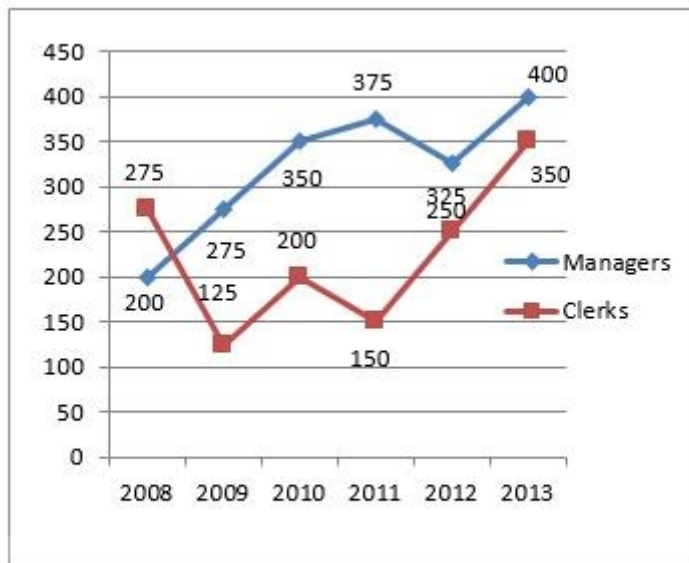
1. 331
2. 341
3. 311
4. 321
- 5.

Answer : 321

Direction:

Study the following graph carefully to answer these questions:

Number of Managers and Clerks appointed by a Company in six years



• Question No. 17

The number of appointed clerks in the year 2010 was approximately what percent of the number of appointed managers in the same year?

Options :

1. 57%
2. 59%
3. 55%
4. 61%
- 5.

Answer : 57%

• Question No. 18

Ratio of monthly income to monthly expenditure of A is 11:9, respectively and monthly savings of A is Rs. 2880. Find the monthly income of A.

Options :

1. Rs. 15840

- 2. Rs. 14840
- 3. Rs. 15540
- 4. Rs. 15800
- 5.

Answer : Rs. 15840

Direction:

What will come in the place of question mark (?) in the given expression?

- Question No. 19

50% of 270 + 20% of 300 = ?

Options :

- 1. 185
- 2. 175
- 3. 195
- 4. 125
- 5.

Answer : 195

- Question No. 20

Priya wanted to purchase 40 pencil boxes whose cost was Rs. 800 each. The trader offered her a discount if she were to purchase a set of 45 pencil boxes. So she calculated that if she assume the normal price of 40 pencil boxes then she can purchase 5 extra pencil boxes which cost her only Rs. 224 each of five pencil boxes at the cost price of 40 pencil boxes after discount. What is the percentage discount?

Options :

- 1. 8 %
- 2. 5 %
- 3. 6%
- 4. 9%

5.

Answer : 8 %

• Question No. 21

In a certain code of language, '+' represents 'x', '-' represents '+', 'x' represents '÷' and '÷' represents '-' what is the answer of following expression;

$$40 + 12 \div 280 \times 14 - 77 \div 200 \times 4 \div 6 + 4 = ?$$

Options :

1. 440

2. 430

3. 454

4. 463

5.

Answer : 463

• Question No. 22

Which number will replace the question mark (?) In the following series.

120, 115, 99, ?, 56, 55

Options :

1. 70

2. 62

3. 64

4. 72

5.

Answer : 72

• Question No. 23

Which of the following pair replaces? in series given.

Q5J, N10N, ? , H40V

Options :

1. K20S
2. K19R
3. L20R
4. K20R
- 5.

Answer : K20R

• Question No. 24

In the question below some statements are given followed by three conclusions I, II, and III. You have to take the given statements to be true even if they seem to be at variance with commonly known facts. Read all the conclusions and then decide which of the given conclusion definitely follows from the given statements, disregarding commonly known facts.

Statements:

Some Hammer are Screw.

All Bolt are Screw.

No Screw are Nail.

Conclusions:

I. No Bolt is Nail.

II. Some Screw are Bolt.

III. Some Nail are Hammer.

Options :

1. Only Conclusion I and II follow
2. Only Conclusion II and III follow
3. Only Conclusion I and III follow
4. All the Conclusions follow
- 5.

Answer : Only Conclusion I and II follow

• Question No. 25

Three of the following four number pairs are alike in a certain way and one is different. Pick the odd one out.

Options :

1. 14 : 197
2. 9 : 86
3. 15 : 230
4. 13 : 174
- 5.

Answer : 14 : 197

• Question No. 26

In a certain code language, 'GEAR' is written as '62' and 'RAIN' is written as '84'. How will 'SHOT' be written in that code language?

Options :

1. 62
2. 66
3. 76
4. 78
- 5.

Answer : 62

- Question No. 27

In the question below some statements are given followed by three conclusions I, II, and III. You have to take the given statements to be true even if they seem to be at variance with commonly known facts. Read all the conclusions and then decide which of the given conclusion definitely follows from the given statements, disregarding commonly known facts.

Statement:

Some Papaya are Banana.

All Apple are Pear.

No Apple is Banana.

Conclusions:

I. Some Papaya are Pear.

II. Some Papaya are not Apple.

III. Some Banana are Pear.

Options :

1. Only conclusion I follows
2. Only conclusion I and II follow
3. Only conclusion II follows
4. Only conclusion I and III follow
- 5.

Answer : Only conclusion II follows

- Question No. 28

In a certain code language, 'ARISE' is coded as '1189195' and 'WEIRD' is coded as '2359184'. What will be the code for 'MOTH' in the same code language?

Options :

1. 1315208
2. 1315207
3. 1321158
4. 1385201
- 5.

Answer : 1315208

• Question No. 29

Six persons P, V, A, S, K and R have different weights. A is heavier than only one person. V is just heavier than R, who is heavier than S. K is heavier than R. P is lighter than R. Who is the second heaviest person?

Options :

1. P
2. R
3. V
4. K
- 5.

Answer : V

• Question No. 30

If A%B means A is the brother of B.

A#B means A is the wife of B.

A@B means A is the father of B.

A\$B means A is the sister of B.

If 'F @ G \$ H % I @ J # K' is definitely true, then how is J related to F?

Options :

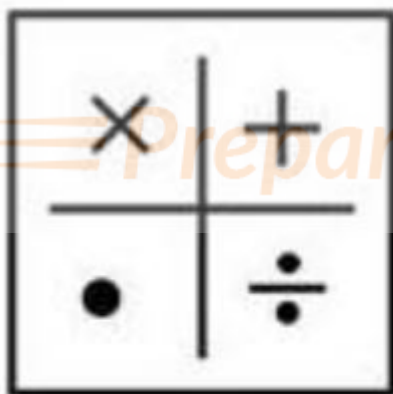
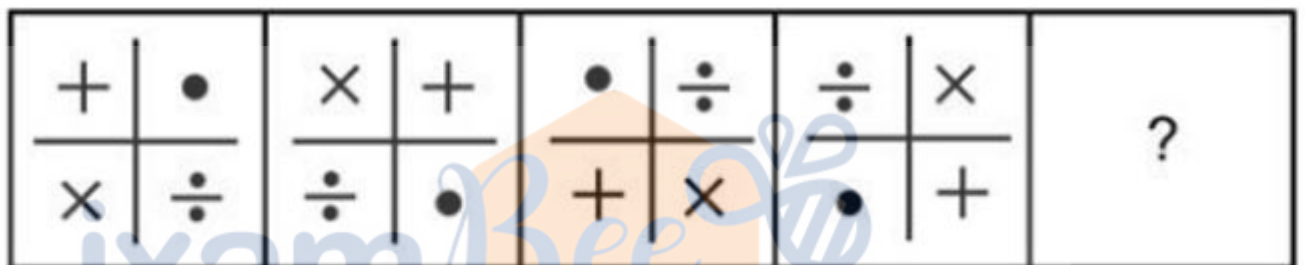
1. Sister-in-law

2. Daughter-in-law
3. Granddaughter
4. Daughter
- 5.

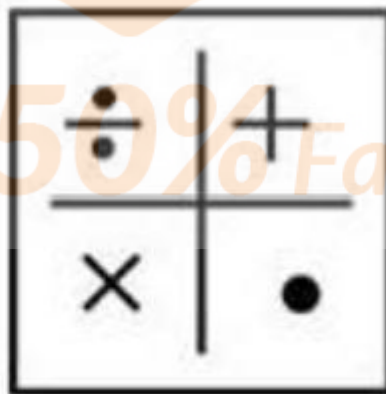
Answer : Granddaughter

• Question No. 31

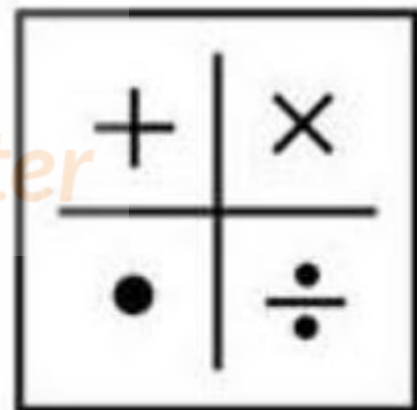
Select the figure which will come next in the following figure series.



(1)



(2)



(3)

Options :

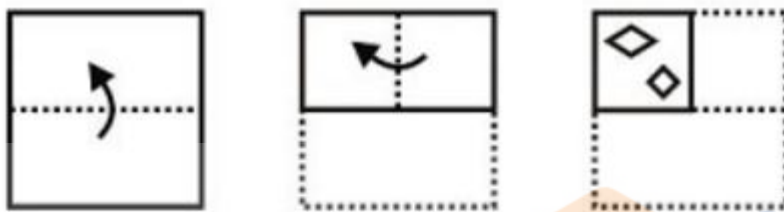
1. 1
2. 2
3. 3
4. 4

5.

Answer : 4

• Question No. 32

The sequence of folding a piece of paper and the manner in which the folded paper has cut is shown in the following figures. How would this paper look when unfolded?



(1)



(2)



(3)

Options :

1. 1
2. 2
3. 3
4. 4
- 5.

Answer : 4

- Question No. 33

Select the related letters from the given alternatives.

UCZ : PHU :: VGS : ?

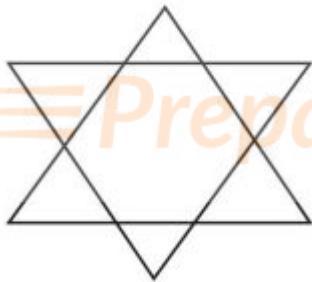
Options :

1. OUC
2. QLN
3. NLV
4. ULO
- 5.

Answer : QLN

- Question No. 34

How many triangles is therein the following figure?



Options :

1. 6
2. 8
3. 10
4. 12
- 5.

Answer : 8

- Question No. 35

Complete the given series.

20, 33, 50, ?, 92, 121

Options :

1. 69

2. 74

3. 76

4. 66

5.

Answer : 69

- Question No. 36

In each of the following questions, find out which of the answer figures can be formed from the pieces given in the problem figure.

 **ixamBee**
Prepare **50%** Faster



(1)



(2)



(3)

Options :

1. 1
2. 2
3. 3
4. 4
- 5.

Answer : 1

• Question No. 37

Select the correct mirror image of the given combination when the mirror is placed at 'AB' as shown.



(1)



(2)



(3)

Options :

1. 1
2. 2
3. 3
4. 4
- 5.

Answer : 1

• Question No. 38

Six students M, N, K, E, S and G are sitting in a circle facing each other such that N sits to the immediate right of K. M does not sit near G. The student sitting on the immediate left of K, sits to the immediate right of G. S does not sit

second to the right of N. Who sits to the immediate left of M?

Options :

1. E
2. N
3. S
4. K
- 5.

Answer : N

• Question No. 39

Arrange the following words according to the English dictionary order.

1. Excellence
2. Excitement
3. Exclusive
4. Executive
5. Exception

Options :

1. 1 5 2 3 4
2. 1 5 2 3 4
3. 1 5 3 4 2
4. 1 5 4 3 2
- 5.

Answer : 1 5 2 3 4

• Question No. 40

Which letter number cluster will replace the question mark (?) to complete the given series?

C12, F15, I60, L65, O390, [?]

Options :

1. R390
2. R352
3. V392
4. W422
- 5.

Answer : R390

• Question No. 41

"Yakshagana" folk dance is associated to which Indian state?

Options :

1. Kerala
2. Karnataka
3. Tamil Nadu
4. Andhra Pradesh
- 5.

Answer : Karnataka

• Question No. 42

What does Article 44 of the Indian Constitution concern?

Options :

1. Education for All
2. Freedom of Religion
3. Uniform Civil Code

4. Right to Property

5.

Answer : Uniform Civil Code

- Question No. 43

In the Indian Constitution, which Article outlines the responsibilities and duties of the Comptroller and Auditor General of India?

Options :

1. Article 146

2. Article 147

3. Article 148

4. Article 149

5.

Answer : Article 149

- Question No. 44

Who was awarded the Padma Shri in the year 2020 for their outstanding contributions in their respective fields?

Options :

1. Sushmita Sen

2. Sonu Nigam

3. Manoj Bajpayee

4. P. V. Sindhu

5.

Answer : Manoj Bajpayee

- Question No. 45

In October 2020, what was the milestone achieved by Virat Kohli in T20 cricket, making him the first Indian batsman to reach a specific number of runs?

Options :

1. 8000
2. 9000
3. 7500
4. 8800
- 5.

Answer : 9000

- Question No. 46

Which of the following options correctly identifies the location of the Bhitargaon Mandir?

Options :

1. Varanasi
2. Khajuraho
3. Konark
4. Kanpur
- 5.

Answer : Kanpur

- Question No. 47

In which country is the Mandarin language primarily spoken?

Options :

1. Japan
2. China
3. Thailand
4. South Korea

5.

Answer : China

- Question No. 48

What is another commonly used name for the river Brahmaputra?

Options :

1. Yangtze River
2. Mekong River
3. Yellow River
4. Tsangpo River
- 5.

Answer : Tsangpo River

- Question No. 49

What is the primary difference between a Credit Card and a Debit Card?

Options :

1. Credit cards allow overdrafts; debit cards do not.
2. Credit cards have higher interest rates than debit cards.
3. Credit cards are issued by banks; debit cards by credit unions.
4. Credit cards are only for online shopping; debit cards for in-store purchases.
- 5.

Answer : Credit cards allow overdrafts; debit cards do not.

- Question No. 50

Who is the author of the book "Cracking The Code: My Journey In Bollywood"?

Options :

1. Shah Rukh Khan
2. Aamir Khan
3. Amitabh Bachchan
4. Ayushmann Khurrana
- 5.

Answer : Ayushmann Khurrana

• Question No. 51

Who is considered the father of the Right to Information (RTI) Act in India?

Options :

1. Jawaharlal Nehru
2. Arvind Kejriwal
3. Rajiv Gandhi
4. Anna Hazare
- 5.

Answer : Anna Hazare

• Question No. 52

Where is the historic Char Minar monument situated?

Options :

1. New Delhi
2. Kolkata
3. Hyderabad
4. Jaipur
- 5.

Answer : Hyderabad

- Question No. 53

Swarnim Chaturbhuj Yojana is associated with which Indian state?

Options :

1. Rajasthan
2. Madhya Pradesh
3. Gujarat
4. Haryana
- 5.

Answer : Gujarat

- Question No. 54

Shovana Narayan is renowned for her expertise in which classical dance form?

Options :

1. Bharatanatyam
2. Kathak
3. Odissi
4. Kuchipudi
- 5.

Answer : Kathak

- Question No. 55

Which of the following components is NOT included in the calculation of Gross Domestic Product (GDP)?

Options :

1. Government spending
2. Imports
3. Investment

4. Social welfare programs

5.

Answer : Social welfare programs

- Question No. 56

In which year is the next FIFA Women's World Cup scheduled?

Options :

1. 2023

2. 2024

3. 2025

4. 2026

5.

Answer : 2023

- Question No. 57

Which Indian playback singer was awarded the Bharat Ratna?

Options :

1. Lata Mangeskar

2. Kishore Kumar

3. Arijit Singh

4. Asha Bhosle

5.

Answer : Lata Mangeskar

- Question No. 58

What is the Golden Quadrilateral in India?

Options :

1. A famous tourist destination in Rajasthan
2. A network of highways connecting major Indian cities
3. A historical trade route in the Himalayas
4. A series of ancient temples in South India
- 5.

Answer : A network of highways connecting major Indian cities

• Question No. 59

Which article of the Indian Constitution ensures the "Freedom of Conscience and Free Profession, Practice, and Propagation of Religion"?

Options :

1. Article 21
2. Article 25
3. Article 19
4. Article 14
- 5.

Answer : Article 25

• Question No. 60

Where did Jawaharlal Nehru unfurl the Tricolour on August 5, 1947, during India's independence celebration?

Options :

1. India Gate
2. Parliament House
3. Gateway of India
4. Lahori Gate
- 5.

Answer : Lahori Gate

- Question No. 61

Which of the following is not associate to swimming?

Options :

1. Sailing
2. Butterfly Stroke
3. Water Polo
4. Free style
- 5.

Answer : Sailing

- Question No. 62

The Nile River discharges its water into which of the following Seas?

Options :

1. Red Sea
2. Mediterranean Sea
3. Black Sea
4. Beaufort Sea
- 5.

Answer : Mediterranean Sea

- Question No. 63

In the "Global Peace Index 2023," what is India's ranking?

Options :

1. 129

2. 126

3. 163

4. 156

5.

Answer : 126

• Question No. 64

The 12th edition of the joint military exercise "Ex Ekuverin" between the Indian Army and the Maldives National Defence Force commenced in June 2023 at which location in India?

Options :

1. Pune, Maharashtra

2. Chaubatia, Uttarakhand

3. Jaisalmer, Rajasthan

4. Tezpur, Assam

5.

Answer : Chaubatia, Uttarakhand

• Question No. 65

Which individual has been honored with the Pen Pinter Prize in the year 2023?

Options :

1. Hanif Qureshi

2. Tom Stoppard

3. Michael Rosen

4. Tony Harrison

5.

Answer : Michael Rosen

- Question No. 66

Choose the option with the correct spelling of the words given below or highlighted in a sentence.

The **sergant** inspected the troops, ensuring that their uniforms were in perfect order before the important parade.

Options :

1. sergent
2. cergeant
3. sergeant
4. cergant
- 5.

Answer : sergeant

- Question No. 67

Choose the option with the correct spelling of the words given below or highlighted in a sentence.

ACOMODATE

Options :

1. accomodate
2. accomodate
3. accomodate
4. accomadate
- 5.

Answer : accommodate

- Question No. 68

Choose the option with the correct spelling of the words given below or highlighted in a sentence.

SAPERATE

Options :

1. saparete
2. separete
3. seperate
4. separate
- 5.

Answer : separate

• Question No. 69

In each of the following questions a statement has been given with highlighted idioms. You are required to choose the meaning of the idioms from the options given below.

In their business partnership, Sarah is the one who **calls the shots** when it comes to major decisions.

Options :

1. to be in charge or make important decisions
2. to challenge someone's deception
3. Something that is very easy to do
4. To join a popular trend or activity
- 5.

Answer : to be in charge or make important decisions

• Question No. 70

In each of the following questions a statement has been given with highlighted idioms. You are required to choose the meaning of the idioms from the options given below.

I've done my part in organizing the event, and now **the ball is in your court** to finalize the guest list and send out the invitations.

Options :

1. In a difficult or disadvantageous position.
2. To summarize a lengthy narrative or explanation.
3. It is your turn to take action or make a decision
4. Facing a difficult decision or situation with no good options

5.

Answer : It is your turn to take action or make a decision

• Question No. 71

In each of the following questions a statement has been given with highlighted idioms. You are required to choose the meaning of the idioms from the options given below.

John is known for his straightforwardness; he always **calls a spade a spade**, which is both refreshing and sometimes blunt.

Options :

1. To be upset about something that has already happened and cannot be changed
2. to speak plainly and honestly
3. Accusing someone of a fault or behavior that you also possess
4. Someone who talks tough but doesn't take action
- 5.

Answer : to speak plainly and honestly

• Question No. 72

Choose an option, which can be substituted for a given word/sentence/phrase out of given options.

A large cage or a house or enclosure in which birds are kept.

Options :

1. aviation
2. apiary
3. fauna
4. aviary
- 5.

Answer : aviary

• Question No. 73

Choose an option, which can be substituted for a given word/sentence/phrase out of given options.

A person who is afraid of water

Options :

1. Claustrophobe
2. Aquaphobe
3. Acrophobe
4. Nyctophobe
- 5.

Answer : Aquaphobe

• Question No. 74

Choose an option, which can be substituted for a given word/sentence/phrase out of given options.

A person who can speak two languages fluently

Options :

1. Bilingual
2. Monolingual
3. Polyglot
4. Linguist
- 5.

Answer : Bilingual

• Question No. 75

Which of the phrases (a), (b), (c), (d) given below each sentence should replace the phrase printed in bold to make the sentence grammatically and contextually correct

The boy said that **he has** read the book

Options :

1. he have

2. he did
3. he had
4. he has been
- 5.

Answer : he had

• Question No. 76

Which of the phrases (a), (b), (c), (d) given below each sentence should replace the phrase printed in bold to make the sentence grammatically and contextually correct

She took medication **to elleviate** the pain in her back, allowing her to move more comfortably.

Options :

1. to elliviate
2. to alleviate
3. to alliviate
4. to elleviate
- 5.

Answer : to alleviate

• Question No. 77

Choose the antonym of the word

FEUD

Options :

1. conflict
2. enmity
3. clash
4. alliance
- 5.

Answer : alliance

- Question No. 78

In each of the questions, a sentence has been divided into three parts, one of which may contain an error. Identify that fragment and mark it as your answer.

She do an excellent job of managing (A)/ the team and ensuring that (B)/ projects are completed on time. (C)

Options :

1. A
2. B
3. C
4. No error
- 5.

Answer : A

- Question No. 79

In each of the questions, a sentence has been divided into three parts, one of which may contain an error. Identify that fragment and mark it as your answer.

After years of hard work(A)/ and dedication, she have achieved (B)/ remarkable success in her career. (C)

Options :

1. A
2. B
3. C
4. No error
- 5.

Answer : B

- Question No. 80

In each of the questions, a sentence has been divided into three parts, one of which may contain an error. Identify that fragment and mark it as your answer.

A number of issues was discussed (A)/ during the meeting, ranging from budget (B)/ concerns to future project plans. (C)

Options :

1. A
2. B
3. C
4. No error
- 5.

Answer : A

- Question No. 81

Fill in the blanks with the appropriate word

The comedian's jokes were so _____ that the entire audience burst into laughter.

Options :

1. repetitive
2. hilarious
3. melancholic
4. drowsy
- 5.

Answer : hilarious

- Question No. 82

Fill in the blanks with the appropriate word

The artist's masterpiece was characterized by its _____ use of color and light.

Options :

1. vibrant
2. boring

3. monotonous

4. dull

5.

Answer : vibrant

• Question No. 83

Fill in the blanks with the appropriate word

Despite being exhausted, he _____ the entire 26-mile marathon without stopping.

Options :

1. had run

2. run

3. ran

4. runs

5.

Answer : ran

• Question No. 84

Choose the option that is similar to the word given below

REVIVE

Options :

1. destroy

2. reduce

3. terminate

4. regenerate

5.

Answer : regenerate

- Question No. 85

Choose the option that is similar to the word given below

REPULSIVE

Options :

1. appealing
2. disgusting
3. fragile
4. pleasant
- 5.

Answer : disgusting

Direction:

In the following passage there are blanks, each of which has been numbered. These members are printed below the passage and against each, four words are suggested, one of which fits the blank appropriately. Find out the appropriate words.

John was on a solo trip and decided to stay at a hotel in a small ___86___ town. He had heard about this hotel from a friend and was ___87___ forward to a relaxing stay. When he arrived at the hotel, he was _____88_____ by the warm and welcoming atmosphere. The manager at the front desk greeted him with a friendly smile and led him to his room. John's room was cozy and comfortable, with a _____89_____ view of the countryside. He relaxed himself and then _____90_____ down to the hotel's restaurant for dinner. The meal was exquisite, and John thoroughly enjoyed his meal.

- Question No. 86

Fill in the blank 86

Options :

1. historically
2. busiest
3. historic
4. narrow

5.

Answer : historic

Direction:

In the following passage there are blanks, each of which has been numbered. These members are printed below the passage and against each, four words are suggested, one of which fits the blank appropriately. Find out the appropriate words.

John was on a solo trip and decided to stay at a hotel in a small ____86____ town. He had heard about this hotel from a friend and was ____87____ forward to a relaxing stay. When he arrived at the hotel, he was ____88____ by the warm and welcoming atmosphere. The manager at the front desk greeted him with a friendly smile and led him to his room. John's room was cozy and comfortable, with a ____89____ view of the countryside. He relaxed himself and then ____90____ down to the hotel's restaurant for dinner. The meal was exquisite, and John thoroughly enjoyed his meal.

- Question No. 87

Fill in the blank 87

Options :

1. looked
2. looking
3. look
4. been looked
- 5.

Answer : looking

Direction:

In the following passage there are blanks, each of which has been numbered. These members are printed below the passage and against each, four words are suggested, one of which fits the blank appropriately. Find out the appropriate words.

John was on a solo trip and decided to stay at a hotel in a small ____86____ town. He had heard about this hotel from a friend and was ____87____ forward to a relaxing stay. When he arrived at the hotel, he was ____88____ by the warm and welcoming atmosphere. The manager at the front desk greeted him with a friendly smile and led him to his room. John's room was cozy and comfortable, with a ____89____ view of the countryside. He relaxed himself

and then ____90____ down to the hotel's restaurant for dinner. The meal was exquisite, and John thoroughly enjoyed his meal.

• Question No. 88

Fill in the blank 88

Options :

1. delighted
2. discouraged
3. hesitation
4. stopped
- 5.

Answer : delighted

Direction:

In the following passage there are blanks, each of which has been numbered. These members are printed below the passage and against each, four words are suggested, one of which fits the blank appropriately. Find out the appropriate words.

John was on a solo trip and decided to stay at a hotel in a small ____86____ town. He had heard about this hotel from a friend and was ____87____ forward to a relaxing stay. When he arrived at the hotel, he was ____88____ by the warm and welcoming atmosphere. The manager at the front desk greeted him with a friendly smile and led him to his room. John's room was cozy and comfortable, with a ____89____ view of the countryside. He relaxed himself and then ____90____ down to the hotel's restaurant for dinner. The meal was exquisite, and John thoroughly enjoyed his meal.

• Question No. 89

Fill in the blank 89

Options :

1. boring
2. plain
3. scenic

4. close

5.

Answer : scenic

Direction:

In the following passage there are blanks, each of which has been numbered. These members are printed below the passage and against each, four words are suggested, one of which fits the blank appropriately. Find out the appropriate words.

John was on a solo trip and decided to stay at a hotel in a small ____86____ town. He had heard about this hotel from a friend and was ____87____ forward to a relaxing stay. When he arrived at the hotel, he was ____88____ by the warm and welcoming atmosphere. The manager at the front desk greeted him with a friendly smile and led him to his room. John's room was cozy and comfortable, with a ____89____ view of the countryside. He relaxed himself and then ____90____ down to the hotel's restaurant for dinner. The meal was exquisite, and John thoroughly enjoyed his meal.

- Question No. 90

Fill in the blank 90

Options :

1. head
2. return
3. returning
4. headed
- 5.

Answer : headed

[Attempt Mock Test Now](#)

All ixamBee Mock Test are FREE @ www.ixamBee.com