

Direction:

In the following question, select the related word pair from the given alternatives.

- Question No. 1

Farmer: Field: : Clerk: ?

Options :

1. Field
2. Museum
3. Hostel
4. Bank
- 5.

Answer : Bank

Direction:

In the following question, select the related word pair from the given alternatives.

- Question No. 2

54 : 59 :: 45 : ?

Options :

1. 53
2. 48
3. 55
4. 50
- 5.

Answer : 50

Direction:

In the following question, select the related word pair from the given alternatives.

- Question No. 3

DFH: JLN :: GIK : ?

Options :

1. MOQ
2. HOM
3. MOP
4. OPM
- 5.

Answer : MOQ

- Question No. 4

In the following question, select the odd word pair from the given alternatives

Options :

1. May – August
2. January – October
3. February – March
4. July - December
- 5.

Answer : February – March

- Question No. 5

In the following question, four number pairs are given. The number on left side of (–) is related to the number on the right side of (–) with some Logic/Rule/Relation. Three are similar on basis of same Logic/Rule/Relation. Select the odd one out from the given options.

Options :

1. 26 – 52
2. 21 – 42
3. 35 – 70

4. 18 – 38

5.

Answer : 18 – 38

- Question No. 6

In the following question, select the odd letter/letters from the given alternatives.

Options :

1. QOMK

2. VTRP

3. NLJH

4. ROLI

5.

Answer : ROLI

- Question No. 7

Arrange the given words in the sequence in which they occur in the dictionary.

1. Prejudice

2. Preposition

3. Predict

4. Preference

5. Preparation

Options :

1. 34152

2. 12345

3. 54231

4. 42315

5.

Answer : 34152

- Question No. 8

In the following question, select the missing number from the given series.

21, 24, 28, 31, 35, ?

Options :

1. 38

2. 29

3. 32

4. 36

5.

Answer : 38

- Question No. 9

A series is given with one term missing. Select the correct alternative from the given ones that will complete the series.

CN, GR, KV, ?, SD

Options :

1. NY

2. NA

3. OZ

4. PZ

5.

Answer : OZ

- Question No. 10

From the given alternatives, select the word which CANNOT be formed using the letters of the given word.

UNEMPLOYMENT

Options :

1. POEM
2. PLENTY
3. MOMENT
4. PAYMENT
- 5.

Answer : PAYMENT

• Question No. 11

In a certain code language, "PAIRED" is written as "NXEPBZ". How is "SPIRIT" written in that code language?

Options :

1. QPFMEP
2. QMEPFP
3. QPFPME
4. PFPQME
- 5.

Answer : QMEPFP

• Question No. 12

In a certain code language, 'x' represents '+', '÷' represents 'x', '-' represents '÷' and '+' represents '-'. Find out the answer to the following question.

$$12 \times 8 \div 35 - 5 + 10 = ?$$

Options :

1. 58

2. 47
3. 45
4. 61
- 5.

Answer : 58

• Question No. 13

If white is called blue, blue is called red, red is called yellow, yellow is called green, green is called black, black is called violet and violet is called orange, what would be the color of duck?

Options :

1. White
2. Green
3. Yellow
4. Blue
- 5.

Answer : Blue

• Question No. 14

If $5\Omega 6 = 60$, $8\Omega 3 = 48$ and $7\Omega 9 = 126$, then find the value of $4\Omega 9 = ?$

Options :

1. 68
2. 78
3. 72
4. 76
- 5.

Answer : 72

- Question No. 15

Which of the following terms follows the trend of the given list?

RRPQPQPQ, PRRQPQPQ, PQRRPQPQ, PQRRQPQ, PQPQRRPQ, _____.

Options :

1. PQPQPQRR
2. RRPQPQPQ
3. PQPQPRRQ
4. PRRQPQPQ
- 5.

Answer : PQPQPRRQ

- Question No. 16

A dog is chasing a cat. The dog runs 4 km South, then turns West and runs 4.5 km, then turns North and runs 2 km, then it turns to its right and runs 4.5 km. Where is it now with respect to the starting position?

Options :

1. 3 km South
2. 5 km North
3. 2 km South
4. 2.5 km North
- 5.

Answer : 2 km South

Direction:

In the question two statements are given, followed by two conclusions, I and II. You have to consider the statements to be true even if it seems to be at variance from commonly known facts. You have to decide which of the given conclusions, if any, follows from the given statements.

- Question No. 17

Statement I: No medals are trophies

Statement II: No badges are medals

Conclusion I: No trophy is a badge.

Conclusion II: Some badges are not trophies

Options :

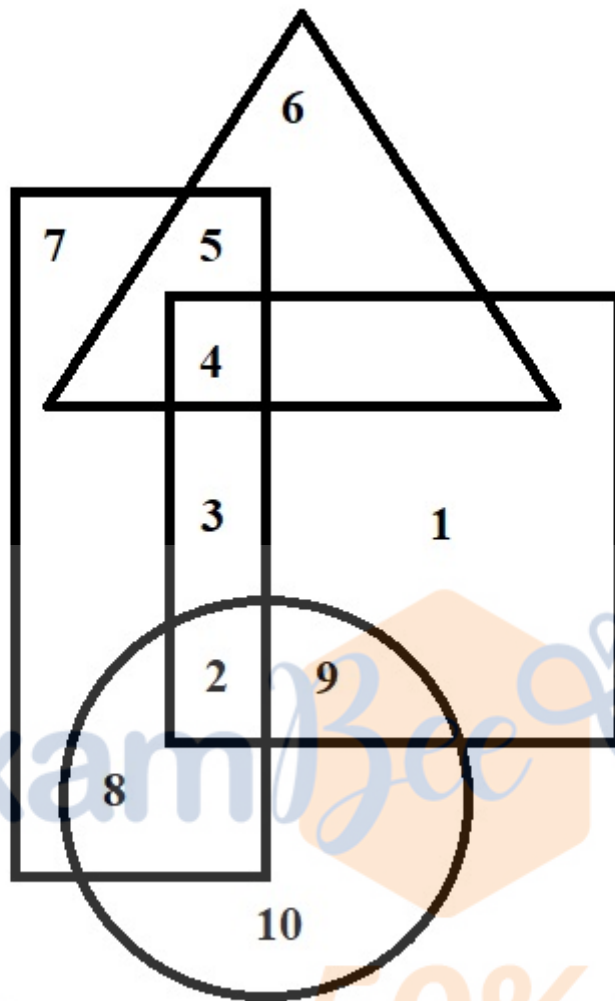
1. Only conclusion I follows
2. Only conclusion II follows
3. Both conclusions I and II follow
4. Neither conclusion I nor conclusion II follows
- 5.

Answer : Neither conclusion I nor conclusion II follows

- Question No. 18

In the following figure, rectangle represents Directors, circle represents Producers, triangle represents Lyricists and Square represents Actors. Which set of numbers represents Lyricists who are not Actors?

Prepare **50%** Faster



Options :

1. 2 and 9
2. 6 and 5
3. 8 and 2
4. 4 and 3
- 5.

Answer : 6 and 5

• Question No. 19

A series is given with one term missing. Select the correct alternative from the given ones that will complete the series.

WYL, RTG, MOB, HJW, ?

Options :

1. EGT
2. BDQ
3. DFS
4. CER
- 5.

Answer : CER

• Question No. 20

In the following question, select the missing number from the given series.

16, 23, 32, 43, 56, ?

Options :

1. 60
2. 68
3. 71
4. 74
- 5.

Answer : 71

• Question No. 21

In the following question, four groups of three numbers are given. In each group the second and third number are related to the first number by a Logic/Rule/Relation. Three are similar on basis of same Logic/Rule/Relation. Select the odd one out from the given alternatives.

Options :

1. 14, 28, 45
2. 15, 30, 46
3. 13, 26, 42

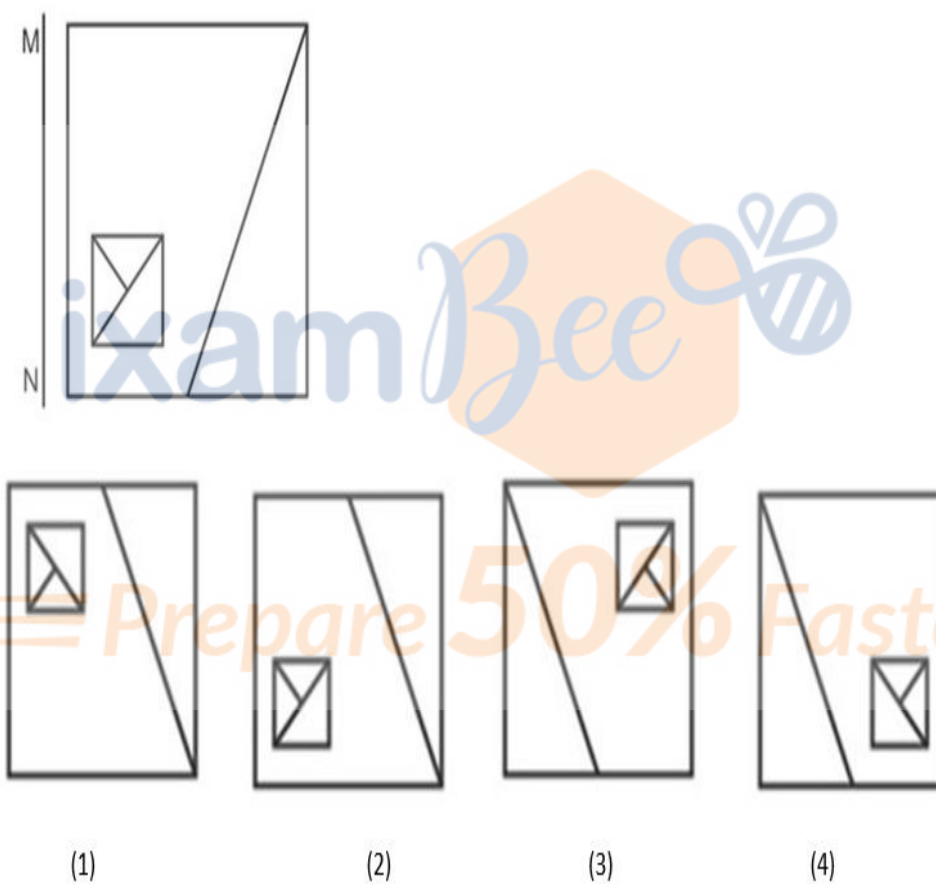
4. 12, 24, 40

5.

Answer : 14, 28, 45

• Question No. 22

If a mirror is placed on the line MN, then which of the answer figures is the right image of the given figure?



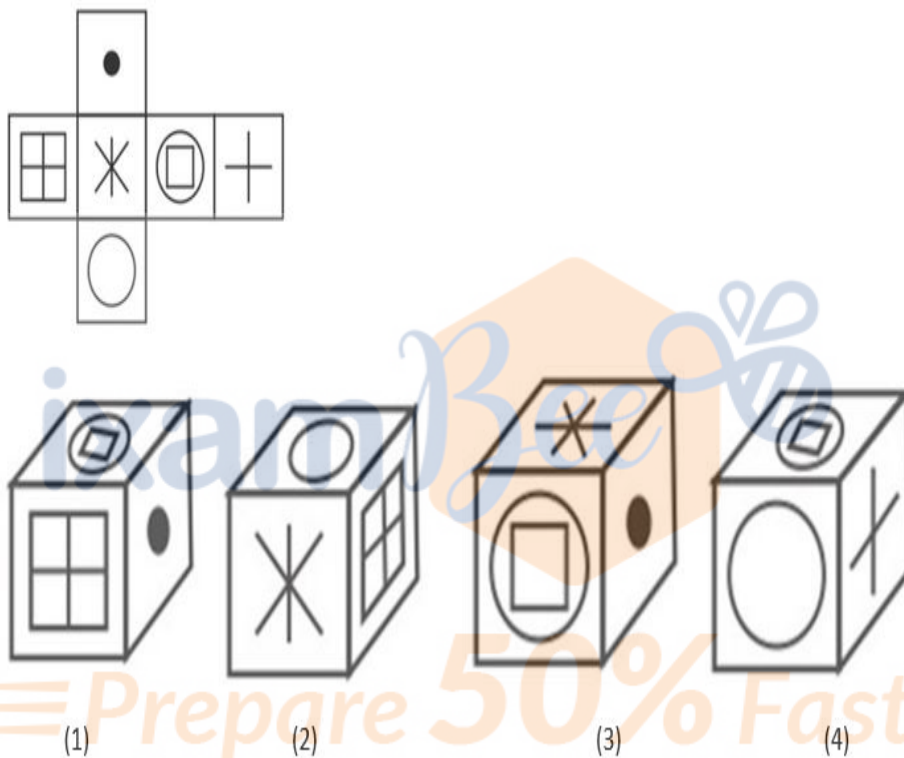
Options :

1. 1
2. 2
3. 3
4. 4
- 5.

Answer : 4

• Question No. 23

Which of the following cube in the answer figure cannot be made based on the unfolded cube in the question figure?



Options :

1. 1
2. 2
3. 3
4. 4
- 5.

Answer : 1

• Question No. 24

A word is represented by only one set of number as given in any one of the alternatives. The sets of number given in the alternatives are represented by two classes of alphabets as shown in the given two matrices. The columns and rows of Matrix-I are numbered from 0 to 4 and that of Matrix-II are numbered from 5 to 9. A letter from these matrices can be represented first by its row and next by its column, for example 'H' can be represented by 23, 42 etc and 'Z' can be represented by 56, 78 etc. Similarly, you have to identify the set for the word 'HARD'.

MATRIX - 1

	0	1	2	3	4
0	K	M	D	C	H
1	M	F	J	L	F
2	G	C	A	H	F
3	D	J	B	D	J
4	A	K	H	A	M

MATRIX - 2

	5	6	7	8	9
5	T	Z	S	Q	U
6	W	W	W	T	Q
7	P	T	O	Z	N
8	R	R	Q	Q	S
9	O	S	N	P	Y

Options :

1. 23, 43, 86, 55

2. 04, 40, 85, 33

3. 44, 65, 40, 98


4. 23, 95, 14, 86

5.

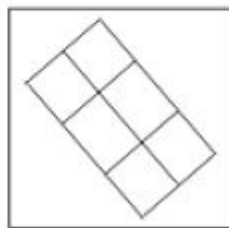
Answer : 04, 40, 85, 33

- Question No. 25

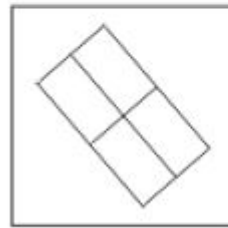
From the given Answer Figures select the one in which the Question Figure is hidden/embedded.



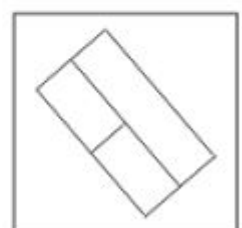
(1)



(2)



(3)



(4)

Options :

1. 1
2. 2
3. 3
4. 4
- 5.

Answer : 3

• Question No. 26

In April 2018, the United Nations General Assembly declared 3rd June as _____

Options :

1. World Water Transport Day
2. World Automobile Day
3. World Motorcycle Day
4. World Bicycle Day
- 5.

Answer : World Bicycle Day

- Question No. 27

The Sunauli border is a famous transit point between India and _____.

Options :

1. Myanmar
2. Nepal
3. Pakistan
4. Bhutan
- 5.

Answer : Nepal

- Question No. 28

The quote "Bombs and pistols do not make a revolution. The sword of revolution is sharpened on the whetting-stone of ideas" belongs to which of the following freedom fighters?

Options :

1. Bal Gangadhar Tilak
2. Subhash Chandra Bose
3. Bhagat Singh
4. Lala Lajpat Rai
- 5.

Answer : Bhagat Singh

- Question No. 29

In which year was the Central Board of Revenue Act in India promulgated?

Options :

1. 1983
2. 1963

3. 1973

4. 1953

5.

Answer : 1963

• Question No. 30

Which committee was appointed to give a detailed report on the Non Performing Assets of public sector banks?

Options :

1. Malegam Committee

2. Srikrishna Committee

3. Pannir Selvam Committee

4. Mandal Committee

5.

Answer : Pannir Selvam Committee

• Question No. 31

In which year the Indian cricket team won the ODI World Cup for men for the second time?

Options :

1. 2011

2. 2003

3. 2015

4. 2007

5.

Answer : 2011

• Question No. 32

In which state is Sasthamcotta Lake located?

Options :

1. Tamil Nadu
2. Telangana
3. Kerala
4. Karnataka
- 5.

Answer : Kerala

• Question No. 33

Which popular Indian band of the 90s released their first album 'Boondein' with Mohit Chauhan as the lead?

Options :

1. Pentagram
2. 13AD
3. Silk Route X
4. Lost Stories
- 5.

Answer : Silk Route X

• Question No. 34

Which is the coldest place in India?

Options :

1. Amarnath
2. Dras
3. Leh Ladakh
4. Srinagar
- 5.

Answer : Dras

- Question No. 35

Who is the author of the autobiography 'Playing it my Way'?

Options :

1. Sachin Tendulkar
2. Kapil Dev
3. Mahesh Bhupati
4. Leander Paes
- 5.

Answer : Sachin Tendulkar

- Question No. 36

Which of the following instruments is used for the visual examination of eardrum?

Options :

1. Phonograph
2. Polygraph
3. Optometer
4. Otoscope
- 5.

Answer : Otoscope

- Question No. 37

Who among the following was killed by Chhatrapati Shivaji in the Battle of Pratapgarh?

Options :

1. Afzal Khan
2. Asghar Khan
3. Shaista Khan

4. Shuja Khan

5.

Answer : Afzal Khan

• Question No. 38

During the reign of which of the following kings did Chinese traveller Xuanzang visit India?

Options :

1. Chandragupta II

2. Prabhakara Vardhana

3. Chandragupta Maurya

4. Ashoka

5.

Answer : Chandragupta II

• Question No. 39

Which is the largest bone in the human body?

Options :

1. Incus

2. Stapes

3. Femur

4. Malleus

5.

Answer : Femur

• Question No. 40

Albert Einstein was awarded the Nobel Prize in Physics in the year ____?

Options :

1. 1934
2. 1921
3. 1924
4. 1920
- 5.

Answer : 1921

• Question No. 41

What is the height of the Statue of Unity that is located in Gujarat?

Options :

1. 193 m
2. 220 m
3. 182 m
4. 198 m
- 5.

Answer : 182 m

• Question No. 42

Dolomite is an ore of which of the following metals?

Options :

1. Strontium
2. Potassium
3. Aluminium
4. Calcium
- 5.

Answer : Calcium

- Question No. 43

In which of the following locations was the Global Venture Capital Summit 2018 held?

Options :

1. Mumbai
2. Goa
3. Ahmedabad
4. Delhi
- 5.

Answer : Goa

- Question No. 44

Sanjhi Art is associated to which of the following states of India?

Options :

1. Uttar Pradesh
2. Rajasthan
3. West Bengal
4. Gujarat
- 5.

Answer : Uttar Pradesh

- Question No. 45

Scissor Cup is associated with which sports?

Options :

1. Badminton
2. Cricket
3. Hockey

4. Football

5.

Answer : Football

• Question No. 46

According to Indian Bureau of Mines, which of the following states has the largest reserve of silver in India in 2018?

Options :

1. Maharashtra

2. Rajasthan

3. Karnataka

4. Andhra Pradesh

5.

Answer : Rajasthan

• Question No. 47

What is India's rank among the 180 countries on the 'Environmental Performance Index 2018', according to the biennial report by Yale and Columbia Universities along with the World Economic Forum?

Options :

1. 157

2. 177

3. 147

4. 167

5.

Answer : 177

• Question No. 48

Who was the captain of the Indian women's team who won silver at the 2018 Asian Games?

Options :

1. Manpreet Kaur
2. Shalini Pathak
3. Payel Chowdhury
4. Ritu Negi
- 5.

Answer : Payel Chowdhury

• Question No. 49

Which of the following companies has become India's most profitable public sector company in the fiscal year 2018-19?

Options :

1. Bharat Petroleum
2. Oil and Natural Gas Corporation
3. NTPC Limited
4. Indian Oil Corporation
- 5.

Answer : Oil and Natural Gas Corporation

• Question No. 50

The scientific discipline concerned with the description of rock successions and their interpretation in terms of a general time scale is called?

Options :

1. Paleontology
2. Stratigraphy
3. Mineralogy
4. Geodesy

5.

Answer : Stratigraphy

• Question No. 51

The radius of base and slant height of a cone are in the ratio 2:3.5. if its curved surface area is 1078 cm^2 , then the radius (in cm) of its base is?

Options :

1. 4cm
2. 8cm
3. 7cm
4. 5cm
- 5.

Answer : 7cm

• Question No. 52

If $a + b + c = 5$ & $ab + bc + ca = 8$ then $a^2 + b^2 + c^2 = ?$

Options :

1. 9
2. 3
3. 6
4. 4
- 5.

Answer : 9

• Question No. 53

The number $4x56$ is completely divisible by 11 then what will be the value of x?

Options :

1. 3
2. 4
3. 6
4. 5
- 5.

Answer : 3

• Question No. 54

A train 160 meters long moving at a speed of 58 km/hr crosses a train 140 metres long coming from opposite direction in 8 sec. the speed of the second train is

Options :

1. 92 km/hr
2. 144 km/hr
3. 88 km/hr
4. 77 km/hr
- 5.

Answer : 77 km/hr

• Question No. 55

A mixture contains milk and water in ratio 5:7 if 9 liters of mixture is replaced by liters of water then the ratio of milk and water becomes the 3:5 how many litres of milk was there in mixture initially?

Options :

1. 23.65lit
2. 37.5 lit
3. 39.25 lit
4. 16.75 lit
- 5.

Answer : 37.5 lit

Direction:

A man 1.5 m tall is 21.5 m away from a tower 23 m high. Determine the angle of elevation of the top of the tower from the eye of the observer.

- Question No. 56

Options :

1. 60°
2. 30°
3. 45°
4. 90°
- 5.

Answer : 45°

Direction:

If O is circumcentre of an acute angled triangle ABC, if $\angle BAC = 40^\circ$, then $\angle BOC = ?$

- Question No. 57

Options :

1. 80°
2. 90°
3. 110°
4. 100°
- 5.

Answer : 80°

- Question No. 58

A man can row 12 km/hr in still water. It takes him twice as long to row up as to row down the river. Find the speed of the man against the current.

Options :

1. 8 km/hr
2. 10 km/hr
3. 12 km/hr
4. 14 km/hr
- 5.

Answer : 8 km/hr

• Question No. 59

If $2x + \frac{1}{(2x)} = 3$ then find $8x^3 + \frac{1}{(8x^3)} = ?$

Options :

1. 14
2. 16
3. 18
4. 12
- 5.

Answer : 18

• Question No. 60

In place of 19% profit a shoes is sold at 43% profit and the seller gets Rs. 134.40 more. Find the selling price of the shoes if it was sold at 25% profit.

Options :

1. Rs. 1053
2. Rs. 897
3. Rs. 1008
4. Rs. 700
- 5.

Answer : Rs. 700

- Question No. 61

The area of a regular hexagon with side as 24 cm is

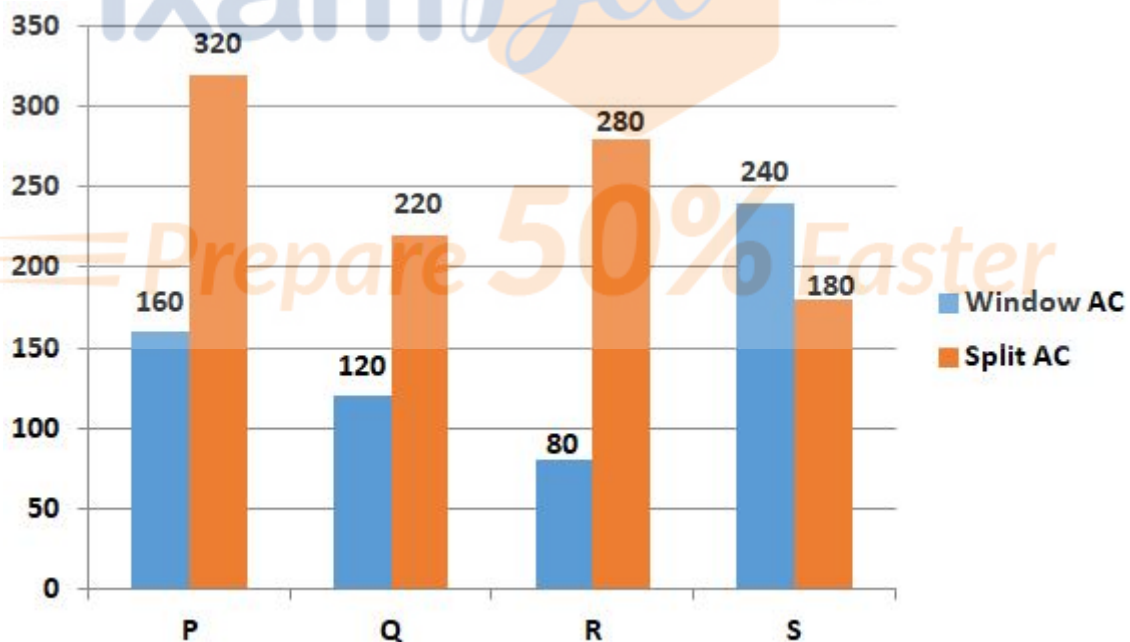
Options :

1. $958\sqrt{3} \text{ cm}^2$
2. $864\sqrt{3} \text{ cm}^2$
3. $794\sqrt{3} \text{ cm}^2$
4. $642\sqrt{3} \text{ cm}^2$
- 5.

Answer : $864\sqrt{3} \text{ cm}^2$

Direction:

Answer the questions based on the information given below. The bar graph given below shows the number of window AC's and split AC's manufactured by four different companies.



- Question No. 62

The number of window AC's manufactured by P is what percent of the number of split AC's manufactured by it.

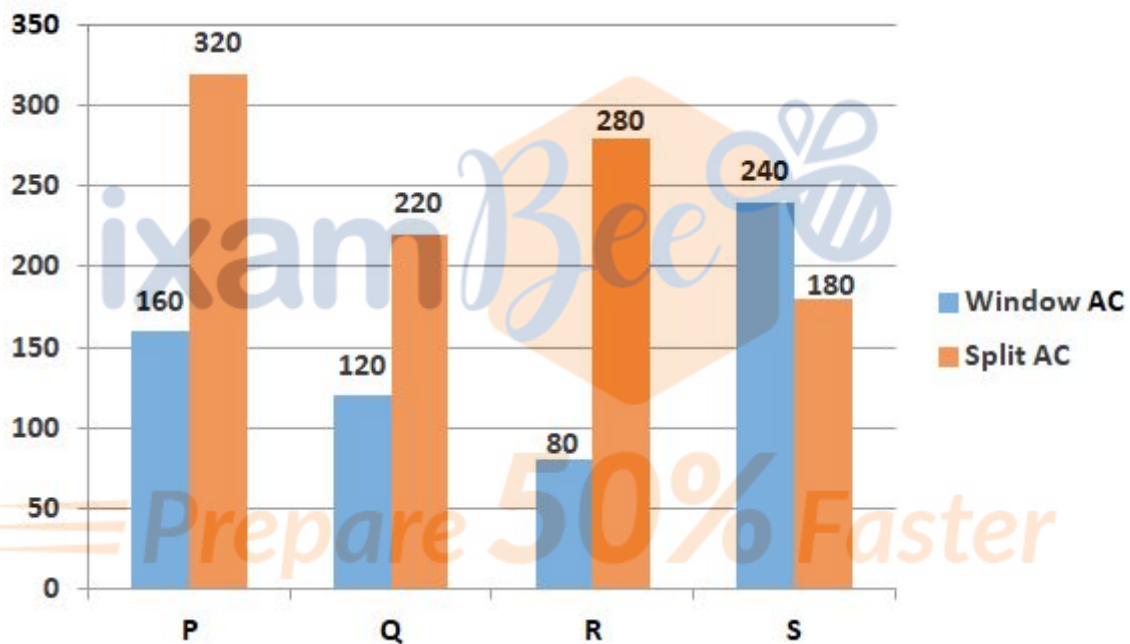
Options :

1. 50%
2. 30%
3. 25%
4. 10%
- 5.

Answer : 50%

Direction:

Answer the questions based on the information given below. The bar graph given below shows the number of window AC's and split AC's manufactured by four different companies.



- Question No. 63

Find the ratio of the number of window to split AC's manufactured by company R.

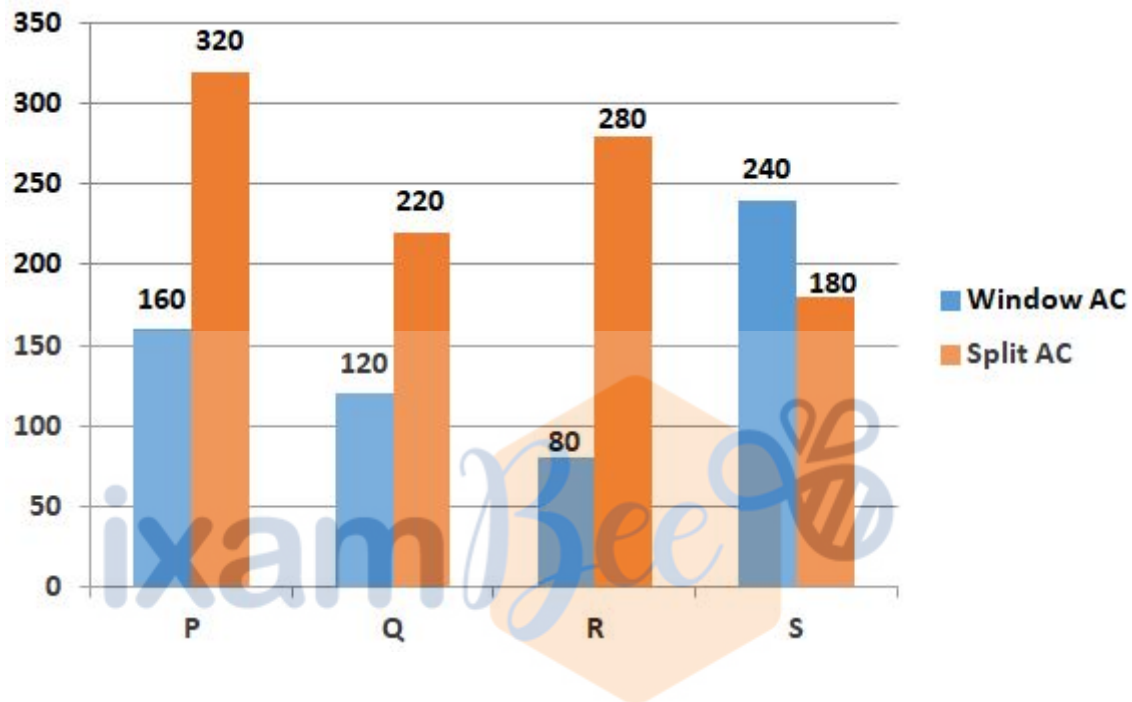
Options :

1. 3:5
2. 4:7
3. 2:7
4. 3:4
- 5.

Answer : 2:7

Direction:

Answer the questions based on the information given below. The bar graph given below shows the number of window AC's and split AC's manufactured by four different companies.



- Question No. 64

Find the average number of split AC's manufactured by each of the given company.

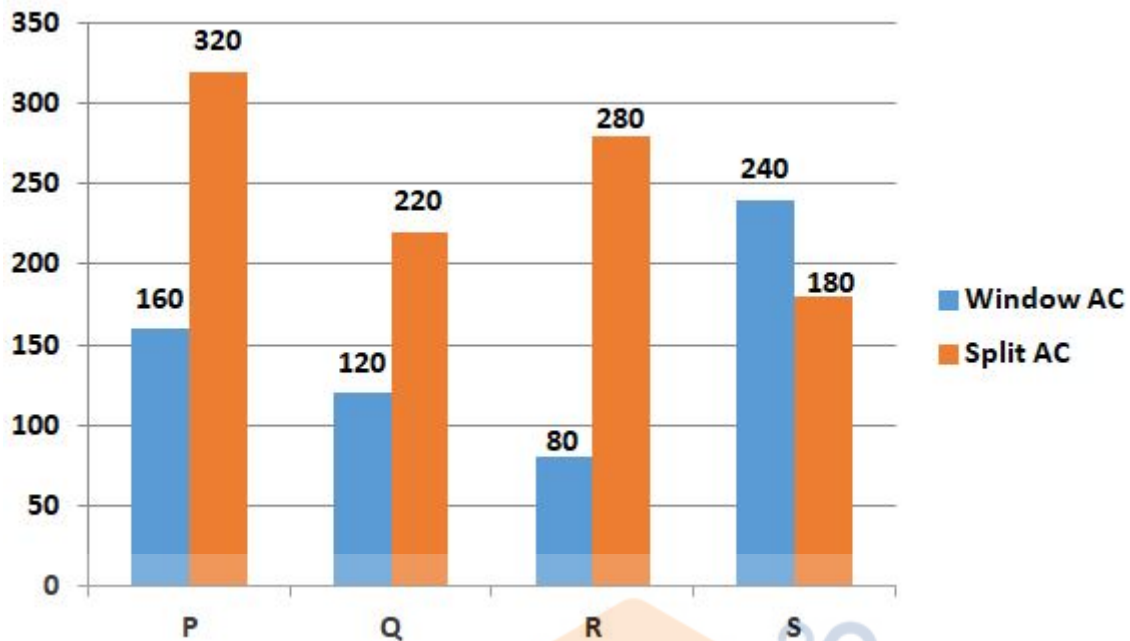
Options :

1. 200
2. 275
3. 250
4. 225
- 5.

Answer : 250

Direction:

Answer the questions based on the information given below. The bar graph given below shows the number of window AC's and split AC's manufactured by four different companies.



• Question No. 65

Find the difference between the number of window AC's manufactured by companies R and S together, and the number of split AC's manufactured by companies Q and R together.

Options :

1. 200
2. 175
3. 150
4. 180
- 5.

Answer : 180

• Question No. 66

If a number N is divided by 7, it gives a remainder 3. If the double of the same number is divided by 7, what will be the new remainder?

Options :

1. 1

- 2. 2
- 3. 6
- 4. 4
- 5.

Answer : 6

• Question No. 67

A 750 meter long train moving with an average speed of 108 Km/hr crosses a platform in 45 seconds. A man crosses the same platform in 5 minutes. What is the speed of a man in m/sec?

Options :

- 1. 2 m/sec
- 2. 5 m/sec
- 3. 3 m/sec
- 4. 6 m/sec
- 5.

Answer : 2 m/sec

• Question No. 68

If $\sin 20^\circ = \frac{4}{5}$, then $\tan 70^\circ = ?$

Options :

- 1. $\frac{3}{4}$
- 2. 1
- 3. $\frac{2}{5}$
- 4. -2
- 5.

Answer : $\frac{3}{4}$

Direction:

There are two houses of the same height on both sides of a 35-meter wide road. From a point on the road, elevation angles of the houses are 30° and 60° respectively. Find the height of the houses.

- Question No. 69

Options :

1. 10.8 meter
2. 12.9 meter
3. 15.1 meter
4. 10 meter
- 5.

Answer : 15.1 meter

- Question No. 70

The surface area of the three adjacent faces of a cuboid are 12, 25 and 3 sq.cm respectively. Find the volume of the cuboid.

Options :

1. 30 cm^3
2. 40 cm^3
3. 90 cm^3
4. 60 cm^3
- 5.

Answer : 30 cm^3

- Question No. 71

The speed of a boat in still water is 32 km/h and the rate of current is 4 km/h. Find the distance travelled downstream in 15 min.

Options :

1. 16 km

- 2. 17.5 km
- 3. 9 km
- 4. 12.5 km
- 5.

Answer : 9 km

• Question No. 72

A trader sells two trousers for Rs. 3600 each, neither losing nor gaining in all. If he sold one of the trousers at a gain of 20%, the other was sold at a loss of

Options :

- 1. 14.28%
- 2. 16.67%
- 3. 9.67%
- 4. 8.33%
- 5.

Answer : 14.28%

• Question No. 73

If $\sec A = \operatorname{cosec} 30^\circ$, then the value of $2\tan^2 A - 1$

Options :

- 1. 0
- 2. 1
- 3. 5
- 4. $1/2$
- 5.

Answer : 5

- Question No. 74

10% of monthly salary of A is equal to 20% of monthly salary of B and 20% of monthly salary of B is equal to 25% of monthly salary of C. If C's monthly income is Rs. 25000, then the total income of A, B and C is?

Options :

1. Rs. 118750
2. Rs. 111000
3. Rs. 104000
4. Rs. 177000
- 5.

Answer : Rs. 118750

- Question No. 75

if $a^2 + b^2 + c^2 = 2(7a - 2b - 3c) - 62$, then $a - b - c = ?$

Options :

1. 14
2. 16
3. 18
4. 12
- 5.

Answer : 12

Direction:

Select the word which means the same as the group of words given.

- Question No. 76

Something that seems to be present at the same time, everywhere.

Options :

1. Unlimited
2. Ubiquitous
3. Inclusive
4. Scarce
- 5.

Answer : Ubiquitous

Direction:

Select the most appropriate synonym of the given word.

- Question No. 77

CLOCKED

Options :

1. Overlook
2. Observe
3. Disregard
4. Omit
- 5.

Answer : Observe

Direction:

Select the most appropriate antonym of the given word.

- Question No. 78

VEXED

Options :

1. Appease
2. Fierce
3. Enraged

4. Bugged

5.

Answer : Appease

Direction:

Four words have been given in options out of which one of them will have an error. Select the option with the incorrect spelling.

• Question No. 79

Select the wrongly spelt word.

Options :

1. Significant
2. Significance
3. Signify
4. Significancy
- 5.

Answer : Significance

Direction:

Select the most appropriate option to substitute the underlined segment in the given sentence. If there is no need to substitute it, select No improvement.

• Question No. 80

Hyperautomation is about thinking innovatively and empowering employees reimagining work in a fundamentally different way.

Options :

1. for reimagining work
2. in reimagining
3. to reimagine work
4. No improvement
- 5.

Answer : to reimagine work

Direction:

Select the most appropriate option to substitute the underlined segment in the given sentence. If there is no need to substitute it, select No improvement.

• Question No. 81

GST will put India on the ranks of advanced economies of the world to terms of business culture and good leadership.

Options :

1. in terms of
2. at terms to
3. into terms of
4. No improvement
- 5.

Answer : in terms of

Direction:

Select the most appropriate synonym of the given word.

• Question No. 82

MENACE

Options :

1. Certainty
2. Comfort
3. Pleasure
4. Peril
- 5.

Answer : Peril

Direction:

Given below are four jumbled sentences. Out of the given options pick the one that given their correct order.

• Question No. 83

- A. The first to arrive is the Ruddy Shelduck followed by Mallard, Coot, Cormorant, Egrets, and Northern Shoveller to name a few.
- B. Asan also has the privilege of hosting a more than thirty-year- old nesting site of the Pallas Fishing Eagle, which it reconstructs every winter.
- C. Birds of prey like Pallas Fishing Eagle, Marsh Harrier, Greater Spotted Eagle, Osprey and Steppe Eagle add to this magnificent diversity.
- D. By the end of October, the Asan witnesses the arrival of migrants from Palaearctic region.

Options :

1. ACBD
2. BCDA
3. BADC
4. DACB
- 5.

Answer : DACB

Direction:

In the sentence identify the segment which contains the grammatical error.

• Question No. 84

The union has around 3,500 employees and most of them sit outside the factory and shouts slogans demanding justice.

Options :

1. slogans demanding justice
2. outside the factory and shouts
3. The union has around 3,500 employees

4. and most of them sit

5.

Answer : outside the factory and shouts

Direction:

Select the most appropriate meaning of the given idiom.

• Question No. 85

Tip of the iceberg

Options :

1. To make a disclosure
2. To not have any other options
3. To not have the full scope of an issue
4. To do something considered quite dangerous or risky
- 5.

Answer : To not have the full scope of an issue

Direction:

Select the most appropriate meaning of the given idiom.

• Question No. 86

Every cloud has a silver lining

Options :

1. Every negative occurrence has a positive aspect to it
2. Suspected of some wrong doing, damaged reputation, humiliation
3. Finding a way to stay cool when it is very hot outside
4. Make the best out of a difficult situation
- 5.

Answer : Every negative occurrence has a positive aspect to it

Direction:

Four words have been given in options out of which one of them will have an error. Select the option with the incorrect spelling.

- Question No. 87

Select the wrongly spelt word.

Options :

1. Caucus
2. Cautious
3. Continuos
4. Cautions
- 5.

Answer : Continuos

Direction:

In the sentence identify the segment which contains the grammatical error.

- Question No. 88

Over half the human genome is composed on DNA sequences, possibly attributable to long-dead viruses.

Options :

1. is composed on DNA sequences,
2. Over half the human genome
3. possibly attributable to
4. long-dead viruses.
- 5.

Answer : is composed on DNA sequences,

Direction:

Select the correct passive form of the given sentence.

- Question No. 89

The boys have helped the old man.

Options :

1. The old man has been helped by the boys.
2. The old man have been helped by the boys.
3. The old man has helped by the boys.
4. The old man was helped by the boys.
- 5.

Answer : The old man has been helped by the boys.

Direction:

In the following passage, some words have been omitted and indicated by a number. Select the most appropriate word from the given options pertaining to the question number that can complete the sentence in a meaningful way.

There was a virtual climate summit _____(1)_____ last week by the UK, France and the UN on the _____(2)_____ of the fifth anniversary of the Paris Climate Agreement. It took place against the backdrop of 126 countries either having formally enshrined or planning to _____(3)_____ net zero emissions by the middle of the century. Notably, China recommitted to a _____(4)_____ of carbon neutrality by 2060. The overall message _____(5)_____ that we are on the cusp of an era where it will make economic sense to transition to cleaner technologies.

- Question No. 90

Select the most appropriate option for blank no. 1.

Options :

1. classify
2. ordered
3. organised
4. systemized
- 5.

Answer : organised

Direction:

In the following passage, some words have been omitted and indicated by a number. Select the most appropriate word from the given options pertaining to the question number that can complete the sentence in a meaningful way.

There was a virtual climate summit_____ (1)_____ last week by the UK, France and the UN on the _____ (2)_____ of the fifth anniversary of the Paris Climate Agreement. It took place against the backdrop of 126 countries either having formally enshrined or planning to _____ (3)_____ net zero emissions by the middle of the century. Notably, China recommitted to a _____ (4)_____ of carbon neutrality by 2060. The overall message_____ (5)_____ that we are on the cusp of an era where it will make economic sense to transition to cleaner technologies.

• Question No. 91

Select the most appropriate option for blank No. 2.

Options :

1. opening
2. shot
3. consideration
4. occasion
- 5.

Answer : occasion

Direction:

In the following passage, some words have been omitted and indicated by a number. Select the most appropriate word from the given options pertaining to the question number that can complete the sentence in a meaningful way.

There was a virtual climate summit_____ (1)_____ last week by the UK, France and the UN on the _____ (2)_____ of the fifth anniversary of the Paris Climate Agreement. It took place against the backdrop of 126 countries either having formally enshrined or planning to _____ (3)_____ net zero emissions by the middle of the century. Notably, China recommitted to a _____ (4)_____ of carbon neutrality by 2060. The overall message_____ (5)_____ that we are on the cusp of an era where it will make economic sense to transition to cleaner technologies.

• Question No. 92

Select the most appropriate option for blank No. 3.

Options :

1. achieve
2. match
3. surpass
4. captured
- 5.

Answer : achieve

Direction:

In the following passage, some words have been omitted and indicated by a number. Select the most appropriate word from the given options pertaining to the question number that can complete the sentence in a meaningful way.

There was a virtual climate summit_____ (1) _____ last week by the UK, France and the UN on the _____ (2) _____ of the fifth anniversary of the Paris Climate Agreement. It took place against the backdrop of 126 countries either having formally enshrined or planning to _____ (3) _____ net zero emissions by the middle of the century. Notably, China recommitted to a _____ (4) _____ of carbon neutrality by 2060. The overall message _____ (5) _____ that we are on the cusp of an era where it will make economic sense to transition to cleaner technologies.

- Question No. 93

Select the most appropriate option for blank No. 4.

Options :

1. covet
2. target
3. sight
4. aspiration
- 5.

Answer : target

Direction:

In the following passage, some words have been omitted and indicated by a number. Select the most appropriate word from the given options pertaining to the question number that can complete the sentence in a meaningful way.

There was a virtual climate summit_____ (1)_____ last week by the UK, France and the UN on the _____ (2)_____ of the fifth anniversary of the Paris Climate Agreement. It took place against the backdrop of 126 countries either having formally enshrined or planning to _____ (3)_____ net zero emissions by the middle of the century. Notably, China recommitted to a _____ (4)_____ of carbon neutrality by 2060. The overall message_____ (5)_____ that we are on the cusp of an era where it will make economic sense to transition to cleaner technologies.

• Question No. 94

Select the most appropriate option for blank No. 5.

Options :

1. has
2. was
3. were been
4. were
- 5.

Answer : was

Direction:

Select the correct indirect form of the given sentence.

• Question No. 95

He said, "What have you got in your bag?"

Options :

1. He asked me that what I have got in my bag.
2. He told me what had I got in my bag.
3. He asked what I had got in my bag.
4. He said me what had I got in my bag.

5.

Answer : He asked what I had got in my bag.

Direction:

Select the most appropriate word to fill in the blank.

- Question No. 96

The _____ of the Paris Agreement is to ideally limit global warming to 1.5°C compared to pre-industrial levels.

Options :

1. action
2. aim
3. appeal
4. appeach
- 5.

Answer : aim

Direction:

Select the word which means the same as the group of words given.

- Question No. 97

Something producing a feeling of comfort or satisfaction.

Options :

1. Congenital
2. Concent
3. Congeal
4. Congenial
- 5.

Answer : Congenial

Direction:

Select the most appropriate word to fill in the blank.

- Question No. 98

Practising Shavasana is _____to identify oneself with the spectator and keep aloof from the actor.

Options :

1. temperament
2. training
3. turmoil
4. trancing
- 5.

Answer : training

- Question No. 99

A. The topic was "Your favorite scientist.

B. Ten students registered for the competition for which we had a screening round a week away.

C. It was a day when a speech competition was announced in my school.

D. Yes, my school assumed that students had favorite scientists much like favorite movie stars.

Options :

1. BDAC
2. CADB
3. ACBD
4. ADCB
- 5.

Answer : CADB

Direction:

Select the most appropriate antonym of the given word.

- Question No. 100

ENRAPTURE

Options :

1. Elevate
2. Depress
3. Intoxicate
4. Exhilarate
- 5.

Answer : Depress

[Attempt Mock Test Now](#)

All ixamBee Mock Test are FREE @ www.ixamBee.com


Prepare **50%** Faster