

• Question No. 1

Against which act Mahatma Gandhi asked people to observe 6 April 1919 as a day of non-violence opposition?

Options :

1. Charter Act, 1813
2. Rowlatt Act
3. Arms Act
4. Vernacular press Act
- 5.

Answer : Rowlatt Act

• Question No. 2

Which of the following functions cannot be performed by NBFCs?

Options :

1. Providing loans
2. Making investments
3. Accepting demand deposits
4. Acquisition of shares
- 5.

Answer : Accepting demand deposits

• Question No. 3

The Reserve Bank of India was established in:

Options :

1. 1935
2. 1947

3. 1950

4. 1919

5.

Answer : 1935

• Question No. 4

Which of the following is an example of man-made fibre?

Options :

1. Rayon

2. Silk

3. Linen

4. Jute

5.

Answer : Rayon

• Question No. 5

National Technology Day is observed every year to commemorate:

Options :

1. Operation Meghdoot

2. Operation Blue Star

3. Mangalyaan

4. Pokhran II

5.

Answer : Pokhran II

• Question No. 6

The name of the 1st electronic digital computer of the world is:

Options :

1. PARAM
2. PROLOG
3. UNIVAC
4. ENIAC
- 5.

Answer : ENIAC

• Question No. 7

Which hormone regulates the blood sugar level in the body?

Options :

1. Testosterone
2. Insulin
3. Thyroid
4. Adrenaline
- 5.

Answer : Insulin

• Question No. 8

Who founded the Tattwabodhini Sabha to propagate Ram Mohan Roy's ideas?

Options :

1. K.C Sen
2. Rabindranath Tagore
3. Debendranath Tagore
4. Anand Mohan Bose
- 5.

Answer : Debendranath Tagore

- Question No. 9

Who mentioned Adhyakshas as the superintendents of different departments in the Mauryan administration?

Options :

1. Strabo
2. Kautilya
3. Megasthenes
4. Pliny
- 5.

Answer : Kautilya

- Question No. 10

Which river is associated with the Dhuandhar falls?

Options :

1. Tapi
2. Mahanadi
3. Narmada
4. Kaveri
- 5.

Answer : Narmada

- Question No. 11

Which constitutional amendment, known as 'mini constitution', gave effect to the recommendations of the Swaran Singh Committee?

Options :

1. 41st constitutional amendment
2. 44th constitutional amendment

3. 42nd constitutional amendment
4. 43rd constitutional amendment
- 5.

Answer : 42nd constitutional amendment

• Question No. 12

Which of the following is used for calculating dearness allowance to government employees for increase in prices in India?

Options :

1. Statutory Liquidity Ratio (SLR)
2. Interest rate
3. Bank rate
4. Consumer Price Index Number for Industrial Workers (CPI-IW)
- 5.

Answer : Consumer Price Index Number for Industrial Workers (CPI-IW)

• Question No. 13

Vinaya and Sutta Pitaka are the compilations of whose teachings?

Options :

1. Gautam Buddha
2. Guru Gobind Singh
3. Rishabhdev
4. Mahavira Jaina
- 5.

Answer : Gautam Buddha

• Question No. 14

The concept of Bodhisattva is associated with:

Options :

1. Jainism
2. Sikhism
3. Mahayana Buddhism
4. Hinayana Buddhism
- 5.

Answer : Mahayana Buddhism

• Question No. 15

Whose reign saw the largest extension of Delhi Sultanate?

Options :

1. Muhammad bin Tughluq
2. Alauddin Khilji
3. Sikandar Lodi
4. Gayasuddin Balban
- 5.

Answer : Muhammad bin Tughluq

• Question No. 16

Which among the following is NOT a property of colloids?

Options :

1. Colloid cannot scatter a beam of light passing through it.
2. A colloid is a heterogeneous mixture.
3. They do not settle down when left undisturbed.
4. Due to too small size, individual particles cannot be seen with naked eyes.
- 5.

Answer : Colloid cannot scatter a beam of light passing through it.

• Question No. 17

BuyUcoin has introduced the first Indian platform regarding wholesale trading for:

Options :

1. cryptocurrency
2. paper currency
3. plastic currency
4. gilt currency
- 5.

Answer : cryptocurrency

• Question No. 18

The device that uses ultrasonic waves to measure the distance, direction and speed of underwater objects is called:

Options :

1. SONAR
2. RADAR
3. CRO
4. MASER
- 5.

Answer : SONAR

• Question No. 19

Equatorial plane and Orbital plane are inclined to each other at which angle?

Options :

1. 23.5°

2. 66.5°
3. 13.50°
4. 67.5°
- 5.

Answer : 23.5°

• Question No. 20

Who has been named as the leader of Opposition in Rajya Sabha in Feb 2021?

Options :

1. Anand Sharma
2. Rahul Gandhi
3. Mallikarjun Kharge
4. Ghulam Nabi Azad
- 5.

Answer : Mallikarjun Kharge

• Question No. 21

Which district in Haryana has a nuclear power plant?

Options :

1. Fatehabad
2. Rohtak
3. Karnal
4. Sonapat
- 5.

Answer : Fatehabad

• Question No. 22

Name the type of nutrition in which the organism takes in nutrients in solution form from dead and decaying matter.

Options :

1. Insectivorous nutrition
2. Heterotrophic nutrition
3. Autotrophic nutrition
4. Saprophytic nutrition
- 5.

Answer : Saprophytic nutrition

- Question No. 23

Which of the following is an incorrect pair of abbreviation and its full form?

Options :

1. DBMS- Data Base Management System
2. URL-Uniform Reserve Locator
3. RAM-Random Access Memory
4. FAX-Facsimile
- 5.

Answer : URL-Uniform Reserve Locator

- Question No. 24

Which among the following ports in India has been renamed as Deendayal Port?

Options :

1. Tuticorin
2. Mormugao
3. Cochin
4. Kandla

5.

Answer : Kandla

- Question No. 25

Select the option that shows the correct match of an organisation and its headquarters.

Options :

1. INTERPOL - Washington D.C
2. WHO-Paris
3. ESRO-Brussels
4. GATT-Geneva
- 5.

Answer : GATT-Geneva

- Question No. 26

Which of the following is NOT a Kharif crop?

Options :

1. Wheat
2. Jowar
3. Bajra
4. Paddy
- 5.

Answer : Wheat

- Question No. 27

Pradhan Mantri Shram Yogi Maan-dhan (PM-SYM) Yojana which was launched on 5th March 2019 is aimed at benefitting:

Options :

1. unorganised sector workers
2. government and public sector employees
3. private sector employees
4. organised sector workers
- 5.

Answer : unorganised sector workers

• Question No. 28

An attempt to obtain sensitive information such as username, password and credit card details, etc. for malicious reasons is termed as:

Options :

1. Phishing
2. Digging
3. Surfing
4. Netting
- 5.

Answer : Phishing

• Question No. 29

What is the name of the Ganga cleanup program launched in 2014?

Options :

1. Clean Ganga Plan
2. Ganga Action Plan
3. Namami Gange
4. Ganga Cleanup Program
- 5.

Answer : Namami Gange

• Question No. 30

The natural aging of a lake by nutrient enrichment of its water is termed as:

Options :

1. Eutrophication
2. Extraction
3. Nutriphication
4. Denutriphication
- 5.

Answer : Eutrophication

• Question No. 31

Who was the author of "The General Theory of Employment, Interest and Money" that laid the foundation of macroeconomics as a separate branch of economics?

Options :

1. John Maynard Keynes
2. Dr. Keegen Alen
3. Adam Smith
4. Dr. Philip Kotler
- 5.

Answer : John Maynard Keynes

• Question No. 32

Who was the fourth President of India?

Options :

1. B. D. Jatti
2. Giani Zail Singh
3. Dr Zakir Husain
4. Varahagiri Venkata Giri
- 5.

Answer : Varahagiri Venkata Giri

• Question No. 33

Which of the following is NOT a tributary of Krishna?

Options :

1. Ghatprabha
2. Manjira
3. Tungabhadra
4. Musi
- 5.

Answer : Manjira

• Question No. 34

Which of the following does a Bandicoot refer to?

Options :

1. A telerobot for heart surgery
2. Humanoid
3. A security robot
4. A drainage-cleaning robot
- 5.

Answer : A drainage-cleaning robot

• Question No. 35

Below are four pairs, each representing a state and a folk dance. Which pairing of state and folk dance is incorrect?

Options :

1. Assam - Bihu
2. Gujarat - Garba
3. Uttarakhand - Tapali
4. Chattisgarh - Dagla
- 5.

Answer : Uttarakhand - Tapali

• Question No. 36

Name the Punjabi Muslim, who was a student at Cambridge and who coined the term 'Pak-Stan' in 1933?

Options :

1. Chaudhary Rehmat Ali
2. Nusrat Fateh Ali
3. Khan Rehmad Khan
4. Amanat Ali
- 5.

Answer : Chaudhary Rehmat Ali

• Question No. 37

To neutralise the effect of formic acid injected by ant bite, which among the following can be used?

Options :

1. Potassium carbonate
2. Calcium carbonate
3. Sodium bicarbonate

4. Sodium carbonate

5.

Answer : Sodium bicarbonate

• Question No. 38

Who has produced the indigenous LCA fighter jets Tejas?

Options :

1. Hindustan Aeronautics Limited

2. Bharat Dynamics Limited

3. India Aeronautics Limited

4. Hindustan Dynamics Limited

5.

Answer : Hindustan Aeronautics Limited

• Question No. 39

The Government of India approved the National Policy for Farmers (NPF) in:

Options :

1. 2010

2. 2018

3. 2007

4. 2001

5.

Answer : 2007

• Question No. 40

The total number of ministers, including the Chief Minister, in the council of ministers in a state CANNOT exceed _____ of the total number of members of the legislative assembly of that State.

Options :

1. $\frac{1}{20}$
2. 3%
3. 15%
4. $\frac{1}{10}$
- 5.

Answer : 15%

• Question No. 41

Select the option that is related to the third term in the same way as the second term is related to the first term.

Bat : Cricket :: Stick : _____

Options :

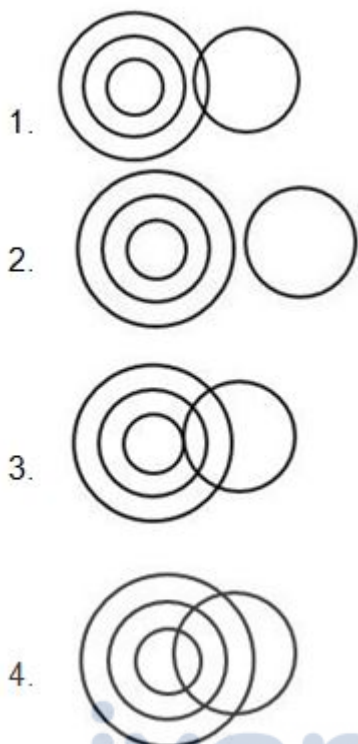
1. Badminton
2. Basketball
3. Tennis
4. Hockey
- 5.

Answer : Hockey

• Question No. 42

Select the Venn diagram that best represents the relationship between the following classes.

Parallelogram, Rhombus, Square, Trapezoid



Options :

1. 1

2. 2

3. 3

4. 4

5.

Answer : 2

• Question No. 43

Select the option that will fill in the blank and complete the given series.

7, 9, 13, 21, _____

Options :

1. 36

2. 30

3. 27

4. 37

5.

Answer : 37

• Question No. 44

Select the letter cluster that will come next in the following series.

CHD, EJF, _____

Options :

1. GLH

2. GLG

3. GNH

4. GNG

5.

Answer : GLH

• Question No. 45

Select the alphanumeric term that will come next in the following series.

B7K, KB7, _____

Options :

1. 7KB

2. BK7

3. 7BK

4. K7B

5.

Answer : 7KB

• Question No. 46

Read the given statements and conclusions carefully. Assuming that the information given in the statements is true, even if it appears to be at variance with commonly known facts, decide which of the given conclusions logically follow(s) from the statements.

Statements:

Some boys are birds.

All birds are animals.

Conclusions:

I. Some boys are animals.

II. Some animals are boys.

Options :

1. Only conclusion II follows
2. Only conclusion I follows.
3. Both conclusions I and II follow.
4. Neither conclusions I and II follow.
- 5.

Answer : Both conclusions I and II follow.

• Question No. 47

Read the given statements and conclusions carefully and decide which of the conclusions logically follow(s) from the statements

Statements:

1. Some boys are cricketers.

2. Some girls are cricketers.

Conclusions:

1. All girls are cricketers.
2. Some cricketers are girls.

Options :

1. Neither conclusions 1 nor 2 follows.
2. Only conclusion 1 follows.
3. Only conclusion 2 follows.
4. Both conclusions 1 and 2 follow.
- 5.

Answer : Only conclusion 2 follows.

• Question No. 48

P, Q, R, S, T, U and V are seven students in a class. They are compared on the basis of their height. T is shorter than S but taller than U. U is taller than P. R and Q are shorter than V but taller than S. Which of the following sequence of their height can be possible?

Options :


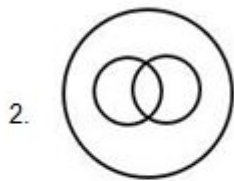

1. $V > Q > R > T > S > U > P$
2. $V > R > Q > S > T > U > P$
3. $V > R > Q > U > T > S > P$
4. $V > Q > R > S > T > P > U$
- 5.

Answer : $V > R > Q > S > T > U > P$

• Question No. 49

Select the Venn diagram that best represents the relationship among the given set of classes.

Earth, Country, State



Options :

1. 1

2. 2

3. 3

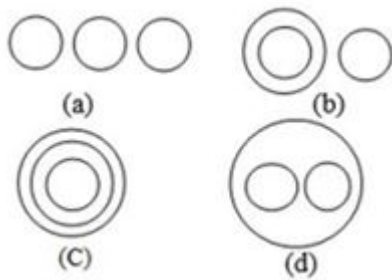
4. 4

5.

Answer : 1

• Question No. 50

Select the Venn diagram that best represents the relationship between the following classes: Oxygen, Hydrogen and Gases.



Options :

1. a
2. b
3. c
4. d
- 5.

Answer : c

• Question No. 51

Out of the four words listed, three are alike in some manner and one is different. Select the odd one.

Options :

1. Africa
2. India
3. Australia
4. Europe
- 5.

Answer : India

• Question No. 52

Arun said "Deepak's mother is the mother of my father's wife". How is Deepak related to Arun?

Options :

1. Brother
2. Father's Brother
3. Grandfather
4. Mother's Brother
- 5.

Answer : Mother's Brother

• Question No. 53

A team of 5 members is to be selected from 6 men A, B, C, D, E and F and 6 women P, Q, R, S, T and U, C and U have to be selected together. If B is selected, then neither U nor Q can be selected. Among A, B, S and T exactly two persons are to be selected. If E is selected, then neither S nor B can be selected. If A is selected, then B will be selected. Which of the following is the correct selection of the team?

Options :

1. C, A, B, P, R
2. P, R, S, T, D
3. P, R, A, B, S
4. C, U, A, B, S
- 5.

Answer : P, R, S, T, D

• Question No. 54

If in a code language PRIME is written as KIRNV, then SPORT would be written as _____ in the same language.

Options :

1. HKLIG
2. GJLHF
3. GJKHF
4. HLLIG
- 5.

Answer : HKLIG

• Question No. 55

Select the option that is related to the third term in the same way as the second term is related to the first term.

Srilanka : Island :: India : ?

Options :

1. Asia
2. Ocean
3. Peninsula
4. Plateau
- 5.

Answer : Peninsula

• Question No. 56

Six members M1, M2, M3, M4, M5 and M6 of a family are sitting in a row facing towards the north (not necessarily in the same order). M3 sits to the immediate right of M5 and second to the left of M1. M4 is second to the right of M2. M5 is not sitting at the ends of the row.

Who are sitting at the ends of the row?

Options :

1. M6 and M3
2. M6 and M1
3. M6 and M4
4. M3 and M4
- 5.

Answer : M6 and M4

• Question No. 57

A man said to a woman, "Your husband's daughter is the daughter of my brother". How is the man related to the woman's daughter?

Options :

1. Mother's Brother
2. Brother
3. Father's Brother
4. Father
- 5.

Answer : Father's Brother

- Question No. 58

Pick the odd one out.

Options :

1. Nitrogen
2. Iron
3. Oxygen
4. Fluorine
- 5.

Answer : Iron

- Question No. 59

Pick the odd one out.

Options :

1. Meter
2. Centimeter
3. Kilometer
4. Mile

5.

Answer : Mile

- Question No. 60

Select the letter cluster that will come next in the following series.

MNOP, HIJK, _____

Options :

1. CDEF
2. DEFG
3. BCDE
4. DEFC
- 5.

Answer : CDEF

- Question No. 61

If in a code language CRACKS is written as DQBBLR, then how would SPROUT be written in that same code language?

Options :

1. TQSPVU
2. TOSNVS
3. TQSNVS
4. TOSNVU
- 5.

Answer : TOSNVS

- Question No. 62

Select the option that will fill in the blank and complete the given series.

3, 4, 31, 156, _____

Options :

1. 372
2. 373
3. 500
4. 499
- 5.

Answer : 499

• Question No. 63

6 women W1, W2, W3, W4, W5 and W6 lives in different hotel P, Q, R, S, T and W (not necessarily in the same order). No two women live in same hotel. One woman live in only one hotel. W4 does not live in hotel P or R. W3 and W6 live in S and W respectively. W1 does not live in T or R. W5 does not live in R or P.

Which of the following combination of woman and hotel is definitely true?

Options :

1. W2 – P
2. W5 – T
3. W1 – P
4. W4 – T
- 5.

Answer : W1 – P

• Question No. 64

Select the option that is related to the third term in the same way as the second term is related to the first term.

Kilogram : Mass :: Kilometre : _____

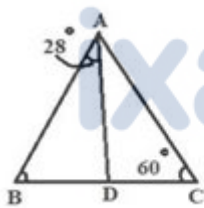
Options :

1. Length
2. Speed
3. Force
4. Time
- 5.

Answer : Length

- Question No. 65

If $\frac{AB}{AC} = \frac{BD}{DC}$ then $\angle ABC$ is:



Options :

1. 92°
2. 32°
3. 64°
4. 74°
- 5.

Answer : 64°

- Question No. 66

Simplify.

$$5 + 2 \times 3 \div (3 \times 2) \times 3$$

Options :

1. 8
2. 17
3. $7/6$
4. $16/3$
- 5.

Answer : $16/3$

• Question No. 67

If $\tan \theta = 1$ (θ an acute angle) then the value of $2 \sin \theta \cos \theta - \operatorname{cosec}^2 \theta$ is:

Options :

1. -1
2. 1
3. -3
4. $1 - \sqrt{2}$
- 5.

Answer : -1

• Question No. 68

An amount doubles itself on simple interest in 4 years. What is the percent per annum rate of interest?

Options :

1. 50%
2. 25%
3. 12.5%
4. 100%
- 5.

Answer : 25%

- Question No. 69

Two cars cover a certain distance by moving at speeds of 45 km/h and 50 km/h respectively. Find the distance traveled when one car takes 32 minutes more than the other to cover the distance.

Options :

1. $240/19$ km
2. $152/3$ km
3. $8/3$ km
4. 240 km
- 5.

Answer : 240 km

- Question No. 70

A can complete a piece of work in 24 days. He worked for 21 days and then B finished the remaining work in 5 days. In how many days can A and B together finish the work?

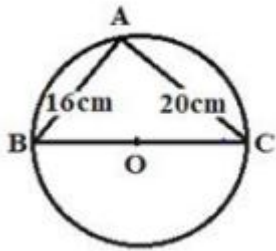
Options :

1. 45 days
2. 40 days
3. 15 days
4. 24 days
- 5.

Answer : 15 days

- Question No. 71

Find the area of $\triangle ABC$.



Options :

1. 32 cm^2
2. 160 cm^2
3. 320 cm^2
4. 240 cm^2
- 5.

Answer : 160 cm^2

• Question No. 72

If $(4y - 1)$ and $(y + 4)$ both are factors of $py^2 + 15y - q$ then:

Options :

1. $p = 4q$
2. $p = q$
3. $p = q/4$
4. $p = -q$
- 5.

Answer : $p = q$

• Question No. 73

Simplify.

$$4 \times \sqrt{0.000081}$$

Options :

1. 0.0018
2. 0.36
3. 0.0036
4. 0.036
- 5.

Answer : 0.036

• Question No. 74

If the circumference and area of a circle are numerically equal, then the radius of the circle is:

Options :

1. 4 units
2. 2 units
3. 16 units
4. 1 unit
- 5.

Answer : 2 units

• Question No. 75

Two numbers are in the ratio 3 : 2. If 8 and 6 are subtracted from the first and the second number respectively, the ratio becomes 8 : 5. The numbers are:

Options :

1. 3, 2
2. 24, 16
3. 40, 30
4. 32, 24
- 5.

Answer : 24,16

- Question No. 76

Find the value of x if, 20% of 75 = $225 - x\%$ of 420.

Options :

1. 50
2. 3
3. 1535
4. 20
- 5.

Answer : 50

- Question No. 77

Six years from now, Kirti's age will be twice the age of her brother Kunal, but 4 years ago she was four times as old as Kunal was then. Find the present age of Kunal.

Options :

1. 9 years
2. 15 years
3. 30 years
4. 24 years
- 5.

Answer : 9 years

- Question No. 78

What is the difference between $\frac{3}{5}$ of 200 and $\frac{1}{2}$ of 300?

Options :

1. 100
2. 200
3. 60
4. 30
- 5.

Answer : 30

• Question No. 79

By which number should $2\frac{1}{5}$ be multiplied to get $5\frac{2}{5}$?

Options :

1. $2\frac{5}{11}$
2. $\frac{11}{27}$
3. 3
4. $3\frac{1}{5}$
- 5.

Answer : $2\frac{5}{11}$

• Question No. 80

Find the least multiple of 7 which when divided by 6, 8, and 12 leaves 1 as the remainder.

Options :

1. 25
2. 49
3. 73
4. 169
- 5.

Answer : 49

- Question No. 81

A sells an article to B at a profit of 20% and B sells it to C at a profit of 20%. If C pays ₹360 for it, what was the cost price for A?

Options :

1. ₹308
2. ₹144
3. ₹250
4. ₹120
- 5.

Answer : ₹250

- Question No. 82

Find the value of

$$\frac{\cos^2 22^\circ + \cos^2 68^\circ}{2(\sin^2 22^\circ + \sin^2 68^\circ)} - \sin^2 16^\circ - \cos 16^\circ \sin 74^\circ$$

Options :

1. $-1/2$
2. 0
3. $3/2$
4. 2
- 5.

Answer : $-1/2$

- Question No. 83

A bag contains cards numbered between 33 and 92. If one card is drawn from the bag, the probability that the number on the drawn card is a perfect square is:

Options :

1. $5/59$
2. $4/59$
3. $1/15$
4. $-1/12$
- 5.

Answer : $1/15$

• Question No. 84

LCM of 30, 40, and 45 is:

Options :

1. 115
2. 54000
3. 5
4. 360
- 5.

Answer : 360

• Question No. 85

At what time will ₹3,200 invested at 10% per annum compounded quarterly become ₹3,362?

Options :

1. 2 years
2. $1/2$ year
3. $2 (1/2)$ years
4. $1/4$ year
- 5.

Answer : $1/2$ year

- Question No. 86

A, B, and C together can do a piece of work in 14 days, whereas C alone can do the same work in 42 days. How long will A and B together take to finish it?

Options :

1. 28 days
2. 35 days
3. 21 days
4. 7 days
- 5.

Answer : 21 days

- Question No. 87

For $a = -5$ and $b = 5$, value of $a^2 - b^2$ is:

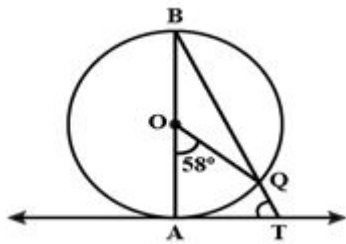
Options :

1. -10
2. 0
3. -50
4. 100
- 5.

Answer : 0

- Question No. 88

In the given figure, AB is the diameter of a circle with a center O, and AT is a tangent. If $\angle AOQ = 58^\circ$, find $\angle ATQ$.



Options :

1. 72°
2. 61°
3. 108°
4. 126°
- 5.

Answer : 61°

• Question No. 89

What is the value of $8x^3 + 18xy + y^3 - 27$ when $2x + y - 3 = 0$.

Options :

1. -27
2. 27
3. 0
4. 1
- 5.

Answer : 0

• Question No. 90

Two friends received a bonus of ₹2,000 each in their bank accounts. They already have ₹47,000 and ₹54,000 in their respective bank accounts. The ratio of the amounts in their respective accounts will be:

Options :

1. 7 : 8
2. 47 : 56
3. 49 : 54
4. 47 : 54
- 5.

Answer : 7 : 8

• Question No. 91

Kings and Queens of black color are taken out from a deck of 52 playing cards. A card is drawn from the remaining well-shuffled cards. The probability of getting a spade card is.

Options :

1. $\frac{1}{4}$
2. $\frac{11}{13}$
3. $\frac{11}{48}$
4. $\frac{11}{52}$
- 5.

Answer : $\frac{11}{48}$

• Question No. 92

Simplify.

$$\frac{1800 \div (24 \div 8 \times 3) + 16}{\frac{3}{4} \times (32 \div 2)}$$

Options :

1. 18
2. $\frac{454}{3}$
3. $\frac{150}{17}$
4. $\frac{39}{4}$

5.

Answer : 18

• Question No. 93

Select the option that gives decimal numbers 0.25, 1.24, 0.0882 and 2.67 arranged in ascending order.

Options :

1. 0.0882, 0.25, 1.24, 2.67

2. 0.25, 1.24, 0.0882, 2.67

3. 2.67, 1.24, 0.25, 0.0882

4. 1.24, 0.25, 2.67, 0.0882

5.

Answer : 0.0882, 0.25, 1.24, 2.67

• Question No. 94

A fruit seller buys oranges at the rate of 12 for ₹60. How many oranges should he sell for ₹60 so as to gain 20%?

Options :

1. 9

2. 10

3. 11

4. 8

5.

Answer : 10

Direction:

The given table shows the marks of various students in a class. Study the table and answer the question that follows.

Marks (out of 50)					
Name of Students	Physics	Chemistry	Maths	English	Sanskrit
A	48	47	49	46	44
B	29	33	22	15	30
C	35	36	42	40	29
D	46	49	48	48	40
E	32	30	25	21	22

- Question No. 95

Which student got the lowest overall percentage of marks?

Options :

1. E
2. B
3. C
4. D
- 5.

Answer : B

Direction:

The given table shows the marks of various students in a class. Study the table and answer the question that follows.

Marks (out of 50)					
Name of Students	Physics	Chemistry	Maths	English	Sanskrit
A	48	47	49	46	44
B	29	33	22	15	30
C	35	36	42	40	29
D	46	49	48	48	40
E	32	30	25	21	22

- Question No. 96

What is the maximum overall percentage (average of percentages obtained in all subjects by any student) of marks obtained by any student among A, B, C, D and E?

Options :

1. 93.40%
2. 93.60%
3. 92.60%
4. 92.40%
- 5.

Answer : 93.60%

Direction:

The given table shows the marks of various students in a class. Study the table and answer the question that follows.

Marks (out of 50)					
Name of Students	Physics	Chemistry	Maths	English	Sanskrit
A	48	47	49	46	44
B	29	33	22	15	30
C	35	36	42	40	29
D	46	49	48	48	40
E	32	30	25	21	22

- Question No. 97

Which two students have the least difference of marks between them?

Options :

1. B and C
2. A and D
3. B and E
4. E and D
- 5.

Answer : B and E

Direction:

The given table shows the marks of various students in a class. Study the table and answer the question that follows.

Marks (out of 50)					
Name of Students	Physics	Chemistry	Maths	English	Sanskrit
A	48	47	49	46	44
B	29	33	22	15	30
C	35	36	42	40	29
D	46	49	48	48	40
E	32	30	25	21	22

• Question No. 98

If we rank students on the basis of all five subjects and then we rank them only on the basis of physics, chemistry and math's then what will happen to the arrangement of ranks in both cases?

Options :

1. All ranks will be different.
2. The ranks will remain the same in both cases.
3. Only the top two ranks will be different.
4. Only the bottom two ranks will be different.
- 5.

Answer : The ranks will remain the same in both cases.

• Question No. 99

How will you write 4.14 hours in hours, minutes, and seconds?

Options :

1. 4 hours, 8 minutes, 4 seconds
2. 4 hours, 14 minutes

- 3. 4 hours, 8 minutes, 24 seconds
- 4. 4 hours, 10 minutes, 4 seconds
- 5.

Answer : 4 hours, 14 minutes

• Question No. 100

Select the option that will fill in the blank and complete the given series.

3, 4, 0, 9, -7, _____

Options :

- 1. 8
- 2. -32
- 3. 18
- 4. 7
- 5.

Answer : 18

[Attempt Mock Test Now](#)

All ixamBee Mock Test are FREE @ www.ixamBee.com