

## • Question No. 1

In a family, B is the father of K. B has only two children. K is the brother of R. R is the daughter of P. A is the granddaughter of P. S is the father of A. How is S related to K?

**Options :**


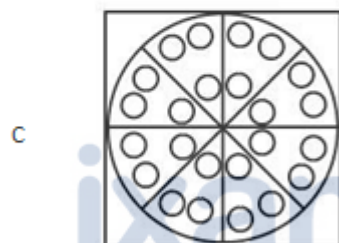
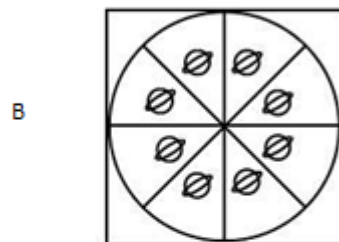

1. Son-in-law
2. Son
3. Brother-in-law
4. Brother
- 5.

Answer : Brother-in-law

## • Question No. 2

A paper is folded and cut as shown in the following figures. How will it appear when unfolded?





Options :

1. A
2. B
3. C
4. D
- 5.

Answer : A

Select the option that is related to the third letter-cluster in the same way as the second letter-cluster is related to the first letter cluster.

GATE : HXYX :: SINK : \_\_\_\_\_

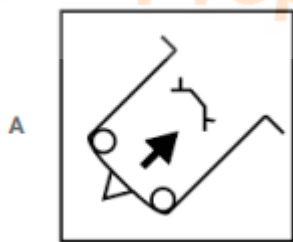
Options :

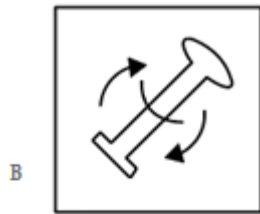
1. TFSD
2. TETD
3. TESD
4. TGSE
- 5.

Answer : TFSD

- Question No. 4

Select the option in which the given figure is embedded.





Options :

1. A
2. B
3. C
4. D
- 5.

Answer : D

• Question No. 5

Three of the following four numbers are alike in a certain way and one is different. Pick the number that is different from the rest .

Options :

1. 9178
2. 7158
3. 5138

4. 3128

5.

Answer : 3128

• Question No. 6

Arrange the following words in a logical and meaningful order.

1. Monkey

2. Elephant

3. Rat

4. Fly

5. Lion

Options :

1. 3, 4, 1, 5, 2

2. 3, 4, 1, 2, 5


3. 4, 3, 1, 5, 2

4. 4, 1, 3, 2, 5

5.

Answer : 4, 3, 1, 5, 2

• Question No. 7

'Chickenpox' is related to 'Virus' in the same way as 'Ringworm' is related to '\_\_\_\_\_'.  


Options :

1. Fungus

2. Nematodes

3. Bacterium

4. Protozoan

5.

Answer : Fungus

• Question No. 8

Select the combination of letters that when sequentially placed in the gaps of the given letter series will complete the series.

abc\_dab\_ \_d\_b\_cdab\_c\_

Options :

1. ccaacdc

2. acacdcc

3. cacacdc

4. cccaccd

5.

Answer : cccaccd

• Question No. 9

Select the number-pair in which the two numbers are related in the same way as are the two numbers of the following number-pair.

7 : 85

Options :

1. 3 : 31

2. 8 : 113

3. 5 : 43

4. 2 : 9

5.

Answer : 8 : 113

- Question No. 10

If  $V = 44$  and  $FAT = 54$ , then how will you code LATE ?

**Options :**

1. 110
2. 76
3. 19
4. 54
- 5.

Answer : 76

- Question No. 11

Select the set in which the numbers are related in the same way as are the numbers of the following set.

(4, 14, 44)

**Options :**

1. (9, 30, 57)
2. (11, 35, 107)
3. (5, 15, 30)
4. (7, 23, 69)
- 5.

Answer : (11, 35, 107)

- Question No. 12

Three of the following four words are alike in a certain way and one is different. Pick the odd one out .

**Options :**

1. Roar

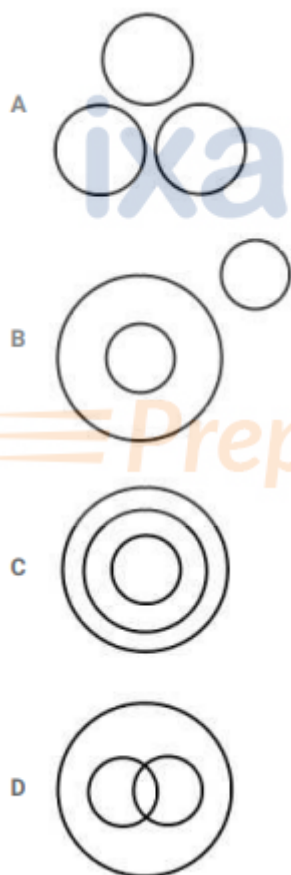
2. Hoot
3. Bray
4. Amble
- 5.

Answer : Amble

• Question No. 13

Select the Venn diagram that best illustrates the relationship between the following classes.

Lethargy, Anxiety, Power



Options :

1. A
2. B



3. C

4. D

5.

Answer : A

• Question No. 14

Select the word-pair in which the two words are related in the same way as are the two words in the following word-pair.

Butterflies : Lepidopterist

**Options :**

1. Chromosomes: Botanist

2. Jewels : Jeweller

3. Maps : Cartographer

4. Postcards : Deltiologist

5.

Answer : Postcards : Deltiologist

• Question No. 15

Which two signs should be interchanged in the following equation to make it correct ?

$$132 \times 11 + 8 - 3 \div 12 = -16$$

**Options :**

1. – and ×

2. × and ÷

3. + and –

4. + and ×

5.

Answer : × and ÷

• Question No. 16

Three of the following four letter-clusters are alike in a certain way and one is different. Pick the odd one out.

**Options :**

1. HSKPM
2. DWGTJ
3. PKSHV
4. JQMNP
- 5.

Answer : HSKPM

• Question No. 17

A plastic toy costs ₹7. A plastic spoon costs ₹5. X spends ₹38 on these plastic items. Find the number of plastic toys he/she purchased?

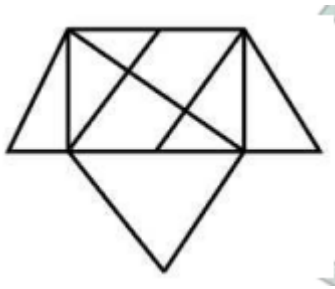
**Options :**

1. 5
2. 2
3. 3
4. 4
- 5.

Answer : 4

• Question No. 18

How many triangles are present in the following figure?



Options :

1. 13
2. 15
3. 16
4. 14
- 5.

Answer : 15

• Question No. 19

Select the set in which the numbers are related in the same way as are the numbers of the following set.

(4, 152, 6)

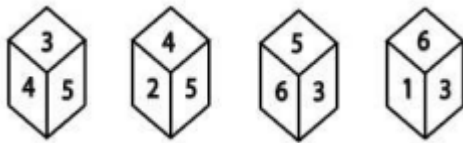
Options :

1. (2, 208, 6)
2. (4, 179, 7)
3. (3, 55, 4)
4. (5, 287, 8)
- 5.

Answer : (2, 208, 6)

• Question No. 20

Four different positions of the same dice are shown. Find the number on the face opposite to the one having 3.



Options :

1. 2
2. 4
3. 1
4. 6
- 5.

Answer : 2

• Question No. 21

In a code language, 'BLEND' is written as 'ENHPG'. How will 'WINNER' be written in the same language?

Options :

1. ZKOPHT
2. YKQPHT
3. ZKQPHU
4. ZKQPHT
- 5.

Answer : ZKQPHT

• Question No. 22

Which number will replace the question mark (?) in the following series?

5, 8, 20, 34, 76, 142, ?

Options :

1. 272
2. 296

3. 284

4. 302

5.

Answer : 296

• Question No. 23

Select the correct mirror image of the given figure when the mirror is placed to the right side of the figure.



Options :

1. A

2. B

3. C

4. D

5.

Answer : D

• Question No. 24

Three statements are given, followed by three conclusions numbered I, II and III. Assuming the statements to be true, even if they seem to be at variance with commonly known facts, decide which of the conclusions logically follow(s) from the statements.

Statements:

- A- All rocks are oceans.
- B- All oceans are balloons.
- C- Some watches are balloons.

Conclusions:

- I. Some balloons are rocks.
- II. Some watches are oceans.
- III. All oceans are rocks.

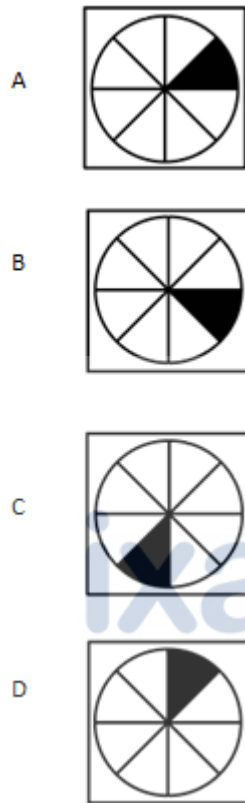
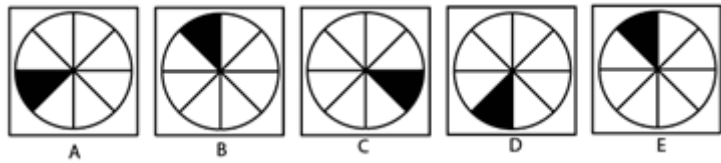
Options :

1. Only conclusion II follows.
2. Only conclusion I follows.
3. Only conclusions I and III follow.
4. Only conclusions I and II follow
- 5.

Answer : Only conclusion I follows.

• Question No. 25

Select the figure that will come next in the following figure series.



Options :

1. A
2. B
3. C
4. D
- 5.

Answer : A

• Question No. 26

The Sunauli border is a famous transit point between India and \_\_\_\_\_.

Options :

1. Nepal
2. Bhutan
3. Pakistan
4. Myanmar
- 5.

Answer : Nepal

• Question No. 27

\_\_\_\_\_ is the branch of Biology which is concerned with the study of structure of organism and their parts.

Options :

1. Chronobiology
2. Ecology
3. Mycology
4. Anatomy
- 5.

Answer : Anatomy

• Question No. 28

Chhattisgarh does NOT share its boundary with:

Options :

1. Uttar Pradesh
2. Madhya Pradesh
3. Telangana
4. West Bengal
- 5.

Answer : West Bengal



- Question No. 29

Which is the coldest place in India?

**Options :**

1. Srinagar
2. Leh
3. Dras
4. Amarnath
- 5.

Answer : Dras

- Question No. 30

Who was appointed as the 24th Chief of Naval Staff in May 2019?

**Options :**

1. Sunil Lanba
2. Bimal Verma
3. Surinder Pal Singh
4. Karambir Singh
- 5.

Answer : Karambir Singh

- Question No. 31

Ottamthullal' is a traditional dance form that is popular in the state of:

**Options :**

1. Andhra Pradesh
2. Kerala
3. Karnataka

4. Tamil Nadu

5.

Answer : Kerala

- Question No. 32

Scissor Cup is associated with which sports?

**Options :**

1. Football

2. Hockey

3. Cricket

4. Badminton

5.

Answer : Football

- Question No. 33

What is the height of the Statue of Unity that is located in Gujarat?

**Options :**

1. 153 m

2. 93 m

3. 182 m

4. 120 m

5.

Answer : 182 m

- Question No. 34

The Walayar Dam is in which district of Kerala?

**Options :**

1. Thrissur
2. Palakkad
3. Kasaragod
4. Idukki
- 5.

Answer : Palakkad

• Question No. 35

With which of the following sports is Karun Chandhok associated?

**Options :**

1. Lawn Tennis
2. Car Racing
3. Table Tennis
4. Badminton
- 5.

Answer : Car Racing

• Question No. 36

Which state has proposed to set up the first 'Blockchain District' in India?

**Options :**

1. Gujarat
2. Tamil Nadu
3. Maharashtra
4. Telangana
- 5.

Answer : Telangana

- Question No. 37

Veteran journalist and TV anchor Karan Thapar is the author of which of the following books?

**Options :**

1. Rebel Sultans
2. Devil's Advocate: The Untold Story
3. Happiness
4. Why I Am a Hindu
- 5.

Answer : Devil's Advocate: The Untold Story

- Question No. 38

The enzyme, Lipase is produced by which organ of the body?

**Options :**

1. Salivary gland
2. Pancreas
3. Liver
4. Lung
- 5.

Answer : Pancreas

- Question No. 39

AIX is the operating system of which company?

**Options :**

1. IBM
2. Unisys
3. Apple

4. Microsoft

5.

Answer : IBM

- Question No. 40

The Book 'Gulamgiri' was written by:

**Options :**

1. Ramabai Shinde

2. Haridas Thakur

3. Narayana Guru

4. Jyotirao Phule

5.

Answer : Jyotirao Phule

- Question No. 41

Who among the following was India's defence minister during the 1971 war between India and Pakistan?

**Options :**

1. Yashwantrao Chavan

2. Indira Gandhi

3. Swaran Singh

4. Jagjivan Ram

5.

Answer : Jagjivan Ram

- Question No. 42

In the context of banking sector of India, what is the full form of IMPS?

**Options :**

1. Immediate Payment Sector
2. Instant Payment Service
3. Instant Payment Sector
4. Immediate Payment Service
- 5.

Answer : Immediate Payment Service

• Question No. 43

In May 2019, Suresh Kumar was appointed as the Chief Technology Officer of:

**Options :**

1. Apple
2. Walmart
3. Google
4. Amazon
- 5.

Answer : Walmart

• Question No. 44

When was the first match of ICC Cricket World Cup 2019 played ?

**Options :**

1. 30 May 2019
2. 1 June 2019
3. 2 June 2019
4. 31 May 2019
- 5.

Answer : 30 May 2019

- Question No. 45

In May 2019, Prem Singh Tamang was sworn in as the Chief Minister of:

**Options :**

1. Assam
2. Arunachal Pradesh
3. Odisha
4. Sikkim
- 5.

Answer : Sikkim

- Question No. 46

In which of the following locations was the Global Venture Capital Summit 2018 held?

**Options :**

1. Pune
2. Ahmedabad
3. Mumbai
4. Goa
- 5.

Answer : Goa

- Question No. 47

Who among the following coined the term "battery" to describe linked capacitors?

**Options :**

1. Lewis Urry
2. Benjamin Franklin
3. John Frederic Daniell

4. Luigi Galvani

5.

Answer : Benjamin Franklin

- Question No. 48

Who among the following is the author of "Principles of Political Economy"?

**Options :**

1. Milton Friedman
2. David Ricardo
3. Joseph Schumpeter
4. John Stuart Mill
- 5.

Answer : John Stuart Mill

- Question No. 49

Who was the founder of the first search engine called 'Archie'?

**Options :**

1. David Filo
2. Matthew Gray
3. Alan Emtage
4. Martijn Koster
- 5.

Answer : Alan Emtage

- Question No. 50

Which of the following art forms of Kerala is in UNESCO's list of the Intangible Cultural Heritage of Humanity?



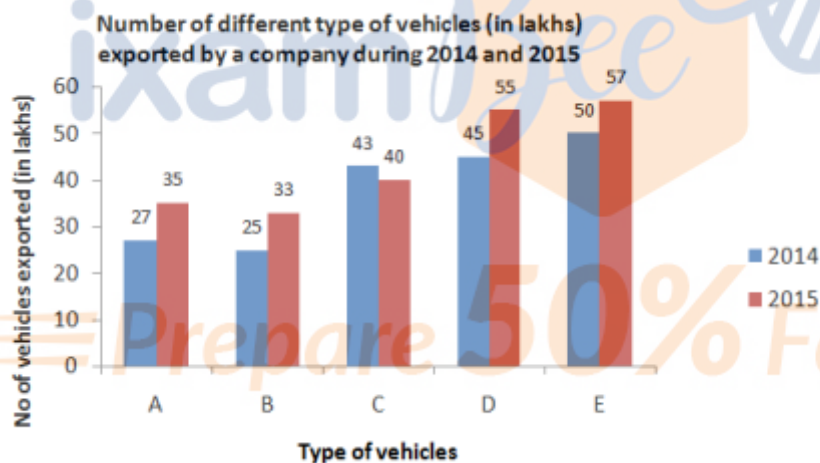
Options :

1. Thiruvathirakali
2. Kutiyattam
3. Chakyar Koothu
4. Theyyam
- 5.

Answer : Kutiyattam

• Question No. 51

The given Bar Graph presents the number of different types of vehicles (in lakhs) exported by a company during 2014 and 2015.



What is the ratio of the total number of type A and C vehicles exported in 2014 to the total number of type B and E vehicles exported in 2015?

Options :

1. 5 : 7
2. 8 : 11
3. 7 : 9
4. 2 : 3
- 5.

Answer : 7 : 9

• Question No. 52

Tangents AB and AC are drawn to a circle from a point A, such that  $\angle BAC = 40^\circ$ . A chord CP is drawn parallel to BA. The measure of  $\angle CBP$  is:

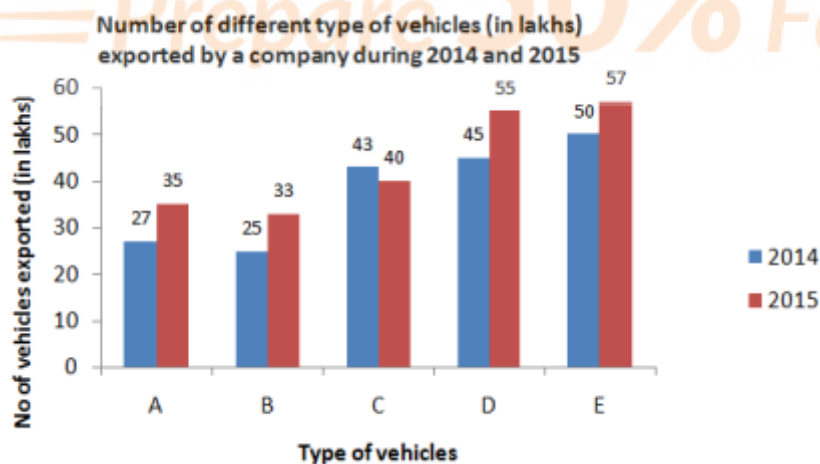
Options :

1.  $35^\circ$
2.  $55^\circ$
3.  $40^\circ$
4.  $45^\circ$
- 5.

Answer :  $40^\circ$

• Question No. 53

The given Bar Graph presents the number of different types of vehicles (in lakhs) exported by a company during 2014 and 2015.



Which type of vehicle showed 32% increase in export in 2015 as compared to that in the previous year?

Options :

1. A

- 2. B
- 3. D
- 4. E
- 5.

Answer : B

• Question No. 54

The area of a field in the shape of a hexagon is  $2400\sqrt{3} \text{ m}^2$  ? What will be the cost of fencing it at ₹18.50 per metre?

Options :

- 1. ₹5180
- 2. ₹5550
- 3. ₹4440
- 4. ₹5920
- 5.

Answer : ₹4440

• Question No. 55

If  $8x^2 + y^2 - 12x - 4xy + 9 = 0$ , then the value of  $(14x - 5y)$  is :

Options :

- 1. 9
- 2. 3
- 3. 5
- 4. 6
- 5.

Answer : 6

- Question No. 56

If the nine-digit number  $43x1145y2$  is divisible by 88, then the value of  $(3x - 2y)$ , for the smallest value of  $y$ , is:

**Options :**

1. 18
2. 20
3. 9
4. 22
- 5.

Answer : 22

- Question No. 57

The sides AB and AC of  $\triangle ABC$  are produced to points D and E, respectively. The bisectors of  $\angle CBD$  and  $\angle BCE$  meet at P. If  $\angle A = 72^\circ$  then the measure of  $\angle P$  is:

**Options :**

1.  $60^\circ$
2.  $54^\circ$
3.  $45^\circ$
4.  $36^\circ$
- 5.

Answer :  $54^\circ$

- Question No. 58

By selling 72 articles, a loss equal to the selling price of 8 articles was incurred. What is the loss percentage?

**Options :**

1. 9.5%
2. 11.7%

3. 10%

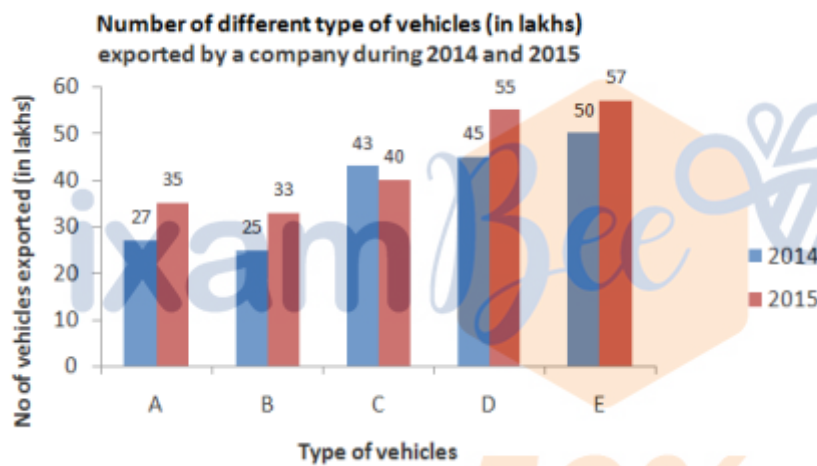
4. 12%

5.

Answer : 10%

• Question No. 59

The given Bar Graph presents the number of different types of vehicles (in lakhs) exported by a company during 2014 and 2015.



The total number of type B, D and E vehicles exported in 2014 is what percentage of the total number of type A, C, D and E vehicles exported in 2015 (correct to one decimal place)?

**Options :**

1. 62.4%

2. 64.2%

3. 63.8%

4. 61.6%

5.

Answer : 64.2%

• Question No. 60

Find the value of

$$\frac{\tan 13^\circ \tan 37^\circ \tan 45^\circ \tan 53^\circ \tan 77^\circ}{2 \operatorname{cosec}^2 60^\circ (\cos^2 60^\circ - 3 \cos 60^\circ + 2)}$$

Options :

1. 1
2.  $1/2$
3. 2
4.  $3/2$
- 5.

Answer :  $1/2$

• Question No. 61

A and B can complete a task in 25 days. B alone can complete  $33 \frac{1}{3} \%$  of the same task in 15 days. In how many days can A alone complete  $\frac{4}{15}^{\text{th}}$  of the same task?

Options :

1. 10
2. 15
3. 12
4. 18
- 5.

Answer : 15

• Question No. 62

A man travels a certain distance at 12 km/h and returns to the starting point at 9 km/h. The total time taken by him for the entire journey  $2 \frac{1}{3}$  hours. The total distance (in km) covered by him is:

**Options :**

1. 12
2. 25
3. 28
4. 24
- 5.

Answer : 24

- Question No. 63

$$\frac{\cot \theta}{(1 - \sin \theta)(\sec \theta + \tan \theta)}$$

is equal to:

**Options :**

1. Sec  $\theta$
2. 1
3. Cosec  $\theta$
4. Sin  $\theta$
- 5.

Answer : Cosec  $\theta$

- Question No. 64

If  $x + y = 7$  and  $xy = 10$ , then the value of  $(1/x^3 + 1/y^3)$  is :

**Options :**

1. 0.131
2. 0.543
3. 0.453
4. 0.133
- 5.

Answer : 0.133

• Question No. 65

The marked price of an article is ₹600. After allowing a discount of 25% on the marked price, there was a loss of ₹30. The loss percentage is:

**Options :**

1. 6.25%
2. 6.50%
3. 6.50%
4. 7.50%
- 5.

Answer : 6.25%

• Question No. 66

There are three numbers. If the average of any two of them is added to the third number, the sums obtained are 177, 163 and 138. What is the average of the largest and the smallest of the given numbers?

**Options :**

1. 67
2. 81
3. 79
4. 76
- 5.

Answer : 76

• Question No. 67

A man spends 72% of his income. If his income increases by 28% and his expenditure increases by 25%, then what is the percentage increase or decrease in his savings (correct to one decimal place)?



**Options :**

1. 26.3% decrease
2. 35.7% increase
3. 38.4% increase
4. 26.9% decrease
- 5.

Answer : 35.7% increase

• Question No. 68

In a circle with centre O, AD is a diameter and AC is a chord. B is a point on AC, such that  $OB = 5$  cm and  $\angle OBA = 60^\circ$ . If  $\angle DOC = 60^\circ$ , then what is the length of BC ?

**Options :**

1.  $5\sqrt{3}$  cm
2. 5 cm
3.  $3\sqrt{5}$  cm
4. 4 cm
- 5.

Answer : 5 cm

• Question No. 69

The value of  $\frac{3}{4} \div \frac{3}{4}$  of  $\frac{4}{3} + \frac{5}{2} \div \frac{2}{5}$  of  $\frac{5}{4} - (\frac{2}{3} + \frac{2}{3}$  of  $\frac{5}{6})$  is :

**Options :**

1.  $\frac{22}{3}$
2.  $\frac{41}{9}$
3.  $\frac{50}{9}$
4.  $\frac{14}{3}$
- 5.

Answer : 50/9

• Question No. 70

In  $\triangle ABC$ ,  $D$  is a point on side  $AB$  such that  $BD = 2$  cm and  $DA = 3$  cm. ( $E$  is a point on  $BC$  such that  $DE \parallel AC$ , and  $AC = 4$  cm. Then (Area of  $\triangle BDE$ ) : (Area of trapezium  $ACED$ ) is:

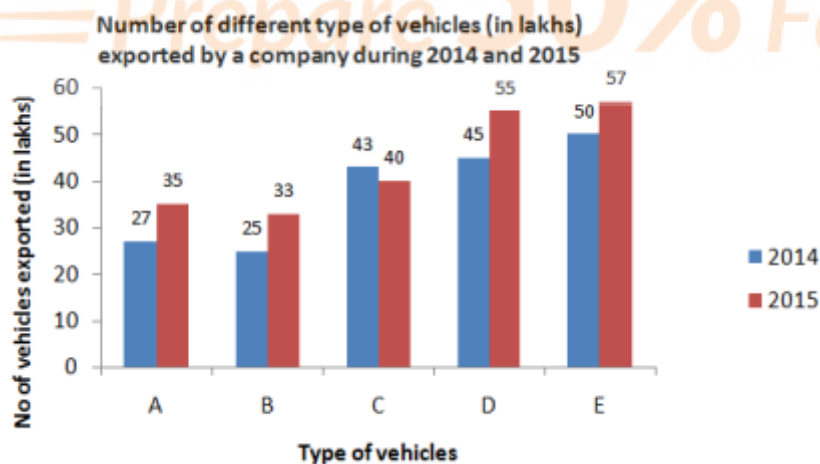
Options :

1. 1:5
2. 2:5
3. 4:25
4. 4:21
- 5.

Answer : 4:21

• Question No. 71

The given Bar Graph presents the number of different types of vehicles (in lakhs) exported by a company during 2014 and 2015.



The average number of type A, B and D vehicles exported in 2015 was  $x\%$  less than the number of type E vehicles exported in 2014. What is the value of  $x$  ?

Options :

1. 18
2. 20
3. 25
4. 24
- 5.

Answer : 18

• Question No. 72

If  $x + y + z = 19$ ,  $xyz = 216$  and  $xy + yz + zx = 114$ , then the value of  $\sqrt{x^3 + y^3 + z^3 + xyz}$  is :

Options :

1. 28
2. 30
3. 35
4. 32
- 5.

Answer : 35

• Question No. 73

If  $2\cos^2 \theta - 5\cos \theta + 2 = 0$ , then the value of  $(\operatorname{cosec} \theta + \cot \theta)$  is :

Options :

1.  $\sqrt{3}$
2.  $1/3$
3.  $1/\sqrt{3}$
4.  $2\sqrt{3}$
- 5.

Answer :  $\sqrt{3}$

- Question No. 74

What is the difference between the compound interest, when interest is compounded 5-monthly, and the simple interest on a sum of ₹12,000 for  $1\frac{1}{4}$  years at 12% per annum?

**Options :**

1. ₹92.50
2. ₹93
3. ₹91.50
4. ₹90
- 5.

Answer : ₹91.50

- Question No. 75

A sum of ₹4,360 was to be divided among A, B, C, and D in the ratio 3:4:5:8, but it was divided in the ratio  $\frac{1}{3}:\frac{1}{4}:\frac{1}{5}:\frac{1}{8}$ . Was divided by mistake: which of the following statements will hold as a result

**Options :**

1. D received ₹1,144 less
2. B received ₹318 more
3. A received ₹956 more
4. C received ₹130 more
5. none of these

Answer : D received ₹1,144 less

- Question No. 76

Select the correct passive form of the given sentence.

The prisoners have made these paintings.

**Options :**

1. These prisoners have been made by the paintings.
2. These paintings are made by the prisoners.
3. These paintings have been made by the prisoners.
4. These paintings were made by the prisoners.
- 5.

Answer : These paintings have been made by the prisoners.

• Question No. 77

Select the most appropriate antonym of the given word.

PERPETRATE

Options :

1. Prevent
2. Execute
3. Perform
4. Commit
- 5.

Answer : Prevent

• Question No. 78

Select the most appropriate synonym of the given word.

EXPOSE

Options :

1. Hide
2. Reveal
3. Protect
4. Bury
- 5.

Answer : Reveal

• Question No. 79

Select the word which means the same as the group of words given.

Something that cannot be avoided

**Options :**

1. Indelible
2. Infallible
3. Invincible
4. Inevitable
- 5.

Answer : Inevitable

• Question No. 80

Select the most appropriate synonym of the given word.

ADVERSARY

**Options :**

1. Helper
2. Supporter
3. Assistant
4. Rival
- 5.

Answer : Rival

• Question No. 81

Given below are four jumbled sentences. Out of the given options pick the one that gives their correct order.

- A. As he looked at them, their heads began to hang low.
- B. Akbar glanced at his courtiers in search of an answer.
- C. Once Akbar asked his courtiers a very strange question.
- D. The courtiers were dumb-founded by his question.

**Options :**

- 1. CADB
- 2. DCAB
- 3. ACBD
- 4. CDBA
- 5.

Answer : CDBA

Direction:

In the following passage some words have been deleted. Fill in the blanks with the help of the alternatives given. Select the most appropriate option for each blank.

Comprehension:

During organized tours in Germany, tourists can (1) \_\_\_\_\_ a former Nazi compound 40 kilometers from Berlin (2) \_\_\_\_\_ the 'Forbidden City'. Around twenty thousand people visit this place (3) \_\_\_\_\_ year to learn about Nazi military history. The Nazis (4) \_\_\_\_\_ militarily active at the compound, which was kept (5) \_\_\_\_\_ in a forest and behind a fence. They hid underground bunkers in country homes, and they planned much of World War II here.

- Question No. 82

Select the most appropriate option for blank No. 1.

**Options :**

- 1. Trip
- 2. Stay
- 3. Travel

4. Visit

5.

Answer : Visit

Direction:

In the following passage some words have been deleted. Fill in the blanks with the help of the alternatives given.

Select the most appropriate option for each blank.

Comprehension:

During organized tours in Germany, tourists can (1) \_\_\_\_\_ a former Nazi compound 40 kilometers from Berlin (2) \_\_\_\_\_ the 'Forbidden City'. Around twenty thousand people visit this place (3) \_\_\_\_\_ year to learn about Nazi military history. The Nazis (4) \_\_\_\_\_ militarily active at the compound, which was kept (5) \_\_\_\_\_ in a forest and behind a fence. They hid underground bunkers in country homes, and they planned much of World War II here.

• Question No. 83

Select the most appropriate option for blank No. 2.

Options :

1. Calls

2. Call

3. Called

4. Calling

5.

Answer : Called

Direction:

In the following passage some words have been deleted. Fill in the blanks with the help of the alternatives given.

Select the most appropriate option for each blank.

Comprehension:

During organized tours in Germany, tourists can (1) \_\_\_\_\_ a former Nazi compound 40 kilometers from Berlin (2) \_\_\_\_\_ the 'Forbidden City'. Around twenty thousand people visit this place (3) \_\_\_\_\_ year to learn about Nazi



military history. The Nazis (4) \_\_\_\_\_ militarily active at the compound, which was kept (5) \_\_\_\_\_ in a forest and behind a fence. They hid underground bunkers in country homes, and they planned much of World War II here.

- Question No. 84

Select the most appropriate option for blank No. 3.

**Options :**

1. Every
2. Whole
3. All
4. One
- 5.

Answer : Every

Direction:

In the following passage some words have been deleted. Fill in the blanks with the help of the alternatives given. Select the most appropriate option for each blank.

Comprehension:

During organized tours in Germany, tourists can (1) \_\_\_\_\_ a former Nazi compound 40 kilometers from Berlin (2) \_\_\_\_\_ the 'Forbidden City'. Around twenty thousand people visit this place (3) \_\_\_\_\_ year to learn about Nazi military history. The Nazis (4) \_\_\_\_\_ militarily active at the compound, which was kept (5) \_\_\_\_\_ in a forest and behind a fence. They hid underground bunkers in country homes, and they planned much of World War II here.

- Question No. 85

Select the most appropriate option for blank No. 4.

**Options :**

1. Was
2. Were
3. have been

4. has been

5.

Answer : Were

Direction:

In the following passage some words have been deleted. Fill in the blanks with the help of the alternatives given.

Select the most appropriate option for each blank.

Comprehension:

During organized tours in Germany, tourists can (1) \_\_\_\_\_ a former Nazi compound 40 kilometers from Berlin (2) \_\_\_\_\_ the 'Forbidden City'. Around twenty thousand people visit this place (3) \_\_\_\_\_ year to learn about Nazi military history. The Nazis (4) \_\_\_\_\_ militarily active at the compound, which was kept (5) \_\_\_\_\_ in a forest and behind a fence. They hid underground bunkers in country homes, and they planned much of World War II here.

• Question No. 86

Select the most appropriate option for blank No. 5.

Options :

1. Concealed
2. Holy
3. Mysterious
4. Sacred
- 5.

Answer : Concealed

• Question No. 87

Select the wrongly spelt word.

Options :

1. Celebrant

2. Celebrate
3. Celeberation
4. Celebrity
- 5.

Answer : Celeberation

• Question No. 88

Select the most appropriate meaning of the given idiom.

leave no stone unturned

Options :

1. leave the path halfway
2. not make enough efforts
3. turn everything upside down
4. try everything possible
- 5.

Answer : try everything possible

• Question No. 89

Select the most appropriate option to substitute the underlined segment in the given sentence. If there is no need to substitute it, select No improvement.

Lot of peoples visit this restaurant as its biryani is famous.

Options :

1. Much of people
2. A lot of people
3. A lot peoples
4. No improvement
- 5.

Answer : A lot of people

- Question No. 90

Select the correct indirect form of the given sentence.

Mr. Puri said to me, "Why are you taking down this fence?"

**Options :**

1. Mr. Puri said to me why you were taking down that fence.
2. Mr. Puri said to me that why are you taking down this fence.
3. Mr. Puri said to me that why are you taking down this fence.
4. Mr. Puri asked me why I was taking down that fence.
- 5.

Answer : Mr. Puri asked me why I was taking down that fence.

- Question No. 91

In the sentence identify the segment which contains the grammatical error.

Tilak rowed through the river and tied his boat on the other side.

**Options :**

1. Tilak rowed
2. and tied his boat
3. through the river
4. on the other side
- 5.

Answer : through the river

- Question No. 92

Select the most appropriate word to fill in the blank.

I had a stroke at an early age, but what I thought was a great \_\_\_\_\_ at that time changed my life for the better.

**Options :**

1. Injustice
2. Incentive
3. Indication
4. Indent
- 5.

Answer : Injustice

• Question No. 93

Select the word which means the same as the group of words given.

A person belonging to a foreign country

**Options :**

1. Native
2. Resident
3. Alien
4. Inhabitant
- 5.

Answer : Alien

• Question No. 94

Select the most appropriate meaning of the given idiom.

dance to someone's tune

**Options :**

1. argue with others on petty matters
2. do what others want you to do

3. be engaged in an energetic activity
4. delay in making a decision
- 5.

Answer : do what others want you to do

• Question No. 95

In the sentence identify the segment which contains the grammatical error.

Three more elevated roads have been propose in the new plan to unclog the traffic in Delhi.

**Options :**

1. in the new plan
2. Three more elevated roads
3. have been propose
4. to unclog the traffic in Delhi
- 5.

Answer : have been propose

• Question No. 96

Select the most appropriate word to fill in the blank.

We have little choice early in life, but as we grow older choices \_\_\_\_\_.

**Options :**

1. Afloat
2. Aggravate
3. Abound
4. Adrift
- 5.

Answer : Abound

- Question No. 97

Select the wrongly spelt word.

**Options :**

1. Eagel
2. Early
3. Eerie
4. Earn
- 5.

Answer : Eagel

- Question No. 98

Given below are four jumbled sentences. Out of the given options pick the one that gives their correct order.

A. Later, they set up their own art school and gallery in the prison. B. The prisoners wanted to display their art work inside the prison. C. They took the help of volunteers from the School of Art. D. Prisoners who were interested in visual arts and painting could study there.

**Options :**

1. BCAD
2. CBAD
3. BDAC
4. DCAB
- 5.

Answer : BCAD

- Question No. 99

Select the most appropriate antonym of the given word.

MINISCULE

**Options :**

1. Meager
2. Small
3. Gigantic
4. Dwarf
- 5.

Answer : Gigantic

• Question No. 100

Select the most appropriate option to substitute the underlined segment in the given sentence. If there is no need to substitute it, select No improvement.

Nowadays rent for a two-room house can run as high to Rs. 40,000/ in Mumbai.

**Options :**

1. as high as
2. so high so
3. so high to
4. No improvement
- 5.

Answer : as high as

[Attempt Mock Test Now](#)

All ixamBee Mock Test are FREE @ [www.ixamBee.com](http://www.ixamBee.com)