

Direction:

Study the following information to answer the given questions.

Eight friends A, B, C, D, E, F, G and H were living in the same building on different floors. All their floors are to be considered from the base floor i.e. 1. Each of them likes different colours – Pink, Green, Yellow, Blue, Brown, White, Black and Orange. There are maximum 40 floors in the building.

A lives on floor 30th and likes pink color. G lives on the 4 floors above A and he does not like green or orange colour. The floor difference between B and F who likes yellow colour is 2 floors and B lives on floor above F. E lives on 28th floor and likes blue colour. Person whose floor is a prime number likes green colour. H lives on a floor which is multiple of 11 and his floor is the lowest among all the 8 friends and does not like green or white colour and he is living on 11 floors below the floor of C's, who likes brown colour. The one who lives on 16th floor likes white color. Floor D is not less than G's floor and he is living on 26th floor above H, whose floor is not less than 5 floors.

- Question No. 1

Person D, likes which colour?

Options :

1. Black
2. White
3. Green
4. Yellow
5. None of these

Answer : Green

Direction:

Study the following information to answer the given questions.

Eight friends A, B, C, D, E, F, G and H were living in the same building on different floors. All their floors are to be considered from the base floor i.e. 1. Each of them likes different colours – Pink, Green, Yellow, Blue, Brown, White, Black and Orange. There are maximum 40 floors in the building.

A lives on floor 30th and likes pink color. G lives on the 4 floors above A and he does not like green or orange colour. The floor difference between B and F who likes yellow colour is 2 floors and B lives on floor above F. E lives on 28th floor and likes blue colour. Person whose floor is a prime number likes green colour. H lives on a floor which is

multiple of 11 and his floor is the lowest among all the 8 friends and does not like green or white colour and he is living on 11 floors below the floor of C's, who likes brown colour. The one who lives on 16th floor likes white color. Floor D is not less than G's floor and he is living on 26th floor above H, whose floor is not less than 5 floors.

• Question No. 2

How many floors difference is there in between the floors of C and D?

Options :

1. 10
2. 15
3. 22
4. Cannot be determined
5. None of these

Answer : 15

Direction:

Study the following information to answer the given questions.

Eight friends A, B, C, D, E, F, G and H were living in the same building on different floors. All their floors are to be considered from the base floor i.e. 1. Each of them likes different colours – Pink, Green, Yellow, Blue, Brown, White, Black and Orange. There are maximum 40 floors in the building.

A lives on floor 30th and likes pink color. G lives on the 4 floors above A and he does not like green or orange colour. The floor difference between B and F who likes yellow colour is 2 floors and B lives on floor above F. E lives on 28th floor and likes blue colour. Person whose floor is a prime number likes green colour. H lives on a floor which is multiple of 11 and his floor is the lowest among all the 8 friends and does not like green or white colour and he is living on 11 floors below the floor of C's, who likes brown colour. The one who lives on 16th floor likes white color. Floor D is not less than G's floor and he is living on 26th floor above H, whose floor is not less than 5 floors.

• Question No. 3

Find the odd one out among the following options?

Options :

1. G

2. E
3. A
4. B
5. H

Answer : H

Direction:

Study the following information to answer the given questions.

Eight friends A, B, C, D, E, F, G and H were living in the same building on different floors. All their floors are to be considered from the base floor i.e. 1. Each of them likes different colours – Pink, Green, Yellow, Blue, Brown, White, Black and Orange. There are maximum 40 floors in the building.

A lives on floor 30th and likes pink color. G lives on the 4 floors above A and he does not like green or orange colour. The floor difference between B and F who likes yellow colour is 2 floors and B lives on floor above F. E lives on 28th floor and likes blue colour. Person whose floor is a prime number likes green colour. H lives on a floor which is multiple of 11 and his floor is the lowest among all the 8 friends and does not like green or white colour and he is living on 11 floors below the floor of C's, who likes brown colour. The one who lives on 16th floor likes white color. Floor D is not less than G's floor and he is living on 26th floor above H, whose floor is not less than 5 floors.

- Question No. 4

Which statement is not correct according to the given data?

Options :

1. G likes Black colour
2. There is a difference of 6 floors among B and C
3. B lives on 14th floor
4. H likes orange and lives on 11th floor
5. None of these

Answer : B lives on 14th floor

Direction:

Study the following information to answer the given questions.

Eight friends A, B, C, D, E, F, G and H were living in the same building on different floors. All their floors are to be considered from the base floor i.e. 1. Each of them likes different colours – Pink, Green, Yellow, Blue, Brown, White, Black and Orange. There are maximum 40 floors in the building.

A lives on floor 30th and likes pink color. G lives on the 4 floors above A and he does not like green or orange colour. The floor difference between B and F who likes yellow colour is 2 floors and B lives on floor above F. E lives on 28th floor and likes blue colour. Person whose floor is a prime number likes green colour. H lives on a floor which is multiple of 11 and his floor is the lowest among all the 8 friends and does not like green or white colour and he is living on 11 floors below the floor of C's, who likes brown colour. The one who lives on 16th floor likes white color. Floor D is not less than G's floor and he is living on 26th floor above H, whose floor is not less than 5 floors.

- Question No. 5

Who is living on the 17 floors below E?

Options :

1. G
2. E
3. A
4. H
5. Cannot be determined

Answer : H

Direction:

Study the following information and answer the given questions:

- Question No. 6

How many gems are there in box which is at immediately above box B?

Options :

1. 16
2. 14
3. 9
4. 11
5. None of these

Answer : 11

Direction:

Study the following information and answer the given questions:

- Question No. 7

How many total number of gems does L and M have?

Options :

1. 26
2. 39
3. 22
4. 20
5. 30

Answer : 22

Direction:

Study the following information and answer the given questions:

- Question No. 8

Box C contain how many gems?

Options :

1. 16
2. 9
3. 14
4. 13
5. None of these

Answer : 13

Direction:

Study the following information and answer the given questions:

- Question No. 9

If D is related to M, C is related to L, in the same way K is related to?

Options :

1. M
2. F
3. B
4. Cannot be determined
5. None of these

Answer : B

Direction:

Study the following information and answer the given questions:

- Question No. 10

Find the odd one out among the following?

Options :

1. Box C
2. Box E
3. Box K
4. Box D
5. Box M

Answer : Box M

Direction:

Study the following information carefully and answer the question:

In the question below phrase is given, then some coding decoding is done in each step I, step II, step III and in the last step the final answer is given. You have to consider all the steps in mind and find out the answer of the following phrase.

Phrase	Step I	Step II	Step III
1. Rahul made very quickly	Lahur eadm yerv yuicklq	Lr4 ad5 er5 yq6	Kq@ xp@
2. Practice make man perfect	Eracticp eakm nam terfecp	Ct9 ak5 nm2 tp6	Bs#
3. Your right your way	Rouy tighr rouy yaw	Ou5 tr4 ou5 yw2	Pv#

Phrases:

1. What are your goals
2. Beautiful things are precious
3. Because Soni made herself

• Question No. 11

What is the step IV of the phrase "What are your goals"?

Options :

1. kf@ mj#
2. pt# fr@
3. fr@ bv#
4. bj # cj @
5. None of these

Answer : fr@ bv#

Direction:

Study the following information carefully and answer the question:

In the question below phrase is given, then some coding decoding is done in each step I, step II, step III and in the last step the final answer is given. You have to consider all the steps in mind and find out the answer of the following phrase.

Phrase	Step I	Step II	Step III
1. Rahul made very quickly	Lahur eadm yerv yuicklq	Lr4 ad5 er5 yq6	Kq@ xp@
2. Practice make man perfect	Eracticp eakm nam terfecp	Ct9 ak5 nm2 tp6	Bs#
3. Your right your way	Rouy tighr rouy yaw	Ou5 tr4 ou5 yw2	Pv#

Phrases:

1. What are your goals
2. Beautiful things are precious
3. Because Soni made herself

• Question No. 12

What will the step II of the given phrase "Because Soni made herself"?

Options :

1. eb6 on5 ad5 fh6
2. lb8 ea2 ci9 in7
3. ka5 gb6 nj7 mt8
4. ou6 ay5 wn5 pd2
5. None of these

Answer : eb6 on5 ad5 fh6

Direction:

Study the following information carefully and answer the question:

In the question below phrase is given, then some coding decoding is done in each step I, step II, step III and in the last step the final answer is given. You have to consider all the steps in mind and find out the answer of the following phrase.

Phrase	Step I	Step II	Step III
1. Rahul made very quickly	Lahur eadm yerv yuicklq	Lr4 ad5 er5 yq6	Kq@ xp@
2. Practice make man perfect	Eracticp eakm nam terfecp	Ct9 ak5 nm2 tp6	Bs#
3. Your right your way	Rouy tighr rouy yaw	Ou5 tr4 ou5 yw2	Pv#

Phrases:

1. What are your goals
2. Beautiful things are precious
3. Because Soni made herself

• Question No. 13

Which step will be this “gb# fb@ pv# rf@” of the given phrase “What are your goals”?

Options :

1. Step I
2. Step II
3. Step IV
4. Step III
5. None of these

Answer : Step III

Direction:

Study the following information carefully and answer the question:

In the question below phrase is given, then some coding decoding is done in each step I, step II, step III and in the last step the final answer is given. You have to consider all the steps in mind and find out the answer of the following phrase.

Phrase	Step I	Step II	Step
1. Rahul made very quickly	Lahur eadm yerv yuicklq	Lr4 ad5 er5 yq6	Kq@ xp@
2. Practice make man perfect	Eracticp eakm nam terfecp	Ct9 ak5 nm2 tp6	Bs#
3. Your right your way	Rouy tighr rouy yaw	Ou5 tr4 ou5 yw2	Pv#

Phrases:

1. What are your goals
2. Beautiful things are precious
3. Because Soni made herself

- Question No. 14

In the given phrase “**Beautiful things are precious**”, the code “in7” is obtained from which of the following word?

Options :

1. beautiful
2. things
3. are
4. precious
5. None of these

Answer : things

Direction:

Study the following questions below which are based on the five numbers given below:

785 243 634 397 572

• Question No. 15

After arranging all the digits in increasing order (within the number) what is the sum of third digit of the highest number and first digit of the lowest number so formed?

Options :

- 1. 12
- 2. 10
- 3. 8
- 4. 9
- 5. 7

Answer : 10

Direction:

Study the following questions below which are based on the five numbers given below:

785 243 634 397 572

• Question No. 16

If 1 is added to each even digit and 1 is subtracted from each odd digit and then how many numbers so formed will be fully divisible by 4?

Options :

- 1. 2
- 2. 1
- 3. 5
- 4. 4
- 5. 3

Answer : 1

Direction:

Each of the questions below consists of a question and three statements numbered I, II and III. You have to decide whether the data provided in the statements are Sufficient to answer the question. Read all the statements and give answer.

- Question No. 17

Who among A, B, C, D, E and F is the heaviest?

Statement I. F is heavier than E and D. C is heavier than only two of them.

Statement II. F is lighter than A.

Statement III. E is lighter than both D and B but B is heavier than C but lighter than both F and A.

Options :

1. Only I is sufficient to answer the question
2. Only II and III is sufficient to answer the question
3. Either I or II are sufficient to answer the question
4. All I, II and III are sufficient to answer the question
5. Only I and III is sufficient to answer the question

Answer : All I, II and III are sufficient to answer the question

Direction:

Each of the questions below consists of a question and three statements numbered I, II and III. You have to decide whether the data provided in the statements are Sufficient to answer the question. Read all the statements and give answer.

- Question No. 18

In the following question, a given question is followed by information in three statements. You have to decide the data in which statement(s) is sufficient to answer the question and mark your answer accordingly.

In a class of 35 students, how many students have got ranks between Q and R?

Statement I: P got 2nd rank from the top and Q got 5th rank from the bottom. Only 3 people have got ranks between R and S.

Statement II: The rank of S is 12th from the top.

Statement III: P is second from the top in the class. 2 people have ranks between P and R. Q has got 5th rank from the bottom.

Options :

1. Only I is sufficient to answer the question
2. Only II and III is sufficient to answer the question
3. Any of the two statement is sufficient to answer the question
4. Only III is sufficient to answer the question
5. All are needed to answer the question

Answer : Only III is sufficient to answer the question

Direction:

In the following questions, the symbols #, &, @ and \$ are used with the following meanings as illustrated below. Study the following information and answer the given questions:

P # Q - P is in the south direction of Q at distance of either 2 or 5 m.

P @ Q - Q is in the north direction of P at distance of either 6 m or 3 m.

P & Q - Q is in the east direction of P at distance of either 3 or 5 m.

P \$ Q - P is in the west direction of Q at distance of either 7 m or 2 m.

P # & Q - Q is in the southeast direction of P.

P @ & Q - P is in the northeast direction of Q.

- Question No. 19

If I # M \$ N # & P are related to each other then what is the probable shortest distance between I and N?

Options :

1. $\sqrt{59}$ m
2. 5 m
3. $2\sqrt{2}$ m
4. $\sqrt{76}$ m
5. None of these

Answer : $2\sqrt{2}$ m

Direction:

In the following questions, the symbols #, &, @ and \$ are used with the following meanings as illustrated below. Study the following information and answer the given questions:

P # Q - P is in the south direction of Q at distance of either 2 or 5 m.

P @ Q - P is in the north direction of Q at distance of either 6 m or 3 m.

P & Q - Q is in the east direction of P at distance of either 3 or 5 m.

P \$ Q - P is in the west direction of Q at distance of either 7 m or 2 m.

P # & Q - Q is in the southeast direction of P.

P @ & Q - P is in the northeast direction of Q.

• Question No. 20

If S @ & T \$ G \$ M, then what is the shortest distance between T and M (if TGM form a straight line and length of TG and GM are different)?

Options :

1. 9 m

2. 14 m

3. 4 m

4. 10 m

5. None of these

Answer : 9 m

Direction:

Given below is the family arrangement provided in the form of symbols. You have to make the family setup on the basis of the given data.

F \$ G - F is parent of G.

F & G - F and G are siblings of same gender.

F % G - F and G are siblings of different gender.

For Male - '#'

For Female – '@'

Family arrangement on the basis-

R @ & K, K \$ @ L, Q \$ # S, Q % M, L @ \$ S.

- Question No. 21

How is M related to S?

Options :

1. Sister
2. Mother
3. Uncle
4. Aunt
5. None of these

Answer : Aunt

Direction:

Given below is the family arrangement provided in the form of symbols. You have to make the family setup on the basis of the given data.

F \$ G – F is parent of G.

F & G – F and G are siblings of same gender.

F % G – F and G are siblings of different gender.

For Male – '#'

For Female – '@'

Family arrangement on the basis-

R @ & K, K \$ @ L, Q \$ # S, Q % M, L @ \$ S.

- Question No. 22

How many sibling/s does person 'Q' has?

Options :

1. One
2. None
3. Two
4. Cannot be determined
5. None of these

Answer : One

Direction:

Directions: In the following questions, only one Conclusion is given and five statements are given as a), b), c), d) and e. From this you have to take the statements to be true even if they seem to be at variance with commonly known facts and then decide which of the given statement logically follows:

- Question No. 23

Conclusion:

- I. Some hospitals are flats is a possibility.
- II. Some schools are not colleges.

Statements:

Options :

1. All flats are apartments. All apartments are schools. No apartment is college. No hospital is school.
2. Some flats are apartments. All apartments are schools. Some apartment are college. No hospital is school.
3. All flats are apartments. All apartments are schools. No apartment is college. All hospitals are schools.
4. All flats are apartments. All apartments are schools. No hospital is a flat. Some hospitals are colleges.
5. Some flats are apartments. No apartments are schools. No apartment is college. Some hospitals are colleges.

Answer : All flats are apartments. All apartments are schools. No apartment is college. All hospitals are schools.

Direction:

Directions: In the following questions, only one Conclusion is given and five statements are given as a), b), c), d) and e. From this you have to take the statements to be true even if they seem to be at variance with commonly known facts and then decide which of the given statement logically follows:

- Question No. 24

Conclusion:

- I. All S's are being Q's is a possibility
- II. Some R's are T

Statements:

Options :

- 1. Some P's are Q's. Some Q's are R's. No R is S. No S is T.
- 2. All P's are Q's. All Q's are R's. Some R's are S's. All S's are T's.
- 3. Some P's are Q's. All Q's are R's. Some R's are S's. All S's are T's.
- 4. All P's are Q's. Some Q's are R's. No R is S. All S's are T's.
- 5. All P's are Q's. All Q's are R's. No R is S. All S's are T's.

Answer : All P's are Q's. All Q's are R's. Some R's are S's. All S's are T's.

Direction:

In the following questions, the symbols @, #, \$, & and % are used with the following meaning as illustrated below. In each of the following questions four statements followed by three conclusions marked I, II and III are given. Assuming the statements to be true, find which of the follow (s) the given statements.

'P @ Q' means 'P is neither greater than nor equal to Q'

'P # Q' means 'P is not smaller than Q'

'P \$ Q' means 'P is neither smaller than nor greater than Q'

'P & Q' means 'P is not greater than Q'

'P % Q' means 'P is neither smaller than nor equal to Q'

- Question No. 25

Statement: A% B, B # C, C @ D, D % E

Conclusion:

- I. A % C
- II. D @ A

III. B # E

Options :

1. Only conclusion II follows
2. Neither I nor II follows
3. Only conclusion I follows
4. Either I or II follows
5. All follow

Answer : Only conclusion I follows

Direction:

In the following questions, the symbols @, #, \$, & and % are used with the following meaning as illustrated below. In each of the following questions four statements followed by three conclusions marked I, II and III are given. Assuming the statements to be true, find which of the follow (s) the given statements.

'P @ Q' means 'P is neither greater than nor equal to Q'

'P # Q' means 'P is not smaller than Q'

'P \$ Q' means 'P is neither smaller than nor greater than Q'

'P & Q' means 'P is not greater than Q'

'P % Q' means 'P is neither smaller than nor equal to Q'

- Question No. 26

Statement: X @ Z, Z # R, R \$ S, S & T, T % U

Conclusion:

- I. X # S
- II. S % Z
- III. Z \$ U

Options :

1. Only conclusion III follows

2. Only conclusion I follows
3. Either II or III follows
4. None follows
5. All follows

Answer : None follows

Direction:

A statement is given followed by three inferences numbered I, II and III. Consider the statement to be true even if it is at variance with commonly known facts. You have to decide which of the inference, if any, follow from the given statement.

- Question No. 27

Statement:

A UK court issued an arrest warrant against fugitive diamond jeweller Nirav Modi, taking cognizance of the sanction granted by the UK home secretary on India's request to extradite the jeweller. According to procedure, Modi will be formally arrested and is likely to be enlarged on bail. The London Police is likely to arrest him and produce him before a London Court, said sources privy to the development.

Which of the following can be logically inferred from the above information?

Options :

1. The UK home office told the Indian authorities that India's request to extradite Modi had been certified. The Indian agencies are now awaiting Modi's formal arrest.
2. None can be arrest
3. Modi was spotted in London's west End earlier this month by Britain the Telegraph newspaper, which reported that he's running a new diamond business in the city. India is also pursuing extradition proceeding's against Modi's uncle and co accused Mehul Choksi, currently in Antigua.
4. The Indian agencies have told the British authorities that Modi had travelled outside the UK on despite his passport having being revoked. This was despite repeated reminders sent to the British Authorities.
5. All can be inferred.

Answer : The UK home office told the Indian authorities that India's request to extradite Modi had been certified. The Indian agencies are now awaiting Modi's formal arrest.

Direction:

A statement is given followed by three inferences numbered I, II and III. Consider the statement to be true even if it is at variance with commonly known facts. You have to decide which of the inference, if any, follow from the given statement.

- Question No. 28

Statement:

Andhra Pradesh is the only state that has initiated work to include environmental guidelines in building by laws so that every construction project meets environmental standards.

Which of the following can be logically inferred from the above information?

Options :

1. No construction projects in other projects in other states meet the environmental standards.
2. Andhra Pradesh was forced to take this step because of increasing pollution due to illegal constructions.
3. Environmental guidelines are not followed in the majority of cases when building houses.
4. All can be inferred.
5. None of these

Answer : Environmental guidelines are not followed in the majority of cases when building houses.

Direction:

In each question below is given a statement followed by two courses of action numbered I and II. You have to assume everything in the statement to be true and on the basis of the information given in the statement, decide which of the suggested courses of action logically follow(s) for pursuing.

- Question No. 29

Statement:

Mutual funds have approached the Securitisation and Exchange Board of India to allow them to alter the terms of Essel Group debenture trust deeds to give the promoters' time to bring in a strategic investor instead of having to offload pledged shares as there is a drop in the security cover.

Course of Action:

- I. Some fund houses may not have to alter their debenture trust deeds, they can choose not to call a default.
- II. The capital market regulator will seek to determine whether the mutual funds are acting in the best interests of the investors while deciding on the matter.

Options :

1. Only I follows
2. Neither I nor II follows
3. Either I or II follows
4. Only II follows
5. Both I and II follows

Answer : Only I follows

Direction:

In each question below is given a statement followed by two statements numbered I and II. There may be cause and effect relationship between the two statements. These two statements may be effect of the same cause or independent causes without having any relationship. Read both the statements in each question and mark your answer.

- Question No. 30

Statement:

I. An Ethiopian airlines flight crashed shortly after take-off from the capital on 10 march killing all 179 people on board. There were no immediate details on what caused the crash of the Boeing A 297 – 6 Maxima plane, which was new and had been delivered to the airlines in December.

II. The airlines statement said that 135 passengers and eight crew members were on the plane crashed six minutes after departing on its way to Japan.

Options :

1. Statement II is the cause and statement I is its effect
2. Statement I is the cause and statement II is its effect
3. Both the statements I and II are independent causes.
4. Both statement I and II are the effects of some independent causes.
5. Both the statement I and II are the effect of some common cause.

Answer : Statement I is the cause and statement II is its effect

Direction:

In each of the question given below is a statement followed by the assumptions numbered I and II. An assumption is something supposed or taken for granted. You have to consider the statement and the following assumption. And decide which of the assumptions is implicit in the statement.

Give answer

- Question No. 31

Statement: Mr. X started at 9:00am from his residence to attend a meeting scheduled to be held at 11:00 am and instructed his assistant to meet him at the venue of the meeting and hand over the relevant documents.

Assumption:

- Mr. X may arrive at the meeting place before 11:00am.
- Mr. X's assistant may be able to arrive at the venue before commencement of the meeting.

Options :

- If only assumption I is implicit
- If only assumption II is implicit
- If either assumption I or II is implicit
- If neither assumption I nor II is implicit
- If both assumption I and II is implicit

Answer : If both assumption I and II is implicit

Direction:

Seven boxes are arranged with different number of books are arranged in three groups A, group B and Group C. Each box is coded after following certain rule step by step as given below:

After boxes are coded each box are rearranged in an ascending order of their box code. First three boxes are from group A, next two boxes are group B and remaining two from group C.

11

Number of Books	Step I	Step II	Step III	Step IV
381	127	254	40	16
423	141	282	32	25
324	81	243	24	36
484	121	363	54	81
236	59	177	49	169
267	89	178	56	121
864	216	648	192	144

Find out the step by step box group for the boxes having different number of books.

597 879 644 939 152 357 624

- Question No. 32

What will be the book code for box C, which has 624 number of books?

Options :

1. 144
2. 205
3. 128
4. 73
5. 81

Answer : 128

Direction:

Seven boxes are arranged with different number of books are arranged in three groups A, group B and Group C. Each box is coded after following certain rule step by step as given below:

After boxes are coded each box are rearranged in an ascending order of their box code. First three boxes are from group A, next two boxes are group B and remaining two from group C.

Number of Books	Step I	Step II	Step III	Step IV
381	127	254	40	16
423	141	282	32	25
324	81	243	24	36
484	121	363	54	81
236	59	177	49	169
267	89	178	56	121
864	216	648	192	144

Find out the step by step box group for the boxes having different number of books.

597 879 644 939 152 357 624

- Question No. 33

What will be the step III of the number of books which are greater than 800 in box A?

Options :

1. 216
2. 240
3. 586
4. 144
5. 96

Answer : 240

Direction:

Seven boxes are arranged with different number of books are arranged in three groups A, group B and Group C. Each box is coded after following certain rule step by step as given below:

After boxes are coded each box are rearranged in an ascending order of their box code. First three boxes are from group A, next two boxes are group B and remaining two from group C.

Q1

Number of Books	Step I	Step II	Step III	Step IV
381	127	254	40	16
423	141	282	32	25
324	81	243	24	36
484	121	363	54	81
236	59	177	49	169
267	89	178	56	121
864	216	648	192	144

Find out the step by step box group for the boxes having different number of books.

597 879 644 939 152 357 624

- Question No. 34

The number of books 597 of group A has the same book code with which number of books of other groups among the following?

Options :

- 1. 597
- 2. 644
- 3. 939
- 4. 148
- 5. 893

Answer : 939

Direction:

Seven boxes are arranged with different number of books are arranged in three groups A, group B and Group C. Each box is coded after following certain rule step by step as given below:

After boxes are coded each box are rearranged in an ascending order of their box code. First three boxes are from group A, next two boxes are group B and remaining two from group C.

□

Number of Books	Step I	Step II	Step III	Step IV
381	127	254	40	16
423	141	282	32	25
324	81	243	24	36
484	121	363	54	81
236	59	177	49	169
267	89	178	56	121
864	216	648	192	144

Find out the step by step box group for the boxes having different number of books.

597 879 644 939 152 357 624

- Question No. 35

The sum of book code of group A books are what in total?

Options :

1. 296
2. 500
3. 693
4. 432
5. None of these

Answer : 296

Direction:

Seven boxes are arranged with different number of books are arranged in three groups A, group B and Group C. Each box is coded after following certain rule step by step as given below:

After boxes are coded each box are rearranged in an ascending order of their box code. First three boxes are from group A, next two boxes are group B and remaining two from group C.

□

Number of Books	Step I	Step II	Step III	Step IV
381	127	254	40	16
423	141	282	32	25
324	81	243	24	36
484	121	363	54	81
236	59	177	49	169
267	89	178	56	121
864	216	648	192	144

Find out the step by step box group for the boxes having different number of books.

597 879 644 939 152 357 624

- Question No. 36

What is step II of the number of books 939 of group B?

Options :

1. 483
2. 626
3. 444
4. 468
5. None of these

Answer : 626

Direction:

Study the following information carefully and answer the below questions.

In family of nine members each member works in different bank viz. ICICI, PNB, HDFC, BOB, CBI, SBI, BOI, BOM and RBI. Each person also likes Different fruits viz. Cherry, Orange, Papaya, Mango, Grapes, Litchi, Apple, Banana and Guava. Each person was born in different month from January to December of a same year. All the information is not necessary in same order.

There is not more than one month gap between births of two people. Only three married couples are there in the family.

One person was born between the one who likes Cherry and M, who works in ICICI. The one works in RBI was born in February and is sister of the one who works in PNB. Two people were born between E and the one who works in BOM, who was born in adjacent month of the one who likes Papaya. P who works in SBI was born in one of the month having 30 days and was born at a gap of two month from his wife. The one who likes Guava is sister of the one who likes Apple. D is unmarried member of the family and is sister-in-law of the one who likes Papaya. The one who works in CBI also likes Cherry. Q is the only daughter of the one who likes Orange and is married to the one who works in SBI. H was born at a gap of two month from the one who works in BOB. P's wife likes Banana but was not born on adjacent month of the one who works in RBI. The one who works in HDFC is mother of the one who works in BOM. K is married to P's father-in-law and neither likes Grapes nor works in PNB. The one who works in HDFC was born in May. The one who likes Cherry is only son of H, who likes Guava. U's father works in ICICI and was born in November. The one who works in BOB was born in adjacent month of the one who works in RBI. One person was born between the one who works in PNB and U. M is father of the one who likes Cherry. K is sister-in-law of the one who likes Litchi. U's mother works in PNB. One person was born between the one who likes Grapes and his mother. L is only child of the one who likes Litchi and is grandson of the one who was born in November. The one who likes Papaya is married to H and is brother-in-law of the one who likes Apple. No person was born between the one who works in BOI and D. Two people were born between K and the one who works in BOI, who doesn't like Guava. L was neither born after October nor works in BOB. The one who works in RBI likes neither Litchi nor Orange. Three people were born between L's mother and the one who likes Mango. U likes Litchi.

- Question No. 37

Who among the following works in bank CBI?

Options :

1. H
2. K
3. E
4. L
5. None of these

Answer : E

Direction:

Study the following information carefully and answer the below questions.

In family of nine members each member works in different bank viz. ICICI, PNB, HDFC, BOB, CBI, SBI, BOI, BOM and RBI. Each person also likes Different fruits viz. Cherry, Orange, Papaya, Mango, Grapes, Litchi, Apple, Banana and Guava. Each person was born in different month from January to December of a same year. All the information is not necessary in same order.

There is not more than one month gap between births of two people. Only three married couples are there in the family.

One person was born between the one who likes Cherry and M, who works in ICICI. The one works in RBI was born in February and is sister of the one who works in PNB. Two people were born between E and the one who works in BOM, who was born in adjacent month of the one who likes Papaya. P who works in SBI was born in one of the month having 30 days and was born at a gap of two month from his wife. The one who likes Guava is sister of the one who likes Apple. D is unmarried member of the family and is sister-in-law of the one who likes Papaya. The one who works in CBI also likes Cherry. Q is the only daughter of the one who likes Orange and is married to the one who works in SBI. H was born at a gap of two month from the one who works in BOB. P's wife likes Banana but was not born on adjacent month of the one who works in RBI. The one who works in HDFC is mother of the one who works in BOM. K is married to P's father-in-law and neither likes Grapes nor works in PNB. The one who works in HDFC was born in May. The one who likes Cherry is only son of H, who likes Guava. U's father works in ICICI and was born in November. The one who works in BOB was born in adjacent month of the one who works in RBI. One person was born between the one who works in PNB and U. M is father of the one who likes Cherry. K is sister-in-law of the one who likes Litchi. U's mother works in PNB. One person was born between the one who likes Grapes and his

mother. L is only child of the one who likes Litchi and is grandson of the one who was born in November. The one who likes Papaya is married to H and is brother-in-law of the one who likes Apple. No person was born between the one who works in BOI and D. Two people were born between K and the one who works in BOI, who doesn't like Guava. L was neither born after October nor works in BOB. The one who works in RBI likes neither Litchi nor Orange. Three people were born between L's mother and the one who likes Mango. U likes Litchi.

• Question No. 38

Which among the following statement is correct?

Options :

1. Q – BOM – Grapes
2. P – PNB- Litchi
3. M- RBI – Papaya
4. D – RBI- Apple
5. All are correct

Answer : D – RBI- Apple

Direction:

Study the following information carefully and answer the below questions.

In family of nine members each member works in different bank viz. ICICI, PNB, HDFC, BOB, CBI, SBI, BOI, BOM and RBI. Each person also likes Different fruits viz. Cherry, Orange, Papaya, Mango, Grapes, Litchi, Apple, Banana and Guava. Each person was born in different month from January to December of a same year. All the information is not necessary in same order.

There is not more than one month gap between births of two people. Only three married couples are there in the family.

One person was born between the one who likes Cherry and M, who works in ICICI. The one works in RBI was born in February and is sister of the one who works in PNB. Two people were born between E and the one who works in BOM, who was born in adjacent month of the one who likes Papaya. P who works in SBI was born in one of the month having 30 days and was born at a gap of two month from his wife. The one who likes Guava is sister of the one who likes Apple. D is unmarried member of the family and is sister-in-law of the one who likes Papaya. The one who works in CBI also likes Cherry. Q is the only daughter of the one who likes Orange and is married to the one who works in SBI. H was born at a gap of two month from the one who works in BOB. P's wife likes Banana but was

not born on adjacent month of the one who works in RBI. The one who works in HDFC is mother of the one who works in BOM. K is married to P's father-in-law and neither likes Grapes nor works in PNB. The one who works in HDFC was born in May. The one who likes Cherry is only son of H, who likes Guava. U's father works in ICICI and was born in November. The one who works in BOB was born in adjacent month of the one who works in RBI. One person was born between the one who works in PNB and U. M is father of the one who likes Cherry. K is sister-in-law of the one who likes Litchi. U's mother works in PNB. One person was born between the one who likes Grapes and his mother. L is only child of the one who likes Litchi and is grandson of the one who was born in November. The one who likes Papaya is married to H and is brother-in-law of the one who likes Apple. No person was born between the one who works in BOI and D. Two people were born between K and the one who works in BOI, who doesn't like Guava. L was neither born after October nor works in BOB. The one who works in RBI likes neither Litchi nor Orange. Three people were born between L's mother and the one who likes Mango. U likes Litchi.

- Question No. 39

How is H related to L?

Options :

1. Mother
2. Aunt
3. Grandmother
4. Cannot be determined
5. None of these

Answer : Grandmother

Direction:

Study the following information carefully and answer the below questions.

In family of nine members each member works in different bank viz. ICICI, PNB, HDFC, BOB, CBI, SBI, BOI, BOM and RBI. Each person also likes Different fruits viz. Cherry, Orange, Papaya, Mango, Grapes, Litchi, Apple, Banana and Guava. Each person was born in different month from January to December of a same year. All the information is not necessary in same order.

There is not more than one month gap between births of two people. Only three married couples are there in the family.

One person was born between the one who likes Cherry and M, who works in ICICI. The one who works in RBI was born in February and is sister of the one who works in PNB. Two people were born between E and the one who works in BOM, who was born in adjacent month of the one who likes Papaya. P who works in SBI was born in one of the month having 30 days and was born at a gap of two month from his wife. The one who likes Guava is sister of the one who likes Apple. D is unmarried member of the family and is sister-in-law of the one who likes Papaya. The one who works in CBI also likes Cherry. Q is the only daughter of the one who likes Orange and is married to the one who works in SBI. H was born at a gap of two month from the one who works in BOB. P's wife likes Banana but was not born on adjacent month of the one who works in RBI. The one who works in HDFC is mother of the one who works in BOM. K is married to P's father-in-law and neither likes Grapes nor works in PNB. The one who works in HDFC was born in May. The one who likes Cherry is only son of H, who likes Guava. U's father works in ICICI and was born in November. The one who works in BOB was born in adjacent month of the one who works in RBI. One person was born between the one who works in PNB and U. M is father of the one who likes Cherry. K is sister-in-law of the one who likes Litchi. U's mother works in PNB. One person was born between the one who likes Grapes and his mother. L is only child of the one who likes Litchi and is grandson of the one who was born in November. The one who likes Papaya is married to H and is brother-in-law of the one who likes Apple. No person was born between the one who works in BOI and D. Two people were born between K and the one who works in BOI, who doesn't like Guava. L was neither born after October nor works in BOB. The one who works in RBI likes neither Litchi nor Orange. Three people were born between L's mother and the one who likes Mango. U likes Litchi.

- Question No. 40

Who is Q's aunt in the family?

Options :

1. H
2. K
3. D
4. U
5. L

Answer : U

Direction:

Study the following information carefully and answer the below questions.

In family of nine members each member works in different bank viz. ICICI, PNB, HDFC, BOB, CBI, SBI, BOI, BOM and RBI. Each person also likes Different fruits viz. Cherry, Orange, Papaya, Mango, Grapes, Litchi, Apple, Banana and Guava. Each person was born in different month from January to December of a same year. All the information is not necessary in same order.

There is not more than one month gap between births of two people. Only three married couples are there in the family.

One person was born between the one who likes Cherry and M, who works in ICICI. The one works in RBI was born in February and is sister of the one who works in PNB. Two people were born between E and the one who works in BOM, who was born in adjacent month of the one who likes Papaya. P who works in SBI was born in one of the month having 30 days and was born at a gap of two month from his wife. The one who likes Guava is sister of the one who likes Apple. D is unmarried member of the family and is sister-in-law of the one who likes Papaya. The one who works in CBI also likes Cherry. Q is the only daughter of the one who likes Orange and is married to the one who works in SBI. H was born at a gap of two month from the one who works in BOB. P's wife likes Banana but was not born on adjacent month of the one who works in RBI. The one who works in HDFC is mother of the one who works in BOM. K is married to P's father-in-law and neither likes Grapes nor works in PNB. The one who works in HDFC was born in May. The one who likes Cherry is only son of H, who likes Guava. U's father works in ICICI and was born in November. The one who works in BOB was born in adjacent month of the one who works in RBI. One person was born between the one who works in PNB and U. M is father of the one who likes Cherry. K is sister-in-law of the one who likes Litchi. U's mother works in PNB. One person was born between the one who likes Grapes and his mother. L is only child of the one who likes Litchi and is grandson of the one who was born in November. The one who likes Papaya is married to H and is brother-in-law of the one who likes Apple. No person was born between the one who works in BOI and D. Two people were born between K and the one who works in BOI, who doesn't like Guava. L was neither born after October nor works in BOB. The one who works in RBI likes neither Litchi nor Orange. Three people were born between L's mother and the one who likes Mango. U likes Litchi.

- Question No. 41

Who born in the month of January?

Options :

1. D
2. L
3. M

4. H

5. P

Answer : L

Direction:

Study the following information carefully and answer the questions given below:

Eight friends are sitting around two concentric circles, Prem, Gopesh, Chander and Danish in the inner circle while Ansh, Vishesh, Ritesh and Tanay in the outer circle. The distance between any two persons in a circle are same and some are facing inwards and some are facing outwards. They have different salaries in thousands viz. 45, 50, 55, 60, 65, 70, 75, 80, but not in the same order.

Prem is facing east direction but is not facing outwards and Tanay whose salary is Rs 10 k less than Prem is sitting at an angle of 135° clockwise to Prem. Ansh is sitting opposite to Tanay and they both are facing same direction. The salary of Gopesh is second lowest and he is sitting to the northeast of Danish. Ritesh and Danish both are facing inwards and there is 45° angle between their positions. The person whose salary is 75k is in the outer circle. Ansh's salary is 10k more than Vishesh. Chander's salary is 65k and he is facing the direction opposite to that of Gopesh direction. The person whose salary is lowest is sitting at an angle of 135° anticlockwise to Gopesh and facing the same direction as Tanay. Tanay's salary is the average of salaries of Prem and Danish. Gopesh is facing in west direction. The person whose salary is 70k is facing outwards.

- Question No. 42

How many persons are sitting between Gopesh and Chander?

Options :

1. One
2. None
3. Two
4. Three
5. None of these

Answer : None

Direction:

Study the following information carefully and answer the questions given below:

Eight friends are sitting around two concentric circles, Prem, Gopesh, Chander and Danish in the inner circle while Ansh, Vishesh, Ritesh and Tanay in the outer circle. The distance between any two persons in a circle are same and some are facing inwards and some are facing outwards. They have different salaries in thousands viz. 45, 50, 55, 60, 65, 70, 75, 80, but not in the same order.

Prem is facing east direction but is not facing outwards and Tanay whose salary is Rs 10 k less than Prem is sitting at an angle of 135° clockwise to Prem. Ansh is sitting opposite to Tanay and they both are facing same direction. The salary of Gopesh is second lowest and he is sitting to the northeast of Danish. Ritesh and Danish both are facing inwards and there is 45° angle between their positions. The person whose salary is 75k is in the outer circle. Ansh's salary is 10k more than Vishesh. Chander's salary is 65k and he is facing the direction opposite to that of Gopesh direction. The person whose salary is lowest is sitting at an angle of 135° anticlockwise to Gopesh and facing the same direction as Tanay. Tanay's salary is the average of salaries of Prem and Danish. Gopesh is facing in west direction. The person whose salary is 70k is facing outwards.

- Question No. 43

What is the salary of Tanay?

Options :

1. 65k
2. 45k
3. 70k
4. 60k
5. None of these

Answer : 70k

Direction:

Study the following information carefully and answer the questions given below:

Eight friends are sitting around two concentric circles, Prem, Gopesh, Chander and Danish in the inner circle while Ansh, Vishesh, Ritesh and Tanay in the outer circle. The distance between any two persons in a circle are same and some are facing inwards and some are facing outwards. They have different salaries in thousands viz. 45, 50, 55, 60, 65, 70, 75, 80, but not in the same order.

Prem is facing east direction but is not facing outwards and Tanay whose salary is Rs 10 k less than Prem is sitting at an angle of 135° clockwise to Prem. Ansh is sitting opposite to Tanay and they both are facing same direction. The salary of Gopesh is second lowest and he is sitting to the northeast of Danish. Ritesh and Danish both are facing inwards and there is 45° angle between their positions. The person whose salary is 75k is in the outer circle. Ansh's salary is 10k more than Vishesh. Chander's salary is 65k and he is facing the direction opposite to that of Gopesh direction. The person whose salary is lowest is sitting at an angle of 135° anticlockwise to Gopesh and facing the same direction as Tanay. Tanay's salary is the average of salaries of Prem and Danish. Gopesh is facing in west direction. The person whose salary is 70k is facing outwards.

• Question No. 44

What is the position of Ansh with respect to Tanay?

Options :

1. Second to right
2. Immediate left
3. Second to left
4. Either a or c
5. None of these

Answer : Either a or c

Direction:

Study the following information carefully and answer the questions given below:

Eight friends are sitting around two concentric circles, Prem, Gopesh, Chander and Danish in the inner circle while Ansh, Vishesh, Ritesh and Tanay in the outer circle. The distance between any two persons in a circle are same and some are facing inwards and some are facing outwards. They have different salaries in thousands viz. 45, 50, 55, 60, 65, 70, 75, 80, but not in the same order.

Prem is facing east direction but is not facing outwards and Tanay whose salary is Rs 10 k less than Prem is sitting at an angle of 135° clockwise to Prem. Ansh is sitting opposite to Tanay and they both are facing same direction. The salary of Gopesh is second lowest and he is sitting to the northeast of Danish. Ritesh and Danish both are facing inwards and there is 45° angle between their positions. The person whose salary is 75k is in the outer circle. Ansh's salary is 10k more than Vishesh. Chander's salary is 65k and he is facing the direction opposite to that of Gopesh

direction. The person whose salary is lowest is sitting at an angle of 135° anticlockwise to Gopesh and facing the same direction as Tanay. Tanay's salary is the average of salaries of Prem and Danish. Gopesh is facing in west direction. The person whose salary is 70k is facing outwards.

- Question No. 45

What is the average of the salaries of Chander and Ritesh?

Options :

1. 70
2. 60
3. 80
4. 65
5. None of these

Answer : 70

Direction:

Read the following passage carefully and answer the given questions.

A part of the Survey, which is prepared by the finance ministry, highlights the many mistakes in government policy. Most of these mistakes are inherent to the current government's approach. The Survey makes a **(3) compelling** case for a policy approach friendlier to markets. It also points out that long standing laws probably contribute to market failures rather than address them. Laws such as the Essential Commodities Act are an anachronism today. Separately, poorly designed agricultural policies are exacerbating price swings and increasing farmers' risks. Agriculture needs a new deal. The Survey wants to reorient policy to capture the potential offered by global value chains and the shifting of production lines out of China. It also **(4) debunks** myths about the negative impact of free trade agreements on India. Unfortunately, India's recent policies have run counter to what's needed to grab available opportunities. Import substitution and a degree of insularity mark trade policy. They are counterproductive. The Survey's most important takeaway is a set of arguments which call for greater market **(5) orientation** and smarter government intervention. Today's Budget should offer a glimpse into whether the government is contemplating any change of track and could move to a more reformist path.

- Question No. 46

What is the theme of the passage?

Options :

1. The Survey of the finance ministry hints government policy is the reason behind market failure.
2. In order to check the status of the market, the finance ministry prepared a survey focussing on government's negative view towards this direction.
3. The Survey highlighted the negative impacts of Essential Commodities Law over the market.
4. Government needs to reform its policies for boosting the market and the survey is a proof of it.
5. None of these

Answer : Government needs to reform its policies for boosting the market and the survey is a proof of it.

Direction:

Read the following passage carefully and answer the given questions.

A part of the Survey, which is prepared by the finance ministry, highlights the many mistakes in government policy. Most of these mistakes are inherent to the current government's approach. The Survey makes a (3) **compelling** case for a policy approach friendlier to markets. It also points out that long standing laws probably contribute to market failures rather than address them. Laws such as the Essential Commodities Act are an anachronism today. Separately, poorly designed agricultural policies are exacerbating price swings and increasing farmers' risks. Agriculture needs a new deal. The Survey wants to reorient policy to capture the potential offered by global value chains and the shifting of production lines out of China. It also (4) **debunks** myths about the negative impact of free trade agreements on India. Unfortunately, India's recent policies have run counter to what's needed to grab available opportunities. Import substitution and a degree of insularity mark trade policy. They are counterproductive. The Survey's most important takeaway is a set of arguments which call for greater market (5) **orientation** and smarter government intervention. Today's Budget should offer a glimpse into whether the government is contemplating any change of track and could move to a more reformist path.

- Question No. 47

What is the tone of the passage?

Options :

1. Cynical

2. Analytical
3. Condescending
4. Negative
5. Condescending

Answer : Negative

Direction:

Read the following passage carefully and answer the given questions.

A part of the Survey, which is prepared by the finance ministry, highlights the many mistakes in government policy. Most of these mistakes are inherent to the current government's approach. The Survey makes a **(3) compelling** case for a policy approach friendlier to markets. It also points out that long standing laws probably contribute to market failures rather than address them. Laws such as the Essential Commodities Act are an anachronism today. Separately, poorly designed agricultural policies are exacerbating price swings and increasing farmers' risks. Agriculture needs a new deal. The Survey wants to reorient policy to capture the potential offered by global value chains and the shifting of production lines out of China. It also **(4) debunks** myths about the negative impact of free trade agreements on India. Unfortunately, India's recent policies have run counter to what's needed to grab available opportunities. Import substitution and a degree of insularity mark trade policy. They are counterproductive. The Survey's most important takeaway is a set of arguments which call for greater market **(5) orientation** and smarter government intervention. Today's Budget should offer a glimpse into whether the government is contemplating any change of track and could move to a more reformist path.

- Question No. 48

Against the word indicated as (3), in the passage, choose the best word from the choices that can replace the word indicated as (3). If none of the choices can be a replacement, select (e).

Options :

1. exacting
2. convincing
3. deciding
4. precisely
5. None of these

Answer : convincing

Direction:

Read the following passage carefully and answer the given questions.

A part of the Survey, which is prepared by the finance ministry, highlights the many mistakes in government policy. Most of these mistakes are inherent to the current government's approach. The Survey makes a **(3) compelling** case for a policy approach friendlier to markets. It also points out that long standing laws probably contribute to market failures rather than address them. Laws such as the Essential Commodities Act are an anachronism today. Separately, poorly designed agricultural policies are exacerbating price swings and increasing farmers' risks. Agriculture needs a new deal. The Survey wants to reorient policy to capture the potential offered by global value chains and the shifting of production lines out of China. It also **(4) debunks** myths about the negative impact of free trade agreements on India. Unfortunately, India's recent policies have run counter to what's needed to grab available opportunities. Import substitution and a degree of insularity mark trade policy. They are counterproductive. The Survey's most important takeaway is a set of arguments which call for greater market **(5) orientation** and smarter government intervention. Today's Budget should offer a glimpse into whether the government is contemplating any change of track and could move to a more reformist path.

- Question No. 49

Against the word indicated as (4), in the passage, choose the best word from the choices that can replace the word indicated as (4). If none of the choices can be a replacement, select (e).

Options :

1. evince
2. belies
3. adduce
4. cites
5. None of these

Answer : belies

Direction:

Read the following passage carefully and answer the given questions.

A part of the Survey, which is prepared by the finance ministry, highlights the many mistakes in government policy. Most of these mistakes are inherent to the current government's approach. The Survey makes a **(3) compelling** case for a policy approach friendlier to markets. It also points out that long standing laws probably contribute to market failures rather than address them. Laws such as the Essential Commodities Act are an anachronism today. Separately, poorly designed agricultural policies are exacerbating price swings and increasing farmers' risks. Agriculture needs a new deal. The Survey wants to reorient policy to capture the potential offered by global value chains and the shifting of production lines out of China. It also **(4) debunks** myths about the negative impact of free trade agreements on India. Unfortunately, India's recent policies have run counter to what's needed to grab available opportunities. Import substitution and a degree of insularity mark trade policy. They are counterproductive. The Survey's most important takeaway is a set of arguments which call for greater market **(5) orientation** and smarter government intervention. Today's Budget should offer a glimpse into whether the government is contemplating any change of track and could move to a more reformist path.

• Question No. 50

Against the word indicated as (5), in the passage, choose the best word from the choices that can replace the word indicated as (5). If none of the choices can be a replacement, select (e).

Options :

1. frontage
2. induction
3. guidance
4. training
5. None of these

Answer : None of these

Direction:

Given below are four sentences which are divided into several parts. Answer the following questions based on these statements.

- A) besides working hard to reach the best level in their sport (1) comebacks are always difficult in sport (2) who had to take care of their child (3) and it is even harder for mothers (4)
- B) for the longest single spaceflight by a woman, (1) eclipsing the record of 288 days (2) NASA Astronaut Christine Koch set a new record (3) set by former NASA Astronaut Peggy Whitson in 2016-17 (4)

C) – come to the same stage one after the another (1) – vocalist and playback singer Ronkini Gupta and violinist Dr. Subramaniam (2) which saw musicians from different streams (3) Such women sportspersons were treated to a recently-held concert in the city (4)

D) preceded by an introduction to their traditional dance forms, (1) will present scenes from the Ramayana, (2) Moreover, A troupe from Myanmar (3) including candlelight dance amongst others. (4)

• Question No. 51

Which of the following is the correct sequence of the rearrangement of sentence (A)?

Options :

1. 1324
2. 1243
3. 2431
4. 1243
5. None of These

Answer : 2431

Direction:

Given below are four sentences which are divided into several parts. Answer the following questions based on these statements.

A) besides working hard to reach the best level in their sport (1) comebacks are always difficult in sport (2) who had to take care of their child (3) and it is even harder for mothers (4)

B) for the longest single spaceflight by a woman, (1) eclipsing the record of 288 days (2) NASA Astronaut Christine Koch set a new record (3) set by former NASA Astronaut Peggy Whitson in 2016-17 (4)

C) – come to the same stage one after the another (1) – vocalist and playback singer Ronkini Gupta and violinist Dr. Subramaniam (2) which saw musicians from different streams (3) Such women sportspersons were treated to a recently-held concert in the city (4)

D) preceded by an introduction to their traditional dance forms, (1) will present scenes from the Ramayana, (2) Moreover, A troupe from Myanmar (3) including candlelight dance amongst others. (4)

• Question No. 52

Which of the following is the correct sequence of the rearrangement of sentence (B)?

Options :

1. 1324
2. 3124
3. 2431
4. 1342
5. None of These

Answer : 3124

Direction:

Given below are four sentences which are divided into several parts. Answer the following questions based on these statements.

- A) besides working hard to reach the best level in their sport (1) comebacks are always difficult in sport (2) who had to take care of their child (3) and it is even harder for mothers (4)
- B) for the longest single spaceflight by a woman, (1) eclipsing the record of 288 days (2) NASA Astronaut Christine Koch set a new record (3) set by former NASA Astronaut Peggy Whitson in 2016-17 (4)
- C) – come to the same stage one after the another (1) – vocalist and playback singer Ronkini Gupta and violinist Dr. Subramaniam (2) which saw musicians from different streams (3) Such women sportspersons were treated to a recently-held concert in the city (4)
- D) preceded by an introduction to their traditional dance forms, (1) will present scenes from the Ramayana, (2) Moreover, A troupe from Myanmar (3) including candlelight dance amongst others. (4)

• Question No. 53

Which of the following is the correct sequence of the rearrangement of sentence (C)?

Options :

1. 4321

2. 1234
3. 4312
4. 4231
5. None of These

Answer : 4321

Direction:

Given below are four sentences which are divided into several parts. Answer the following questions based on these statements.

- A) besides working hard to reach the best level in their sport (1) comebacks are always difficult in sport (2) who had to take care of their child (3) and it is even harder for mothers (4)
- B) for the longest single spaceflight by a woman, (1) eclipsing the record of 288 days (2) NASA Astronaut Christine Koch set a new record (3) set by former NASA Astronaut Peggy Whitson in 2016-17 (4)
- C) – come to the same stage one after the another (1) – vocalist and playback singer Ronkini Gupta and violinist Dr. Subramaniam (2) which saw musicians from different streams (3) Such women sportspersons were treated to a recently-held concert in the city (4)
- D) preceded by an introduction to their traditional dance forms, (1) will present scenes from the Ramayana, (2) Moreover, A troupe from Myanmar (3) including candlelight dance amongst others. (4)

- Question No. 54

Which of the following is the correct sequence of the rearrangement of sentence (D)?

Options :

1. 4321
2. 1234
3. 4312
4. 3214
5. None of These

Answer : 3214

Direction:

Given below are four sentences which are divided into several parts. Answer the following questions based on these statements.

- A) besides working hard to reach the best level in their sport (1) comebacks are always difficult in sport (2) who had to take care of their child (3) and it is even harder for mothers (4)
- B) for the longest single spaceflight by a woman, (1) eclipsing the record of 288 days (2) NASA Astronaut Christine Koch set a new record (3) set by former NASA Astronaut Peggy Whitson in 2016-17 (4)
- C) – come to the same stage one after the another (1) – vocalist and playback singer Ronkini Gupta and violinist Dr. Subramaniam (2) which saw musicians from different streams (3) Such women sportspersons were treated to a recently-held concert in the city (4)
- D) preceded by an introduction to their traditional dance forms, (1) will present scenes from the Ramayana, (2) Moreover, A troupe from Myanmar (3) including candlelight dance amongst others. (4)

• Question No. 55

Rearrange the given four sentences in the proper sequence to form a meaningful paragraph and also choose the one which doesn't match the theme of the passage so formed.

Options :

1. BCD ; A
2. BDC ; A
3. ADC ; B
4. ACD ; B
5. None of These

Answer : ACD ; B

Direction:

Read the following passage carefully and answer the questions given below.

The global economy appears headed for uncharted, troubled territory thanks to the second wave of the coronavirus that has now spread to countries as far apart as Nigeria and New Zealand. **The virus has crippled global supply (A)/ chains, hit air travel and convulsed (B)/ markets as it appear all set to adversely impact (C)/ the U.S. economy, the global economic engine. (D)**/ This, when the Chinese economy is already in deep trouble due to the impact of the virus. A slowdown or worse, recession, in the two global economic engines is bad news for the world

economy, which may well tilt into recession. Markets reflected these concerns last week as indices plunged and investors stampeded for the exit, dumping stocks. Big money moved to the relative safety of government bonds, pushing prices up and yields down. The U.S. markets experienced their worst week since the 2008 global financial crisis as the Dow Jones Industrial Average and the S&P 500 fell by over 12%. Interestingly, investors seemed to boycott even that ultimate refuge (i) **during** troubled times, gold, whose prices also (ii) **faith** during the week. They seemed to place greater (iii) **fell** in the sovereign guarantee of the U.S. government (iv) **reflected** in its Treasury bills. But there is trouble ahead for the U.S. economy as companies ranging from Apple and Nvidia to Procter & Gamble and Adidas are in difficulty because of their large exposures to the Chinese market or their reliance on suppliers from China. This is a crisis unlike any other. **It is not a financial crisis that can be _____ out with time-tested measures such as rate cuts and bail-outs.** The challenge of the virus attack is that it is immune to financial solutions.

- Question No. 56

What should replace _____ in the given passage?

Options :

1. rag
2. shown
3. counter
4. sorted
5. None of these

Answer : sorted

Direction:

Read the following passage carefully and answer the questions given below.

The global economy appears headed for uncharted, troubled territory thanks to the second wave of the coronavirus that has now spread to countries as far apart as Nigeria and New Zealand. **The virus has crippled global supply (A)/ chains, hit air travel and convulsed (B)/ markets as it appear all set to adversely impact (C)/ the U.S. economy, the global economic engine. (D)/** This, when the Chinese economy is already in deep trouble due to the impact of the virus. A slowdown or worse, recession, in the two global economic engines is bad news for the world economy, which may well tilt into recession. Markets reflected these concerns last week as indices plunged and investors stampeded for the exit, dumping stocks. Big money moved to the relative safety of government bonds,

pushing prices up and yields down. The U.S. markets experienced their worst week since the 2008 global financial crisis as the Dow Jones Industrial Average and the S&P 500 fell by over 12%. Interestingly, investors seemed to boycott even that ultimate refuge (i) **during** troubled times, gold, whose prices also (ii) **faith** during the week. They seemed to place greater (iii) **fell** in the sovereign guarantee of the U.S. government (iv) **reflected** in its Treasury bills. But there is trouble ahead for the U.S. economy as companies ranging from Apple and Nvidia to Procter & Gamble and Adidas are in difficulty because of their large exposures to the Chinese market or their reliance on suppliers from China. This is a crisis unlike any other. **It is not a financial crisis that can be _____ out with time-tested measures such as rate cuts and bail-outs.** The challenge of the virus attack is that it is immune to financial solutions.

- Question No. 57

What is the tone of the passage?

Options :

1. Optimistic
2. Critical
3. Cynical
4. Indignant
5. None of these

Answer : Critical

Direction:

Read the following passage carefully and answer the questions given below.

The global economy appears headed for uncharted, troubled territory thanks to the second wave of the coronavirus that has now spread to countries as far apart as Nigeria and New Zealand. **The virus has crippled global supply (A)/ chains, hit air travel and convulsed (B)/ markets as it appear all set to adversely impact (C)/ the U.S. economy, the global economic engine. (D)/** This, when the Chinese economy is already in deep trouble due to the impact of the virus. A slowdown or worse, recession, in the two global economic engines is bad news for the world economy, which may well tilt into recession. Markets reflected these concerns last week as indices plunged and investors stampeded for the exit, dumping stocks. Big money moved to the relative safety of government bonds, pushing prices up and yields down. The U.S. markets experienced their worst week since the 2008 global financial crisis as the Dow Jones Industrial Average and the S&P 500 fell by over 12%. Interestingly, investors seemed to

boycott even that ultimate refuge (i) **during** troubled times, gold, whose prices also (ii) **faith** during the week. They seemed to place greater (iii) **fell** in the sovereign guarantee of the U.S. government (iv) **reflected** in its Treasury bills. But there is trouble ahead for the U.S. economy as companies ranging from Apple and Nvidia to Procter & Gamble and Adidas are in difficulty because of their large exposures to the Chinese market or their reliance on suppliers from China. This is a crisis unlike any other. **It is not a financial crisis that can be _____ out with time-tested measures such as rate cuts and bail-outs.** The challenge of the virus attack is that it is immune to financial solutions.

• Question No. 58

By what percent, the Dow Jones Industrial Average and the S&P 500 fell?

Options :

1. 6 %
2. 12 %
3. 18 %
4. 20 %
5. None of these

Answer : 12 %

Direction:

Read the following passage carefully and answer the questions given below.

The global economy appears headed for uncharted, troubled territory thanks to the second wave of the coronavirus that has now spread to countries as far apart as Nigeria and New Zealand. **The virus has crippled global supply (A)/ chains, hit air travel and convulsed (B)/ markets as it appear all set to adversely impact (C)/ the U.S. economy, the global economic engine. (D)/** This, when the Chinese economy is already in deep trouble due to the impact of the virus. A slowdown or worse, recession, in the two global economic engines is bad news for the world economy, which may well tilt into recession. Markets reflected these concerns last week as indices plunged and investors stampeded for the exit, dumping stocks. Big money moved to the relative safety of government bonds, pushing prices up and yields down. The U.S. markets experienced their worst week since the 2008 global financial crisis as the Dow Jones Industrial Average and the S&P 500 fell by over 12%. Interestingly, investors seemed to boycott even that ultimate refuge (i) **during** troubled times, gold, whose prices also (ii) **faith** during the week. They seemed to place greater (iii) **fell** in the sovereign guarantee of the U.S. government (iv) **reflected** in its Treasury bills.

But there is trouble ahead for the U.S. economy as companies ranging from Apple and Nvidia to Procter & Gamble and Adidas are in difficulty because of their large exposures to the Chinese market or their reliance on suppliers from China. This is a crisis unlike any other. **It is not a financial crisis that can be _____ out with time-tested measures such as rate cuts and bail-outs.** The challenge of the virus attack is that it is immune to financial solutions.

• Question No. 59

A sentence with four bold words is given in the passage. Amongst the given bold words which of the following option must replace each other to make the sentence contextually correct and meaningful.

Options :

1. (i)-(iv)
2. (i)-(iii)
3. (ii)-(iii)
4. (i)-(ii)
5. None of these

Answer : (ii)-(iii)

Direction:

Read the following passage carefully and answer the questions given below.

The global economy appears headed for uncharted, troubled territory thanks to the second wave of the coronavirus that has now spread to countries as far apart as Nigeria and New Zealand. **The virus has crippled global supply (A)/ chains, hit air travel and convulsed (B)/ markets as it appear all set to adversely impact (C)/ the U.S. economy, the global economic engine. (D)** This, when the Chinese economy is already in deep trouble due to the impact of the virus. A slowdown or worse, recession, in the two global economic engines is bad news for the world economy, which may well tilt into recession. Markets reflected these concerns last week as indices plunged and investors stampeded for the exit, dumping stocks. Big money moved to the relative safety of government bonds, pushing prices up and yields down. The U.S. markets experienced their worst week since the 2008 global financial crisis as the Dow Jones Industrial Average and the S&P 500 fell by over 12%. Interestingly, investors seemed to boycott even that ultimate refuge **(i) during** troubled times, gold, whose prices also **(ii) faith** during the week. They seemed to place greater **(iii) fell** in the sovereign guarantee of the U.S. government **(iv) reflected** in its Treasury bills. But there is trouble ahead for the U.S. economy as companies ranging from Apple and Nvidia to Procter & Gamble

and Adidas are in difficulty because of their large exposures to the Chinese market or their reliance on suppliers from China. This is a crisis unlike any other. **It is not a financial crisis that can be _____ out with time-tested measures such as rate cuts and bail-outs.** The challenge of the virus attack is that it is immune to financial solutions.

- Question No. 60

A sentence in bold is divided into four parts. Find if there is error in any part of the sentence and mark that as your answer?

Options :

1. B
2. C
3. D
4. A
5. No error

Answer : C

Direction:

Read the following passage carefully and answer the questions given below.

The global economy appears headed for uncharted, troubled territory thanks to the second wave of the coronavirus that has now spread to countries as far apart as Nigeria and New Zealand. **The virus has crippled global supply (A)/ chains, hit air travel and convulsed (B)/ markets as it appear all set to adversely impact (C)/ the U.S. economy, the global economic engine. (D)**/ This, when the Chinese economy is already in deep trouble due to the impact of the virus. A slowdown or worse, recession, in the two global economic engines is bad news for the world economy, which may well tilt into recession. Markets reflected these concerns last week as indices plunged and investors stampeded for the exit, dumping stocks. Big money moved to the relative safety of government bonds, pushing prices up and yields down. The U.S. markets experienced their worst week since the 2008 global financial crisis as the Dow Jones Industrial Average and the S&P 500 fell by over 12%. Interestingly, investors seemed to boycott even that ultimate refuge (i) **during** troubled times, gold, whose prices also (ii) **faith** during the week. They seemed to place greater (iii) **fell** in the sovereign guarantee of the U.S. government (iv) **reflected** in its Treasury bills. But there is trouble ahead for the U.S. economy as companies ranging from Apple and Nvidia to Procter & Gamble and Adidas are in difficulty because of their large exposures to the Chinese market or their reliance on suppliers

from China. This is a crisis unlike any other. **It is not a financial crisis that can be _____ out with time-tested measures such as rate cuts and bail-outs.** The challenge of the virus attack is that it is immune to financial solutions.

• Question No. 61

What is the main reason for the upcoming trouble of the US economy?

Options :

1. Vast emigration of Chinese community to US.
2. Import and export of Chinese goods to US from China.
3. Large exposure of major companies like Apple, Adidas, etc. to Chinese markets.
4. Reliance of investors on Chinese suppliers.
5. None of these

Answer : Large exposure of major companies like Apple, Adidas, etc. to Chinese markets.

Direction:

Below sections of sentence are provided with five options. All the four options are the ways to combine the sections of sentence and frame it into one single sentence. You need to find out the best option which is contextually and grammatically correct and if none of the given sentence is correct mark 'none of these' as your answer.

• Question No. 62

a genuine sea change are washing through the industry / In the 2010s / but the chance to turn it back / watch fans obsessed not over new ways to tell the time /

Options :

1. Apart from watch fans being obsessed over new ways to tell the time, they also got a chance to turn it back due to a genuine sea change that washed through the industry in the 2010s.
2. A genuine sea change was washing through the industry in the 2010s, because watch fans obsessed over new ways to tell the time and the chance to turn back.
3. Watch fans obsessed not only over new ways to tell the time but the chance to turn it back, as a genuine sea change washed through the industry in the 2010s.

4. In the 2010s, a genuine sea change washed through the industry, as watch fans obsessed not over new ways to tell the time, but the chance to turn it back.
5. None of these

Answer : In the 2010s, a genuine sea change washed through the industry, as watch fans obsessed not over new ways to tell the time, but the chance to turn it back.

Direction:

Below sections of sentence are provided with five options. All the four options are the ways to combine the sections of sentence and frame it into one single sentence. You need to find out the best option which is contextually and grammatically correct and if none of the given sentence is correct mark 'none of these' as your answer.

- Question No. 63

If you have been scanning Twitter of late / you must have spotted a picture of a visiting card / of Geeta Kale, who works / as a house-help in Pune.

Options :

1. Geeta Kale, who works, if you have been scanning Twitter of late must have spotted a picture of her visiting card, as a house-help in Pune,
2. If you have been scanning Twitter of late, you must have spotted a picture of a visiting card of Geeta Kale, who works as a house-help in Pune.
3. You must have spotted a visiting card of Geeta Kale, as you have been scanning Twitter of late, who works as a house-help in Pune.
4. If you have been scanning Twitter of late, Geeta Kale, who works as a house-help in Pune, picture of her visiting card must been have spotted.
5. None of these

Answer : If you have been scanning Twitter of late, you must have spotted a picture of a visiting card of Geeta Kale, who works as a house-help in Pune.

Direction:

In each of the questions given below, a sentence is given which is divided into four parts A, B, C and D. These four parts may or may not be in their correct position. The sentence is then followed by options with the correct combination of parts that should replace each other in order to make the sentence grammatically and contextually correct. Find the correct combination of parts that replace each other. If the sentence is correct as it is, select 'as is' as your option.

- Question No. 64

Continued to shape the world to the present day (A) / the soon-to-be victorious allies laid the groundwork (B) / for new global institutions that have (C) / as World War II wound down (D).

Options :

1. Only A-D
2. Only B-C
3. Both A-D & B-C
4. Both A-B & C-D
5. The sentence is correct

Answer : Only A-D

Direction:

In each of the questions given below, a sentence is given which is divided into four parts A, B, C and D. These four parts may or may not be in their correct position. The sentence is then followed by options with the correct combination of parts that should replace each other in order to make the sentence grammatically and contextually correct. Find the correct combination of parts that replace each other. If the sentence is correct as it is, select '5' as your option.

- Question No. 65

its network through a mobile app (A) / of any customer on (B) / to enable its subscribers to recharge the account (C) / Reliance Jio has introduced a new system (D)

Options :

1. Only A-D
2. Only B-C
3. Both A-D & B-C
4. Both A-B & C-D
5. The sentence is correct

Answer : Both A-D & B-C

Direction:

In each of the questions given below, a sentence is given which is divided into four parts A, B, C and D. These four parts may or may not be in their correct position. The sentence is then followed by options with the correct

combination of parts that should replace each other in order to make the sentence grammatically and contextually correct. Find the correct combination of parts that replace each other. If the sentence is correct as it is, select '5' as your option.

- Question No. 66

Temporary changes to its asset classification norms (A) / The Reserve Bank of India (RBI) on Friday made (B) / offering some reprieve to borrowers (C) / while ensuring adequate risk buffers for banks (D)

Options :

1. Only A-B
2. Only C-D
3. Both A-D & B-C
4. Both A-B & C-D
5. The sentence is correct

Answer : Only A-B

Direction:

Read the following passage carefully and answer the questions given below it. Certain words/ Phrases have been printed in bold to help you locate them while answering some of the questions.

Considered amongst the greatest works of Western literature, the Iliad, paired with its sequel, the Odyssey, is attributed to Homer.

However, that the author of the Iliad was not the same as the compiler of the fantastic tales in the Odyssey is arguable on several scores. The two epics belong to different literary types; the Iliad is essentially dramatic in its confrontation of opposing warriors who converse like the actors in Attic tragedy, while the Odyssey is cast as a novel narrated in more everyday human speech. In their physical structure, also, the two epics display an equally pronounced difference. The Odyssey is composed in six distinct cantos of four chapters ("books") each, whereas the Iliad moves unbrokenly forward with only one irrelevant episode in its tightly woven plot. Readers who examine psychological nuances see in the two works some distinctly different human responses and behavioral attitudes. For example, the Iliad voices admiration for the beauty and speed of horses, while the Odyssey shows no interest in these animals. The Iliad dismisses dogs as mere scavengers, while the poet of the Odyssey reveals a modern sentimental sympathy for Odysseus's faithful old hound, Argos.

But the most cogent argument for separating the two poems by assigning them to different authors is the archeological criterion of implied chronology. In the Iliad the Phoenicians are praised as skilled craftsmen working in metal and weavers of elaborate, much-prized garments. The shield which the metalworking god Hephaistos forges for Achilles in the Iliad seems inspired by the metal bowls with inlaid figures in action made by the Phoenicians and introduced by them into Greek and Etruscan commerce in the 8th century B.C. In contrast, in the Odyssey Greek sentiment toward the Phoenicians has undergone a drastic change. Although they are still regarded as clever craftsmen, in place of the Iliad's laudatory polydaidaloi ("of manifold skills") the epithet is parodied into polypaipaloi ("of manifold scurvy tricksters"), reflecting the competitive penetration into Greek commerce by traders from Phoenician Carthage in the 7th century B.C.

One thing, however, is certain: both epics were created without recourse to writing. Between the decline of Mycenaean and the emergence of classical Greek civilization—which is to say, from the late 12th to the mid-8th century B.C.—the inhabitants of the Greek lands had lost all knowledge of the syllabic script of their Mycenaean fore-bears and had not yet acquired from the easternmost shore of the Mediterranean that familiarity with Phoenician alphabetic writing from which classical Greek literacy (and in turn, Etruscan, Roman, and modern European literacy) derived. The same conclusion of illiterate composition may be reached from a critical inspection of the poems themselves. Among many races and in many different periods there has existed (and still exists sporadically) a form of purely oral and unwritten poetic speech, distinguishable from normal and printed literature by special traits that are readily recognizable and specifically distinctive. To this class the Homeric epics conform. Hence it would seem an inevitable inference that they must have been created either before the end of the 8th century B.C. or so shortly after that date that the use of alphabetic writing had not yet been developed sufficiently to record lengthy compositions. It is this illiterate environment that explains the absence of all contemporary historical record of the authors of the two great epics.

It is probable that Homer's name was applied to two distinct individuals differing in temperament and artistic accomplishment, born perhaps as much as a century apart, but practicing the same traditional craft of oral composition and recitation. Although each became known as "Homer," it may be (as one ancient source asserts) that "homros" was a dialectal word for a blind man and so came to be used generically of the old and often sightless wandering reciters of heroic legends in the traditional meter of unrhymed dactylic hexameters. Thus there could have been many Homers. The two epics ascribed to Homer, however, have been as highly prized in modern

as in ancient times for their marvelous vividness of expression, their keenness of personal characterization, their unflagging interest, whether in narration of action or in animated dramatic dialogue.

• Question No. 67

As per this article, which of the following Statements can be reasonably inferred from the passage?

Options :

1. Before the 12th century BC , the use of syllabic writing existed in Ancient Greece.
2. Phoenician traders flourished in Greece at the time the Homeric epics were composed.
3. Only (A) & (B)
4. Iliad and Odyssey are purely oral poetic speech, set to rhyme.
5. None of these

Answer : Only (A) & (B)

Direction:

Read the following passage carefully and answer the questions given below it. Certain words/ Phrases have been printed in bold to help you locate them while answering some of the questions.

Considered amongst the greatest works of Western literature, the Iliad, paired with its sequel, the Odyssey, is attributed to Homer.

However, that the author of the Iliad was not the same as the compiler of the fantastic tales in the Odyssey is arguable on several scores. The two epics belong to different literary types; the Iliad is essentially dramatic in its confrontation of opposing warriors who converse like the actors in Attic tragedy, while the Odyssey is cast as a novel narrated in more everyday human speech. In their physical structure, also, the two epics display an equally pronounced difference. The Odyssey is composed in six distinct cantos of four chapters ("books") each, whereas the Iliad moves unbrokenly forward with only one irrelevant episode in its tightly woven plot. Readers who examine psychological nuances see in the two works some distinctly different human responses and behavioral attitudes. For example, the Iliad voices admiration for the beauty and speed of horses, while the Odyssey shows no interest in these animals. The Iliad dismisses dogs as mere scavengers, while the poet of the Odyssey reveals a modern sentimental sympathy for Odysseus's faithful old hound, Argos.

But the most cogent argument for separating the two poems by assigning them to different authors is the archeological criterion of implied chronology. In the Iliad the Phoenicians are praised as skilled craftsmen working in

metal and weavers of elaborate, much-prized garments. The shield which the metalworking god Hephaistos forges for Achilles in the Iliad seems inspired by the metal bowls with inlaid figures in action made by the Phoenicians and introduced by them into Greek and Etruscan commerce in the 8th century B.C. In contrast, in the Odyssey Greek sentiment toward the Phoenicians has undergone a drastic change. Although they are still regarded as clever craftsmen, in place of the Iliad's laudatory polydaidaloi ("of manifold skills") the epithet is parodied into polypaipaloi ("of manifold scurvy tricksters"), reflecting the competitive penetration into Greek commerce by traders from Phoenician Carthage in the 7th century B.C.

One thing, however, is certain: both epics were created without recourse to writing. Between the decline of Mycenaean and the emergence of classical Greek civilization—which is to say, from the late 12th to the mid-8th century B.C.—the inhabitants of the Greek lands had lost all knowledge of the syllabic script of their Mycenaean fore-bears and had not yet acquired from the easternmost shore of the Mediterranean that familiarity with Phoenician alphabetic writing from which classical Greek literacy (and in turn, Etruscan, Roman, and modern European literacy) derived. The same conclusion of illiterate composition may be reached from a critical inspection of the poems themselves. Among many races and in many different periods there has existed (and still exists sporadically) a form of purely oral and unwritten poetic speech, distinguishable from normal and printed literature by special traits that are readily recognizable and specifically distinctive. To this class the Homeric epics conform. Hence it would seem an inevitable inference that they must have been created either before the end of the 8th century B.C. or so shortly after that date that the use of alphabetic writing had not yet been developed sufficiently to record lengthy compositions. It is this illiterate environment that explains the absence of all contemporary historical record of the authors of the two great epics.

It is probable that Homer's name was applied to two distinct individuals differing in temperament and artistic accomplishment, born perhaps as much as a century apart, but practicing the same traditional craft of oral composition and recitation. Although each became known as "Homer," it may be (as one ancient source asserts) that "homros" was a dialectal word for a blind man and so came to be used generically of the old and often sightless wandering reciters of heroic legends in the traditional meter of unrhymed dactylic hexameters. Thus there could have been many Homers. The two epics ascribed to Homer, however, have been as highly prized in modern as in ancient times for their marvelous vividness of expression, their keenness of personal characterization, their unflagging interest, whether in narration of action or in animated dramatic dialogue.

- Question No. 68

Which of the following is/are hurdles for the correct knowledge about the creator of the two epics?

Options :

1. Natural disasters
2. Constant war among the clans
3. illiterate environment
4. Unwillingness
5. None of these

Answer : illiterate environment

Direction:

Read the following passage carefully and answer the questions given below it. Certain words/ Phrases have been printed in bold to help you locate them while answering some of the questions.

Considered amongst the greatest works of Western literature, the Iliad, paired with its sequel, the Odyssey, is attributed to Homer.

However, that the author of the Iliad was not the same as the compiler of the fantastic tales in the Odyssey is arguable on several scores. The two epics belong to different literary types; the Iliad is essentially dramatic in its confrontation of opposing warriors who converse like the actors in Attic tragedy, while the Odyssey is cast as a novel narrated in more everyday human speech. In their physical structure, also, the two epics display an equally pronounced difference. The Odyssey is composed in six distinct cantos of four chapters ("books") each, whereas the Iliad moves unbrokenly forward with only one irrelevant episode in its tightly woven plot. Readers who examine psychological nuances see in the two works some distinctly different human responses and behavioral attitudes. For example, the Iliad voices admiration for the beauty and speed of horses, while the Odyssey shows no interest in these animals. The Iliad dismisses dogs as mere scavengers, while the poet of the Odyssey reveals a modern sentimental sympathy for Odysseus's faithful old hound, Argos.

But the most cogent argument for separating the two poems by assigning them to different authors is the archeological criterion of implied chronology. In the Iliad the Phoenicians are praised as skilled craftsmen working in metal and weavers of elaborate, much-prized garments. The shield which the metalworking god Hephaistos forges for Achilles in the Iliad seems inspired by the metal bowls with inlaid figures in action made by the Phoenicians and introduced by them into Greek and Etruscan commerce in the 8th century B.C. In contrast, in the Odyssey Greek sentiment toward the Phoenicians has undergone a drastic change. Although they are still regarded as clever craftsmen, in place of the Iliad's laudatory polydaidaloι ("of manifold skills") the epithet is parodied into polypaipaloi

("of manifold scurvy tricksters"), reflecting the competitive penetration into Greek commerce by traders from Phoenician Carthage in the 7th century B.C.

One thing, however, is certain: both epics were created without recourse to writing. Between the decline of Mycenaean and the emergence of classical Greek civilization—which is to say, from the late 12th to the mid-8th century B.C.—the inhabitants of the Greek lands had lost all knowledge of the syllabic script of their Mycenaean fore-bears and had not yet acquired from the easternmost shore of the Mediterranean that familiarity with Phoenician alphabetic writing from which classical Greek literacy (and in turn, Etruscan, Roman, and modern European literacy) derived. The same conclusion of illiterate composition may be reached from a critical inspection of the poems themselves. Among many races and in many different periods there has existed (and still exists sporadically) a form of purely oral and unwritten poetic speech, distinguishable from normal and printed literature by special traits that are readily recognizable and specifically distinctive. To this class the Homeric epics conform. Hence it would seem an inevitable inference that they must have been created either before the end of the 8th century B.C. or so shortly after that date that the use of alphabetic writing had not yet been developed sufficiently to record lengthy compositions. It is this illiterate environment that explains the absence of all contemporary historical record of the authors of the two great epics.

It is probable that Homer's name was applied to two distinct individuals differing in temperament and artistic accomplishment, born perhaps as much as a century apart, but practicing the same traditional craft of oral composition and recitation. Although each became known as "Homer," it may be (as one ancient source asserts) that "homros" was a dialectal word for a blind man and so came to be used generically of the old and often sightless wandering reciters of heroic legends in the traditional meter of unrhymed dactylic hexameters. Thus there could have been many Homers. The two epics ascribed to Homer, however, have been as highly prized in modern as in ancient times for their marvelous vividness of expression, their keenness of personal characterization, their unflagging interest, whether in narration of action or in animated dramatic dialogue.

- Question No. 69

Which Western literature is the Sequel to Illiad?

Options :

1. Homer
2. Odyssey

3. Homros
4. Mycenaean
5. None of these

Answer : Odyssey

Direction:

Read the following passage carefully and answer the questions given below it. Certain words/ Phrases have been printed in bold to help you locate them while answering some of the questions.

Considered amongst the greatest works of Western literature, the Iliad, paired with its sequel, the Odyssey, is attributed to Homer.

However, that the author of the Iliad was not the same as the compiler of the fantastic tales in the Odyssey is arguable on several scores. The two epics belong to different literary types; the Iliad is essentially dramatic in its confrontation of opposing warriors who converse like the actors in Attic tragedy, while the Odyssey is cast as a novel narrated in more everyday human speech. In their physical structure, also, the two epics display an equally pronounced difference. The Odyssey is composed in six distinct cantos of four chapters ("books") each, whereas the Iliad moves unbrokenly forward with only one irrelevant episode in its tightly woven plot. Readers who examine psychological nuances see in the two works some distinctly different human responses and behavioral attitudes. For example, the Iliad voices admiration for the beauty and speed of horses, while the Odyssey shows no interest in these animals. The Iliad dismisses dogs as mere scavengers, while the poet of the Odyssey reveals a modern sentimental sympathy for Odysseus's faithful old hound, Argos.

But the most cogent argument for separating the two poems by assigning them to different authors is the archeological criterion of implied chronology. In the Iliad the Phoenicians are praised as skilled craftsmen working in metal and weavers of elaborate, much-prized garments. The shield which the metalworking god Hephaistos forges for Achilles in the Iliad seems inspired by the metal bowls with inlaid figures in action made by the Phoenicians and introduced by them into Greek and Etruscan commerce in the 8th century B.C. In contrast, in the Odyssey Greek sentiment toward the Phoenicians has undergone a drastic change. Although they are still regarded as clever craftsmen, in place of the Iliad's laudatory polydaioloi ("of manifold skills") the epithet is parodied into polypaipaloi ("of manifold scurvy tricksters"), reflecting the competitive penetration into Greek commerce by traders from Phoenician Carthage in the 7th century B.C.

One thing, however, is certain: both epics were created without recourse to writing. Between the decline of Mycenaean and the emergence of classical Greek civilization—which is to say, from the late 12th to the mid-8th

century B.C.—the inhabitants of the Greek lands had lost all knowledge of the syllabic script of their Mycenaean fore-bears and had not yet acquired from the easternmost shore of the Mediterranean that familiarity with Phoenician alphabetic writing from which classical Greek literacy (and in turn, Etruscan, Roman, and modern European literacy) derived. The same conclusion of illiterate composition may be reached from a critical inspection of the poems themselves. Among many races and in many different periods there has existed (and still exists sporadically) a form of purely oral and unwritten poetic speech, distinguishable from normal and printed literature by special traits that are readily recognizable and specifically distinctive. To this class the Homeric epics conform. Hence it would seem an inevitable inference that they must have been created either before the end of the 8th century B.C. or so shortly after that date that the use of alphabetic writing had not yet been developed sufficiently to record lengthy compositions. It is this illiterate environment that explains the absence of all contemporary historical record of the authors of the two great epics.

It is probable that Homer's name was applied to two distinct individuals differing in temperament and artistic accomplishment, born perhaps as much as a century apart, but practicing the same traditional craft of oral composition and recitation. Although each became known as "Homer, " it may be (as one ancient source asserts) that "homros "was a dialectal word for a blind man and so came to be used generically of the old and often sightless wandering reciters of heroic legends in the traditional meter of unrhymed dactylic hexameters. Thus there could have been many Homers. The two epics ascribed to Homer, however, have been as highly prized in modern as in ancient times for their marvelous vividness of expression, their keenness of personal characterization, their unflagging interest, whether in narration of action or in animated dramatic dialogue.

- Question No. 70

Which of the following is/are actions or statements validates that the two sequels are not composed by the same poet?

Options :

1. One is composed of six cantos whereas the other moves unbrokenly forward with only one irrelevant episode in its tightly woven plot
2. the two works some distinctly different human responses and behavioral attitudes
3. Both epics were created without recourse to writing.
4. Only (A) & (C)
5. Only (A) & (B)

Answer : Only (A) & (B)

Direction:

In each of the questions, two sentences are given which are divided into four parts (A), (B), (C) and (D). Both the sentences may have error in one of the four parts or may not have any error. You have to find out the parts containing error and mark that alternative as the answer.

• Question No. 71

I. It is not just that the MPC choose (A) to pause, it is that the decision (B) was unanimous which seems (C) to have taken some people by surprise. (D)

II. The government should vest (A) bank ownership in a holding (B) company whose board should (C) appointed boards of individuality banks. (D)

Options :

1. I-A ; II-D
2. II-B ; I-C
3. I-C ; II-A
4. I-D ; II-B
5. I-D ; II-D

Answer : I-A ; II-D

Direction:

In each of the questions, two sentences are given which are divided into four parts (A), (B), (C) and (D). Both the sentences may have error in one of the four parts or may not have any error. You have to find out the parts containing error and mark that alternative as the answer.

• Question No. 72

I. The ongoing global summit on (A) meet the climate change challenge, (B) COP 25, got off to headline (C) grabbing start on the heels of new data.(D)

II. Along with the rise in (A) temperature, the extent of (B) carbon dioxide on the (C) atmosphere has been increasing.(D)

Options :

1. I-D ; II-B
2. II-A ; I-C
3. I-C ; II-D
4. II-C ; I-B
5. I-D ; II-All are correct

Answer : II-C ; I-B

Direction:

In each of the questions, two sentences are given which are divided into four parts (A), (B), (C) and (D). Both the sentences may have error in one of the four parts or may not have any error. You have to find out the parts containing error and mark that alternative as the answer.

- Question No. 73

I. With the dramatic rise of China and (A) resurgent of Russia, geopolitical competition (B) is increasing and Western coherence (C) is becoming a rare commodity. (D)

II. The existing Constitution, in any (A) case, do not prevent the emergence of (B) office bearers who in popular perception are (C) seen as proxies of former administrators.(D)

Options :

1. I-D ; II-C
2. I-B ; II-B
3. I-C ; II-A
4. II-D ; I-C
5. I-A ; II-D

Answer : I-B ; II-B

Direction:

The finance ministry announced an amnesty scheme for Limited Liability Partnerships (LLPs) that defaulted on filing statutory documents such as statements of account and annual returns as a one-time opportunity to improve ease of doing business.

An official statement from the ministry said the 'LLP settlement Scheme, 2020' will remain open from 16 March till 13 June, 2020. The idea is to enable compliance by LLPs who were not able to file their documents due to **accumulated**

(6) late fee, which may prove to be a financial burden.

"It has been observed that due to applicability of additional fee on late filing, which in case of _____(7) delay could actually become a financial burden, a large number of Limited Liability Partnerships (LLPs) have remained non-compliant. As part of the government's constant efforts to **restrict (8)** ease of doing business, it has been decided to give a one-time relaxation in additional fee to the defaulting LLPs to make good their default by filing pending documents and to serve as a compliant LLP in future," said the statement.

The documents covered under the scheme include limited liability partnership agreement and changes to it, notice of appointment, cessation, changes in the name, address or designation of a partner or designated partner, annual or interim statement of account and solvency and annual return of the LLP.

The entities that sign up for the scheme can make good their defaults and gain immunity from prosecution. Under the scheme, documents that were due until the end of October 31 2019 can be filed now. A nominal additional fee of ₹10 a day for the period of delay, in addition to any fee payable for filing of such document or return, needs to be paid. The maximum additional fee to be paid per document is capped at Rs. 5,000.

- Question No. 74

Which of the following can be reasonably inferred from the passage?

- A. The government thinks that he is doing business will improve if LLP's file the statutory documents
- B. A major reason for not filing the statutory document by LLPs is the accumulated penalty.
- C. The compliance norms for an LLP is much more complicated than that of a proprietorship or partnership firm.

Options :

1. Only A
2. Only B
3. Only C
4. A & B
5. A & C

Answer : A & B

Direction:

The finance ministry announced an amnesty scheme for Limited Liability Partnerships (LLPs) that defaulted on filing statutory documents such as statements of account and annual returns as a one-time opportunity to improve ease of doing business.

An official statement from the ministry said the 'LLP settlement Scheme, 2020' will remain open from 16 March till 13 June, 2020. The idea is to enable compliance by LLPs who were not able to file their documents due to **accumulated (6)** late fee, which may prove to be a financial burden.

"It has been observed that due to applicability of additional fee on late filing, which in case of _____ **(7)** delay could actually become a financial burden, a large number of Limited Liability Partnerships (LLPs) have remained non-compliant. As part of the government's constant efforts to **restrict (8)** ease of doing business, it has been decided to give a one-time relaxation in additional fee to the defaulting LLPs to make good their default by filing pending documents and to serve as a compliant LLP in future," said the statement.

The documents covered under the scheme include limited liability partnership agreement and changes to it, notice of appointment, cessation, changes in the name, address or designation of a partner or designated partner, annual or interim statement of account and solvency and annual return of the LLP.

The entities that sign up for the scheme can make good their defaults and gain immunity from prosecution. Under the scheme, documents that were due until the end of October 31 2019 can be filed now. A nominal additional fee of ₹10 a day for the period of delay, in addition to any fee payable for filing of such document or return, needs to be paid. The maximum additional fee to be paid per document is capped at Rs. 5,000.

• Question No. 75

Which among the following documents, as per the passage, is not included in the scheme for filing by LLP's?

Options :

1. Appointment Letter
2. Change of Address
3. Annual Return of LLP
4. Information on inclusion of family members
5. Change in designation of partner

Answer : Information on inclusion of family members

Direction:

The finance ministry announced an amnesty scheme for Limited Liability Partnerships (LLPs) that defaulted on filing statutory documents such as statements of account and annual returns as a one-time opportunity to improve ease of doing business.

An official statement from the ministry said the 'LLP settlement Scheme, 2020' will remain open from 16 March till 13 June, 2020. The idea is to enable compliance by LLPs who were not able to file their documents due to **accumulated (6)** late fee, which may prove to be a financial burden.

"It has been observed that due to applicability of additional fee on late filing, which in case of _____ **(7)** delay could actually become a financial burden, a large number of Limited Liability Partnerships (LLPs) have remained non-compliant. As part of the government's constant efforts to **restrict (8)** ease of doing business, it has been decided to give a one-time relaxation in additional fee to the defaulting LLPs to make good their default by filing pending documents and to serve as a compliant LLP in future," said the statement.

The documents covered under the scheme include limited liability partnership agreement and changes to it, notice of appointment, cessation, changes in the name, address or designation of a partner or designated partner, annual or interim statement of account and solvency and annual return of the LLP.

The entities that sign up for the scheme can make good their defaults and gain immunity from prosecution. Under the scheme, documents that were due until the end of October 31 2019 can be filed now. A nominal additional fee of ₹10 a day for the period of delay, in addition to any fee payable for filing of such document or return, needs to be paid. The maximum additional fee to be paid per document is capped at Rs. 5,000.

- Question No. 76

What is the theme of the passage?

Options :

1. LLP settlement Scheme, 2020 is another complicated tax scheme by the current government regime that may not achieve its desired objective
2. LLP settlement Scheme, 2020 aims to bring LLPs under the compliance Cambridge by providing one time relaxation in late fee for filing documents.

3. Most of the companies in India end up with compliance complications that result in heavy fines
4. Filing of documents by LLPs will bring in greater transparency and ensure timely tax collection
5. None of the above

Answer : LLP settlement Scheme, 2020 aims to bring LLPs under the compliance amnesty by providing one time relaxation in late fee for filing documents.

Direction:

The finance ministry announced an amnesty scheme for Limited Liability Partnerships (LLPs) that defaulted on filing statutory documents such as statements of account and annual returns as a one-time opportunity to improve ease of doing business.

An official statement from the ministry said the 'LLP settlement Scheme, 2020' will remain open from 16 March till 13 June, 2020. The idea is to enable compliance by LLPs who were not able to file their documents due to **accumulated (6)** late fee, which may prove to be a financial burden.

"It has been observed that due to applicability of additional fee on late filing, which in case of _____ **(7)** delay could actually become a financial burden, a large number of Limited Liability Partnerships (LLPs) have remained non-compliant. As part of the government's constant efforts to **restrict (8)** ease of doing business, it has been decided to give a one-time relaxation in additional fee to the defaulting LLPs to make good their default by filing pending documents and to serve as a compliant LLP in future," said the statement.

The documents covered under the scheme include limited liability partnership agreement and changes to it, notice of appointment, cessation, changes in the name, address or designation of a partner or designated partner, annual or interim statement of account and solvency and annual return of the LLP.

The entities that sign up for the scheme can make good their defaults and gain immunity from prosecution. Under the scheme, documents that were due until the end of October 31 2019 can be filed now. A nominal additional fee of ₹10 a day for the period of delay, in addition to any fee payable for filing of such document or return, needs to be paid. The maximum additional fee to be paid per document is capped at Rs. 5,000.

- Question No. 77

Which of the following can fill the blank given in the passage?

Options :

1. vigorous
2. robust
3. inordinate
4. minor
5. negligible

Answer : inordinate

Direction:

The finance ministry announced an amnesty scheme for Limited Liability Partnerships (LLPs) that defaulted on filing statutory documents such as statements of account and annual returns as a one-time opportunity to improve ease of doing business.

An official statement from the ministry said the 'LLP settlement Scheme, 2020' will remain open from 16 March till 13 June, 2020. The idea is to enable compliance by LLPs who were not able to file their documents due to **accumulated (6)** late fee, which may prove to be a financial burden.

"It has been observed that due to applicability of additional fee on late filing, which in case of _____ **(7)** delay could actually become a financial burden, a large number of Limited Liability Partnerships (LLPs) have remained non-compliant. As part of the government's constant efforts to **restrict (8)** ease of doing business, it has been decided to give a one-time relaxation in additional fee to the defaulting LLPs to make good their default by filing pending documents and to serve as a compliant LLP in future," said the statement.

The documents covered under the scheme include limited liability partnership agreement and changes to it, notice of appointment, cessation, changes in the name, address or designation of a partner or designated partner, annual or interim statement of account and solvency and annual return of the LLP.

The entities that sign up for the scheme can make good their defaults and gain immunity from prosecution. Under the scheme, documents that were due until the end of October 31 2019 can be filed now. A nominal additional fee of ₹10 a day for the period of delay, in addition to any fee payable for filing of such document or return, needs to be paid. The maximum additional fee to be paid per document is capped at Rs. 5,000.

- Question No. 78

Which of the following is true as per the passage?

- A. The scheme announced by the finance ministry is to increase the ease of doing business
- B. The objective of the scheme is to bring to book the various LLP defaulters
- C. Under the scheme, those who have paid any penalty would be eligible for a refund

Options :

- 1. Only A
- 2. Only B
- 3. Only C
- 4. A & B
- 5. A & C

Answer : Only A

Direction:

The finance ministry announced an amnesty scheme for Limited Liability Partnerships (LLPs) that defaulted on filing statutory documents such as statements of account and annual returns as a one-time opportunity to improve ease of doing business.

An official statement from the ministry said the 'LLP settlement Scheme, 2020' will remain open from 16 March till 13 June, 2020. The idea is to enable compliance by LLPs who were not able to file their documents due to **accumulated (6)** late fee, which may prove to be a financial burden.

"It has been observed that due to applicability of additional fee on late filing, which in case of _____ **(7)** delay could actually become a financial burden, a large number of Limited Liability Partnerships (LLPs) have remained non-compliant. As part of the government's constant efforts to **restrict (8)** ease of doing business, it has been decided to give a one-time relaxation in additional fee to the defaulting LLPs to make good their default by filing pending documents and to serve as a compliant LLP in future," said the statement.

The documents covered under the scheme include limited liability partnership agreement and changes to it, notice of appointment, cessation, changes in the name, address or designation of a partner or designated partner, annual or interim statement of account and solvency and annual return of the LLP.

The entities that sign up for the scheme can make good their defaults and gain immunity from prosecution. Under the scheme, documents that were due until the end of October 31 2019 can be filed now. A nominal additional fee of ₹10 a day for the period of delay, in addition to any fee payable for filing of such document or return, needs to be paid. The maximum additional fee to be paid per document is capped at Rs. 5,000.

• Question No. 79

Which of the following words, opposite of the word given in bold, should replace the word given in bold in the passage – “restrict”?

Options :

1. motivate
2. promote
3. constrict
4. broadcast
5. announce

Answer : promote

Direction:

The finance ministry announced an amnesty scheme for Limited Liability Partnerships (LLPs) that defaulted on filing statutory documents such as statements of account and annual returns as a one-time opportunity to improve ease of doing business.

An official statement from the ministry said the ‘LLP settlement Scheme, 2020’ will remain open from 16 March till 13 June, 2020. The idea is to enable compliance by LLPs who were not able to file their documents due to **accumulated (6)** late fee, which may prove to be a financial burden.

“It has been observed that due to applicability of additional fee on late filing, which in case of _____ **(7)** delay could actually become a financial burden, a large number of Limited Liability Partnerships (LLPs) have remained non-compliant. As part of the government’s constant efforts to **restrict (8)** ease of doing business, it has been decided to give a one-time relaxation in additional fee to the defaulting LLPs to make good their default by filing pending documents and to serve as a compliant LLP in future,” said the statement.

The documents covered under the scheme include limited liability partnership agreement and changes to it, notice of appointment, cessation, changes in the name, address or designation of a partner or designated partner, annual or interim statement of account and solvency and annual return of the LLP.

The entities that sign up for the scheme can make good their defaults and gain immunity from prosecution. Under the scheme, documents that were due until the end of October 31 2019 can be filed now. A nominal additional fee of ₹10 a day for the period of delay, in addition to any fee payable for filing of such document or return, needs to be paid. The maximum additional fee to be paid per document is capped at Rs. 5,000.

- Question No. 80

Which of the following can replace the highlighted word – “accumulated”?

Options :

1. gross
2. net
3. total
4. piled up
5. absolute

Answer : piled up

Direction:

X women can do a job in 2Y days. 1.5X men can do that job in Y days and 3X children can do that job in 2y days. 8 men, 8 women and 8 children can do a job in $22\frac{1}{2}$ days. 9 men can do same job in Y+20 days.

- Question No. 81

What is the value of Y?

Options :

1. 20
2. 30
3. 45

- 4. 50
- 5. None of these

Answer : 20

Direction:

X women can do a job in 2Y days. 1.5X men can do that job in Y days and 3X children can do that job in 2y days. 8 men, 8 women and 8 children can do a job in $22\frac{1}{2}$ days. 9 men can do same job in Y+20 days.

- Question No. 82

How many women can do same job in Y days?

Options :

- 1. 20
- 2. 24
- 3. 32
- 4. 12
- 5. None of these

Answer : 24

Direction:

X women can do a job in 2Y days. 1.5X men can do that job in Y days and 3X children can do that job in 2y days. 8 men, 8 women and 8 children can do a job in $22\frac{1}{2}$ days. 9 men can do same job in Y+20 days.

- Question No. 83

In How many days 36 men & 36 children can do this job together?

Options :

- 1. 12 days
- 2. 8 days
- 3. 5 days
- 4. 10 days

5. None of these

Answer : 8 days

Direction:

X women can do a job in 2Y days. 1.5X men can do that job in Y days and 3X children can do that job in 2y days. 8 men, 8 women and 8 children can do a job in $22\frac{1}{2}$ days. 9 men can do same job in Y+20 days.

• Question No. 84

If 6 men started the work, after 10 days few more men joined and remaining work is done by 15 days. So how many men joined in between?

Options :

1. 12
2. 20
3. 15
4. 25
5. None of these

Answer : 20

Direction:

X women can do a job in 2Y days. 1.5X men can do that job in Y days and 3X children can do that job in 2y days. 8 men, 8 women and 8 children can do a job in $22\frac{1}{2}$ days. 9 men can do same job in Y+20 days.

• Question No. 85

9 men started & worked for 5 days and after that 10 women started the work and they also left after 10 days. In how many days remaining work can be done by 60 children?

Options :

1. 12
2. 20
3. 16

- 4. 25
- 5. None of these

Answer : 16

Direction:

Read the information carefully and answer the following questions:

Students in three classes are given as:

	A	B	C
Boys	40		
Girls		40	30

- i) The probability of selecting a girl from class A out of three classes is $\frac{5}{12}$.
- ii) The probability of selecting a boy from all students of all three classes is $\frac{3}{5}$.
- iii) The probability of selecting a boy from class B is equal to probability of selecting a boy from class C.

• Question No. 86

If 10% of boys from class B and 20% of girls from class A scored more than or equal to 90% marks in exam then find difference between boys from class B and girls from class A who scored less than 90% marks.

Options :

- 1. 32
- 2. 34
- 3. 35
- 4. 36
- 5. None of these

Answer : 32

Direction:

Read the information carefully and answer the following questions:

Students in three classes are given as:

	A	B	C
Boys	40		
Girls		40	30

- i) The probability of selecting a girl from class A out of three classes is $\frac{5}{12}$.
- ii) The probability of selecting a boy from all students of all three classes is $\frac{3}{5}$.
- iii) The probability of selecting a boy from class B is equal to probability of selecting a boy from class C.

• Question No. 87

Total number of boys from class A and B is how much % more than the total number of Girls from class B & C?

Options :

- 1. 75.62%
- 2. 71.42%
- 3. 73.62%
- 4. 82.15%
- 5. None of these

Answer : 71.42%

Direction:

Read the information carefully and answer the following questions:

There are some students (Male & Female) in class A & B. In Class A, female are 30% of total number of students of class A. In class B, number of male & female are equal. Male of class B is 3 times of number of female in class A.

• Question No. 88

The total number of female of A & B is what % of total students of both classes?

Options :

1. 20%
2. 21.42%
3. 10.71%
4. 42.85%
5. None of these

Answer : 42.85%

Direction:

Read the information carefully and answer the following questions:

There are some students (Male & Female) in class A & B. In Class A, female are 30% of total number of students of class A. In class B, number of male & female are equal. Male of class B is 3 times of number of female in class A.

- Question No. 89

The difference of female in A and male in B is of A & B is approximately what % of total students of both classes?

Options :

1. 42%
2. 22%
3. 30%
4. 40%
5. None of these

Answer : 22%

- Question No. 90

In the given series, one number is wrong:

1, 3, 6, 21, 88, 445, 2676

Now let wrong number in above series is a so make another series starting with a on same pattern and find 4th term of this new series:

a, __, __, ?

Options :

1. 30
2. 31
3. 32
4. 33
5. None of these

Answer : 33

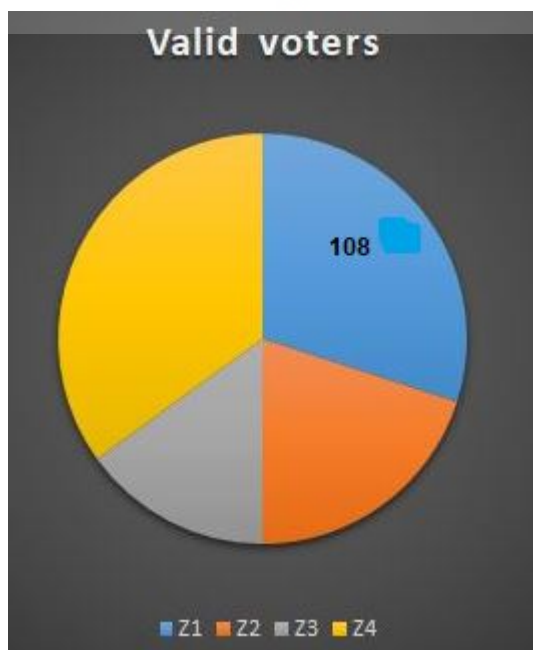
Direction:

Read the information carefully and answer the following questions:

A city divided into 4 zones: Z1, Z2, Z3 & Z4 has certain number of registered (invalid + valid) voters:

The ratio between valid voter's values in degrees of Z2 & Z4 is 3:7. Number of valid voters in Z3 is $\frac{1}{3}$ rd more the difference between valid voters in Z1 & Z2. Difference between number of valid voters between Z3 & Z4 is 480.

Number of valid voters in Z4 is more than that of Z3. 20% of the total registered voters are invalid. The angle given in pie chart below is in degree.



- Question No. 91

What will be the Central angle corresponding to number of valid voters of **Z3** in degrees?

Options :

1. 72 degree
2. 56 degree
3. 62 degree
4. 92 degree
5. None of these

Answer : 72 degree

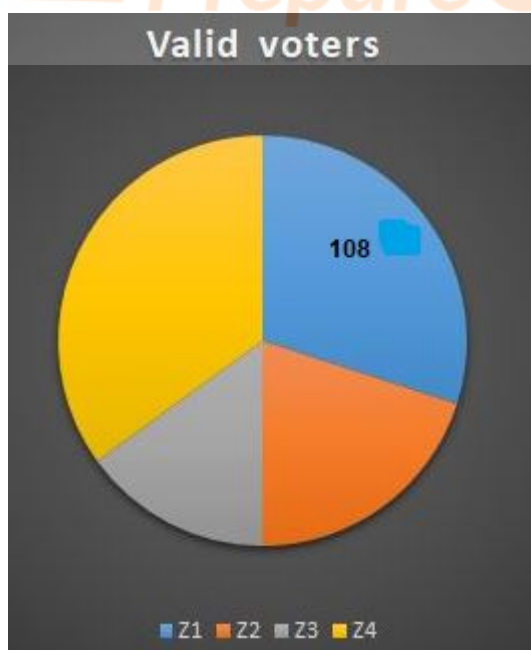
Direction:

Read the information carefully and answer the following questions:

A city divided into 4 zones: Z1,Z2, Z3& Z4 has certain number of registered (invalid + valid) voters:

The ratio between valid voter's values in degrees of Z2&Z4 is 3:7. Number of valid voters in Z3 is $\frac{1}{3}^{\text{rd}}$ more the difference between valid voters in Z1&Z2. Difference between number of valid voters between Z3&Z4 is 480.

Number of valid voters in Z4 is more than that of Z3. 20% of the total registered voters are invalid. The angle given in pie chart below is in degree.



• Question No. 92

The valid voters in Z3 is how much % more/less than that of Z2?

Options :

1. 25%
2. 33.33%
3. 50%
4. 60%
5. None of these

Answer : 33.33%

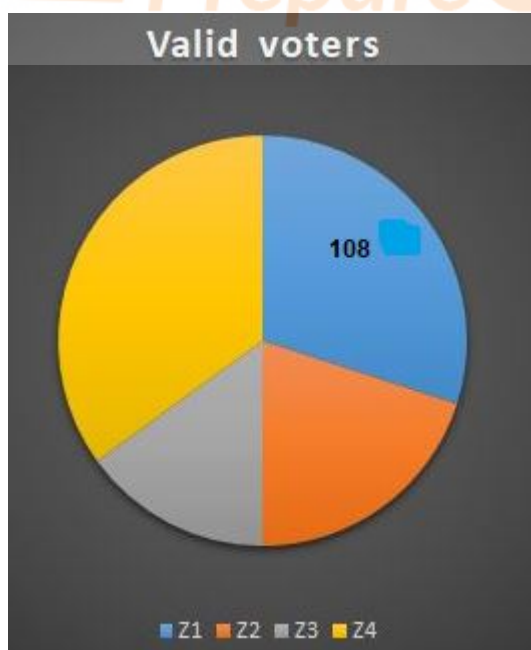
Direction:

Read the information carefully and answer the following questions:

A city divided into 4 zones: Z1, Z2, Z3 & Z4 has certain number of registered (invalid + valid) voters:

The ratio between valid voter's values in degrees of Z2 & Z4 is 3:7. Number of valid voters in Z3 is $\frac{1}{3}^{\text{rd}}$ more the difference between valid voters in Z1 & Z2. Difference between number of valid voters between Z3 & Z4 is 480.

Number of valid voters in Z4 is more than that of Z3. 20% of the total registered voters are invalid. The angle given in pie chart below is in degree.



- Question No. 93

The valid voters in Z3 is approximately how much % less than that of Z4?

Options :

1. 11%
2. 22%
3. 43%
4. 38%
5. None of these

Answer : 43%

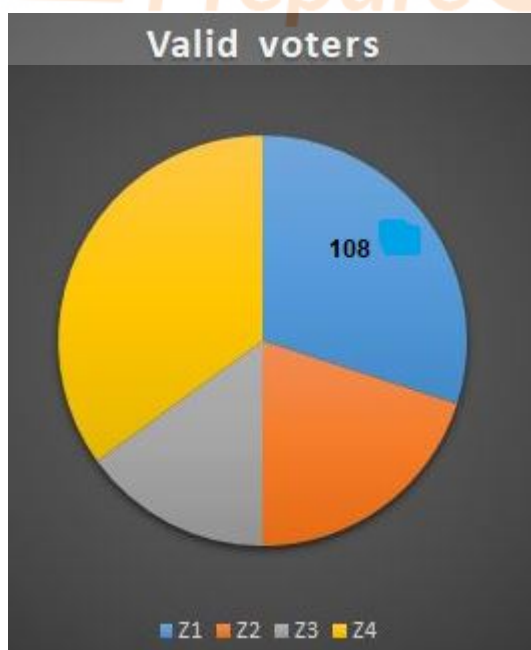
Direction:

Read the information carefully and answer the following questions:

A city divided into 4 zones: Z1, Z2, Z3 & Z4 has certain number of registered (invalid + valid) voters:

The ratio between valid voter's values in degrees of Z2 & Z4 is 3:7. Number of valid voters in Z3 is $\frac{1}{3}^{\text{rd}}$ more the difference between valid voters in Z1 & Z2. Difference between number of valid voters between Z3 & Z4 is 480.

Number of valid voters in Z4 is more than that of Z3. 20% of the total registered voters are invalid. The angle given in pie chart below is in degree.



- Question No. 94

Find the total number of registered voters?

Options :

1. 3200
2. 4000
3. 3500
4. 4200
5. None of these

Answer : 4000

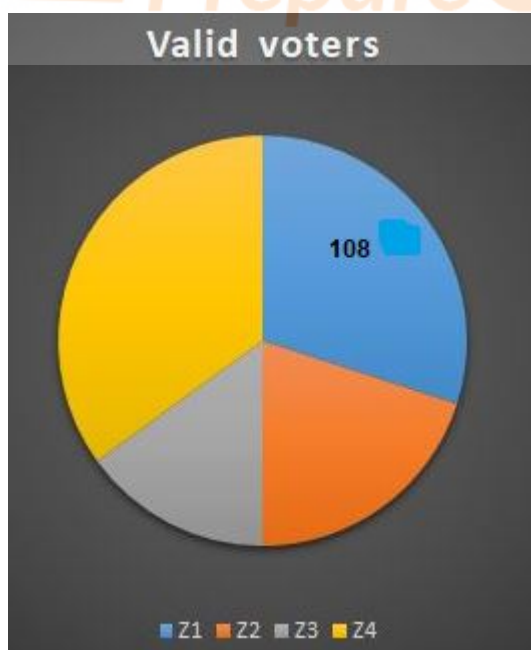
Direction:

Read the information carefully and answer the following questions:

A city divided into 4 zones: Z1, Z2, Z3 & Z4 has certain number of registered (invalid + valid) voters:

The ratio between valid voter's values in degrees of Z2&Z4 is 3:7. Number of valid voters in Z3 is $\frac{1}{3}^{\text{rd}}$ more the difference between valid voters in Z1&Z2. Difference between number of valid voters between Z3&Z4 is 480.

Number of valid voters in Z4 is more than that of Z3. 20% of the total registered voters are invalid. The angle given in pie chart below is in degree.



- Question No. 95

If invalid voters of Z2 is half of total invalid voters. The ratio of invalid voter of Z1, Z3 and Z4 is 1: 5: 10, so what will be total registered voters of Z3?

Options :

1. 780
2. 140
3. 940
4. 640
5. None of these

Answer : None of these

Direction:

Read the information carefully and answer the following questions:

Position	Number of Application received	Number of Duplicate Applicants	Average number of Applications received from duplicate applicants
A	1040	63	5
B	880	-	6
C	600	28	-
D	-	48	-
E	420	-	-

Note:

(i) A duplicate applicant is an applicant who has submitted additional (duplicate) application after submitting their original application. All the application forms (original + duplicate) received from duplicate applicants were rejected. Remaining all application were accepted.

(ii) None of the applicants applied for more than one post.

- Question No. 96

For position A, if the respective ratio between number of accepted application from males and that of rejected applications from males is 5:3, and if the respective ratio between number of accepted application from females and that of rejected applications from females is 5:1, then what is the number of rejected applications from males?

Options :

1. 200
2. 210
3. 285
4. 255
5. None of these

Answer : 255

Direction:

Read the information carefully and answer the following questions:

Position	Number of Application received	Number of Duplicate Applicants	Average number of Applications received from duplicate applicants
A	1040	63	5
B	880	-	6
C	600	28	-
D	-	48	-
E	420	-	-

Note:

(i) A duplicate applicant is an applicant who has submitted additional (duplicate) application after submitting their original application. All the application forms (original + duplicate) received from duplicate applicants were rejected. Remaining all application were accepted.

(ii) None of the applicants applied for more than one post.

• Question No. 97

For position E, the number of accepted applications from males, number of accepted applications from females and the number of rejected applications (males + females) are X , $X+Y$ and $X+2Y$ respectively. Which of the following statement is true? (Consider the average number of duplicate applications received from duplicate applicant is a non-zero integer)

(i) Number of Accepted applications from males can be 139.

(ii) Number of Accepted applications from males can be 131.

(iii) Number of Accepted applications from males can be 141.

Options :

1. Only (i)
2. Only (ii)
3. Only (iii)
4. Both (i) and (ii)
5. Both (ii) and (iii)

Answer : Both (i) and (ii)

Direction:

Read the information carefully and answer the following questions:

Position	Number of Application received	Number of Duplicate Applicants	Average number of Applications received from duplicate applicants
A	1040	63	5
B	880	-	6
C	600	28	-
D	-	48	-
E	420	-	-

Note:

(i) A duplicate applicant is an applicant who has submitted additional (duplicate) application after submitting their original application. All the application forms (original + duplicate) received from duplicate applicants were rejected. Remaining all application were accepted.

(ii) None of the applicants applied for more than one post.

• Question No. 98

If the average number of accepted applications for position A & B is 659, then what is the value of duplicate applications for position B?

Options :

1. 41
2. 39
3. 45
4. 43
5. None of these

Answer : 41

Direction:

Read the information carefully and answer the following questions:

Position	Number of Application received	Number of Duplicate Applicants	Average number of Applications received from duplicate applicants
A	1040	63	5
B	880	-	6
C	600	28	-
D	-	48	-
E	420	-	-

Note:

(i) A duplicate applicant is an applicant who has submitted additional (duplicate) application after submitting their original application. All the application forms (original + duplicate) received from duplicate applicants were rejected. Remaining all application were accepted.

(ii) None of the applicants applied for more than one post.

• Question No. 99

For position D, if the respective ratio of accepted and rejected applications is 4:1, then which of the following can be true?

(i) Number of applications received (all original + all duplicate) can be 240.

(ii) Number of applications accepted (all original + all duplicate) can be 768.

(iii) that the least number of applications were received for position D is a possibility.

Options :

1. Only (i)

2. Only (ii)

3. Only (iii)

4. Both (i) and (ii)

5. Both (ii) and (iii)

Answer : Both (i) and (ii)

Direction:

Read the information carefully and answer the following questions:

Position	Number of Application received	Number of Duplicate Applicants	Average number of Applications received from duplicate applicants
A	1040	63	5
B	880	-	6
C	600	28	-
D	-	48	-
E	420	-	-

Note:

(i) A duplicate applicant is an applicant who has submitted additional (duplicate) application after submitting their original application. All the application forms (original + duplicate) received from duplicate applicants were rejected. Remaining all application were accepted.

(ii) None of the applicants applied for more than one post.

• Question No. 100

For position C, then number of accepted applications from males is between 150 & 200 and the number of accepted applications from females is between 130 & 180. Which of the following can be a possible value(s) of the average number of duplicate applications submitted by duplicate applicants?

Options :

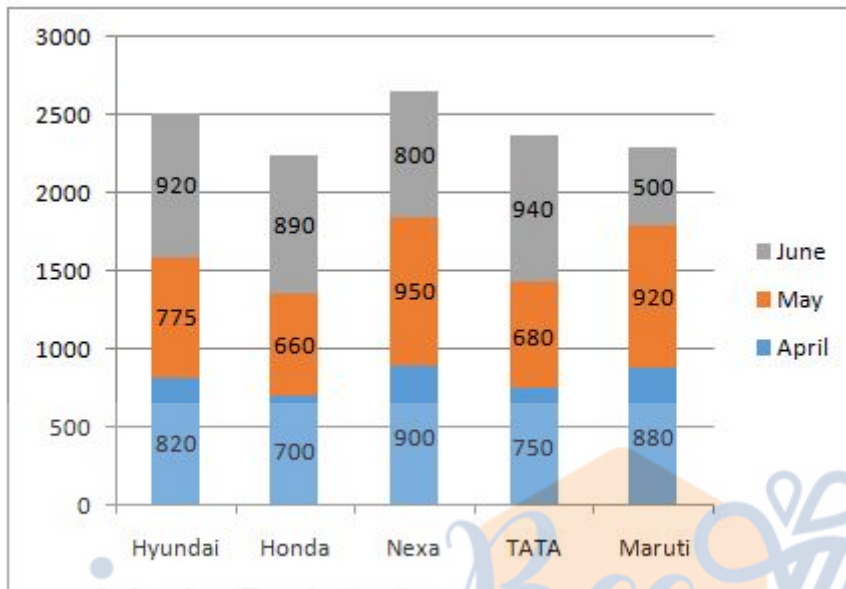
1. 11
2. 15
3. 9
4. 13
5. None of these

Answer : 9

Direction:

Study the following information carefully and answer the given questions:

The Stacked bar graph shows the total number of production of cars by five different companies in three different months.



• Question No. 101

Number of cars produced by Nexa, TATA and Honda in April is approximately what percentage of the number of cars produced by Maruti, TATA and Hyundai together in May?

Options :

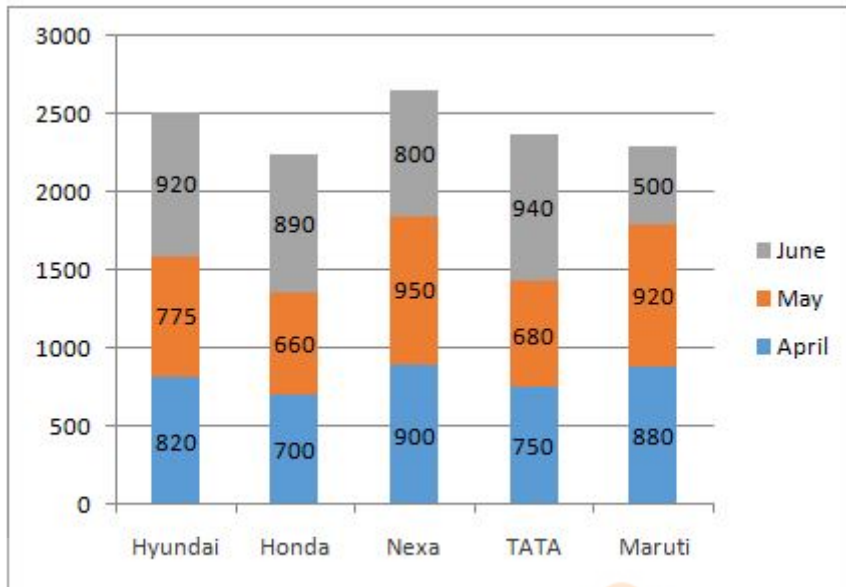
- 1. 99%
- 2. 107%
- 3. 57%
- 4. 87%
- 5. 121%

Answer : 99%

Direction:

Study the following information carefully and answer the given questions:

The Stacked bar graph shows the total number of production of cars by five different companies in three different months.



- Question No. 102

Find the average number of cars produced by Nexa and Maruti together in all the given months?

Options :

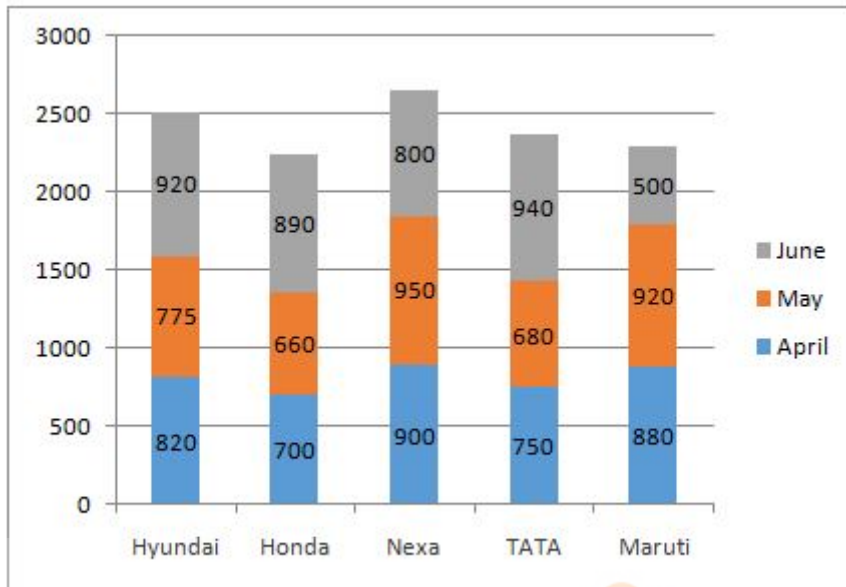
1. 4600
2. 5425
3. 3250
4. 2475
5. None of these

Answer : 2475

Direction:

Study the following information carefully and answer the given questions:

The Stacked bar graph shows the total number of production of cars by five different companies in three different months.



• Question No. 103

Total number of cars produced by all the given companies in April is approximately what percentage more than the total number of cars produced by TATA in all the months together?

Options :

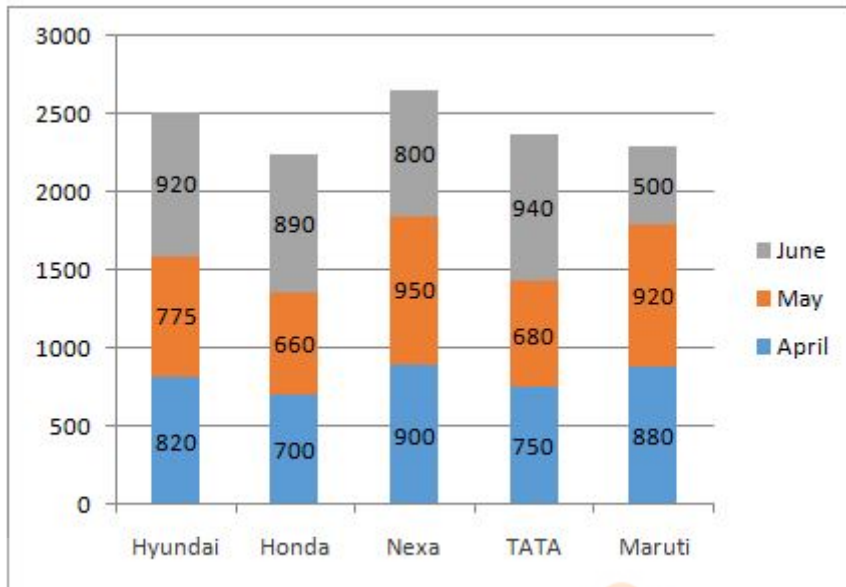
- 1. 45%
- 2. 83%
- 3. 71%
- 4. 57%
- 5. 62%

Answer : 71%

Direction:

Study the following information carefully and answer the given questions:

The Stacked bar graph shows the total number of production of cars by five different companies in three different months.



- Question No. 104

Find the difference between the total number of cars produced by all the companies together in June and that in May?

Options :

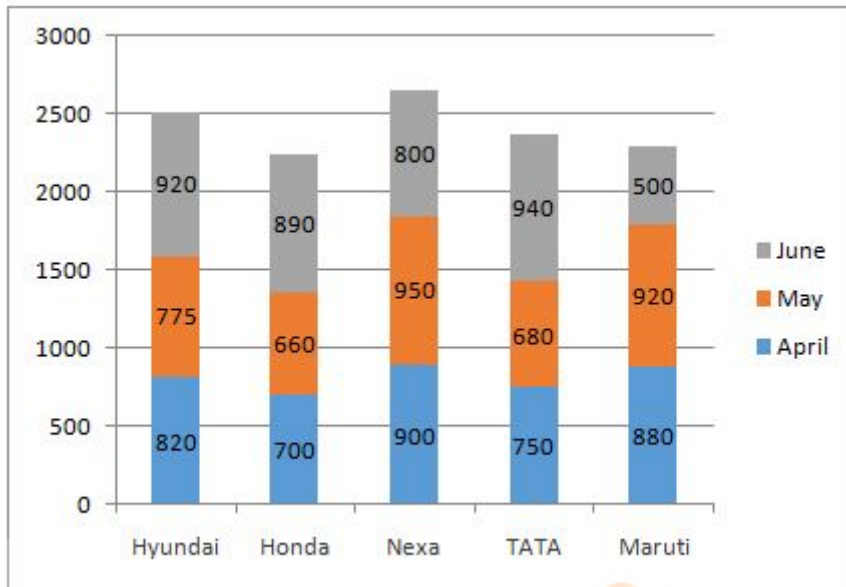
1. 50
2. 65
3. 38
4. 41
5. None of these

Answer : 65

Direction:

Study the following information carefully and answer the given questions:

The Stacked bar graph shows the total number of production of cars by five different companies in three different months.



- Question No. 105

Find the respective ratio between the total number of cars produced by Maruti and Honda together in April to that of the total number of cars produced by Nexa and Hyundai together in June?

Options :

1. 62 : 89

2. 53 : 81

3. 29 : 53

4. 79 : 86

5. None of these

Answer : 79 : 86

Direction:

Study the given information carefully to answer the questions.

In a park, different types of lights signals are used for the movement of a toy car.

Red Light (R) = Stop

Yellow light (Y) = Wait

Red and Yellow lights (RY) = Turn left

Red and Green lights (RG) = Turn right

Yellow and Green lights (YG) = Go at 25 km/hour

Red, Yellow, and Green lights (RYG) = Go at 15 km/hour

Green light (G) = Go at 10 km/hour

Rahul who is facing north, drive the car at the speed of 35 km/hour inside the park and encounters the signals in the following manners. (He cannot go outside the park to drive a car and he can go to the next signal only after passing the previous signal).

Starting Point = S

After half an hour, 1st signal – RY and YG

After 15 minutes, 2nd signal – RYG

After 30 minutes, 3rd signal – RG and RYG

After 15 minutes, 4th signal – RG and YG

After an hour, 5th signal – RY and G

After 2 hours, 6th signal – R

- Question No. 106

What is the total distance that Rahul travelled from the starting point till the 6th signal?

Options :

1. 55 km
2. 52.5 km
3. 80 km
4. 62.5 km
5. None of these

Answer : 80 km

Direction:

Study the given information carefully to answer the questions.

In a park, different types of lights signals are used for the movement of a toy car.

Red Light (R) = Stop

Yellow light (Y) = Wait

Red and Yellow lights (RY) = Turn left

Red and Green lights (RG) = Turn right

Yellow and Green lights (YG) = Go at 25 km/hour

Red, Yellow, and Green lights (RYG) = Go at 15 km/hour

Green light (G) = Go at 10 km/hour

Rahul who is facing north, drive the car at the speed of 35 km/hour inside the park and encounters the signals in the following manners. (He cannot go outside the park to drive a car and he can go to the next signal only after passing the previous signal).

Starting Point = S

After half an hour, 1st signal – RY and YG

After 15 minutes, 2nd signal – RYG

After 30 minutes, 3rd signal – RG and RYG

After 15 minutes, 4th signal – RG and YG

After an hour, 5th signal – RY and G

After 2 hours, 6th signal – R

- Question No. 107

What is the average speed at which Rahul travelled from the starting point till the 6th signal?

Options :

1. $17 \frac{7}{9}$ km/hr
2. $15 \frac{5}{9}$ km/hr
3. $13 \frac{7}{8}$ km/hr
4. $17 \frac{4}{9}$ km/hr
5. None of these

Answer : $17 \frac{7}{9}$ km/hr

Direction:

Study the given information carefully to answer the questions.

In a park, different types of lights signals are used for the movement of a toy car.

Red Light (R) = Stop

Yellow light (Y) = Wait

Red and Yellow lights (RY) = Turn left

Red and Green lights (RG) = Turn right

Yellow and Green lights (YG) = Go at 25 km/hour

Red, Yellow, and Green lights (RYG) = Go at 15 km/hour

Green light (G) = Go at 10 km/hour

Rahul who is facing north, drive the car at the speed of 35 km/hour inside the park and encounters the signals in the following manners. (He cannot go outside the park to drive a car and he can go to the next signal only after passing the previous signal).

Starting Point = S

After half an hour, 1st signal – RY and YG

After 15 minutes, 2nd signal – RYG

After 30 minutes, 3rd signal – RG and RYG

After 15 minutes, 4th signal – RG and YG

After an hour, 5th signal – RY and G

After 2 hours, 6th signal – R

• Question No. 108

What is the approximate shortest distance between the starting point and the 2nd signal?

Options :

1. 12.8 Km
2. 18.6 Km
3. 15.4 Km
4. 20.5 Km
5. None of these

Answer : 18.6 Km

Direction:

Study the given information carefully to answer the questions.

In a park, different types of lights signals are used for the movement of a toy car.

Red Light (R) = Stop

Yellow light (Y) = Wait

Red and Yellow lights (RY) = Turn left

Red and Green lights (RG) = Turn right

Yellow and Green lights (YG) = Go at 25 km/hour

Red, Yellow, and Green lights (RYG) = Go at 15 km/hour

Green light (G) = Go at 10 km/hour

Rahul who is facing north, drive the car at the speed of 35 km/hour inside the park and encounters the signals in the following manners. (He cannot go outside the park to drive a car and he can go to the next signal only after passing the previous signal).

Starting Point = S

After half an hour, 1st signal – RY and YG

After 15 minutes, 2nd signal – RYG

After 30 minutes, 3rd signal – RG and RYG

After 15 minutes, 4th signal – RG and YG

After an hour, 5th signal – RY and G

After 2 hours, 6th signal – R

- Question No. 109

4th Signal is in which direction with respect to the starting point?

Options :

1. North-West
2. West
3. East
4. South-East
5. None of these

Answer : North-West

Direction:

Study the given information carefully to answer the questions.

In a park, different types of lights signals are used for the movement of a toy car.

Red Light (R) = Stop

Yellow light (Y) = Wait

Red and Yellow lights (RY) = Turn left

Red and Green lights (RG) = Turn right

Yellow and Green lights (YG) = Go at 25 km/hour

Red, Yellow, and Green lights (RYG) = Go at 15 km/hour

Green light (G) = Go at 10 km/hour

Rahul who is facing north, drive the car at the speed of 35 km/hour inside the park and encounters the signals in the following manners. (He cannot go outside the park to drive a car and he can go to the next signal only after passing the previous signal).

Starting Point = S

After half an hour, 1st signal – RY and YG

After 15 minutes, 2nd signal – RYG

After 30 minutes, 3rd signal – RG and RYG

After 15 minutes, 4th signal – RG and YG

After an hour, 5th signal – RY and G

After 2 hours, 6th signal – R

- Question No. 110

Starting point is in which direction from the Stoppage point?

Options :

1. North-West
2. South-West
3. North-East
4. South-East
5. None of these

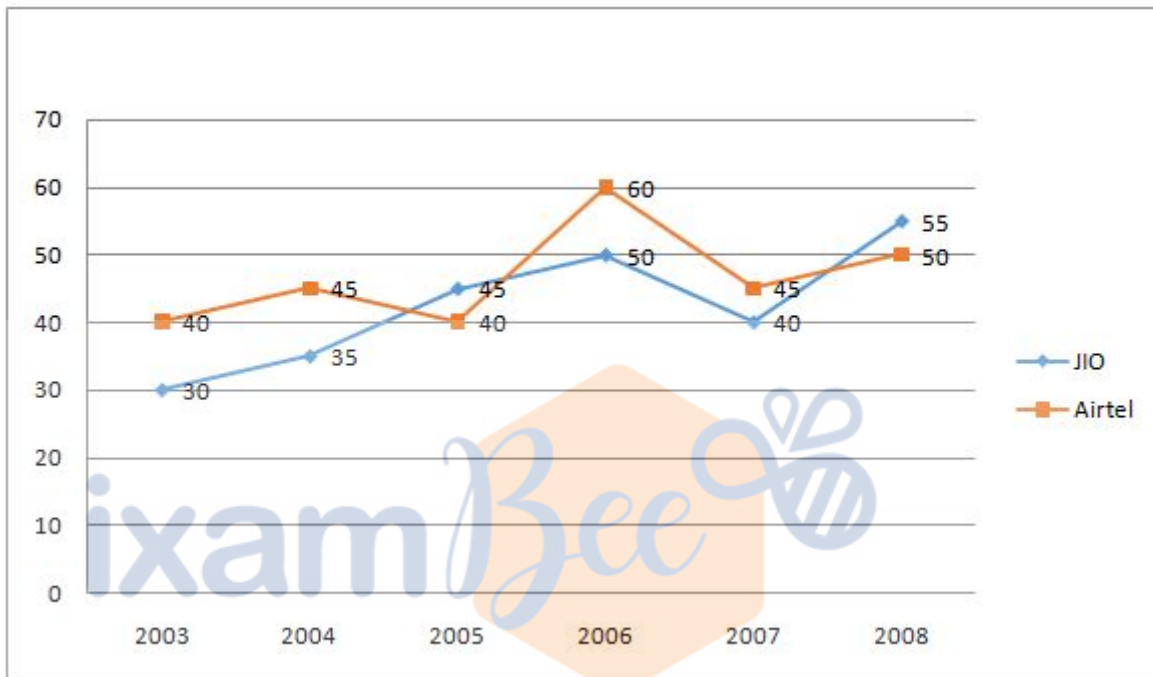
Answer : South-East

Direction:

Study the given information carefully to answer the questions.

The following line graph gives the percent profit earned by two Companies JIO and Airtel during the period 2003 - 2008.

Percentage profit earned by two Companies JIO and Airtel over the given years:



$$\% \text{Profit} = \frac{(\text{Income} - \text{Expenditure})}{\text{Expenditure}} \times 100$$

- Question No. 111

The incomes of two Companies JIO and Airtel in 2007 were in the ratio of 4:5 respectively. What was the respective ratio of their expenditures in 2007?

Options :

1. 19:25
2. 29:35
3. 27:43
4. 39:42
5. None of these

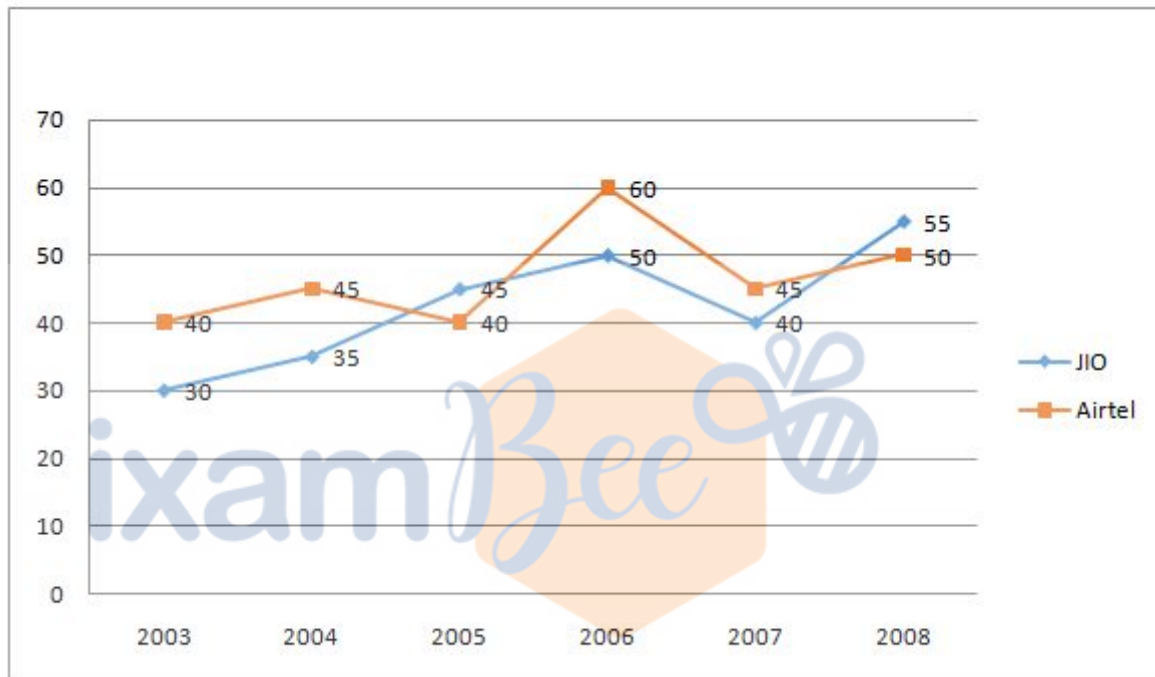
Answer : 29:35

Direction:

Study the given information carefully to answer the questions.

The following line graph gives the percent profit earned by two Companies JIO and Airtel during the period 2003 - 2008.

Percentage profit earned by two Companies JIO and Airtel over the given years:



$$\% \text{Profit} = \left[\frac{\text{Income} - \text{Expenditure}}{\text{Expenditure}} \right] \times 100$$

- Question No. 112

If the expenditure of Company Airtel in 2004 was Rs. 360 crores, what was its income in 2004?

Options :

1. 122 crores
2. 432 crores
3. 522 crores
4. 352 crores
5. None of these

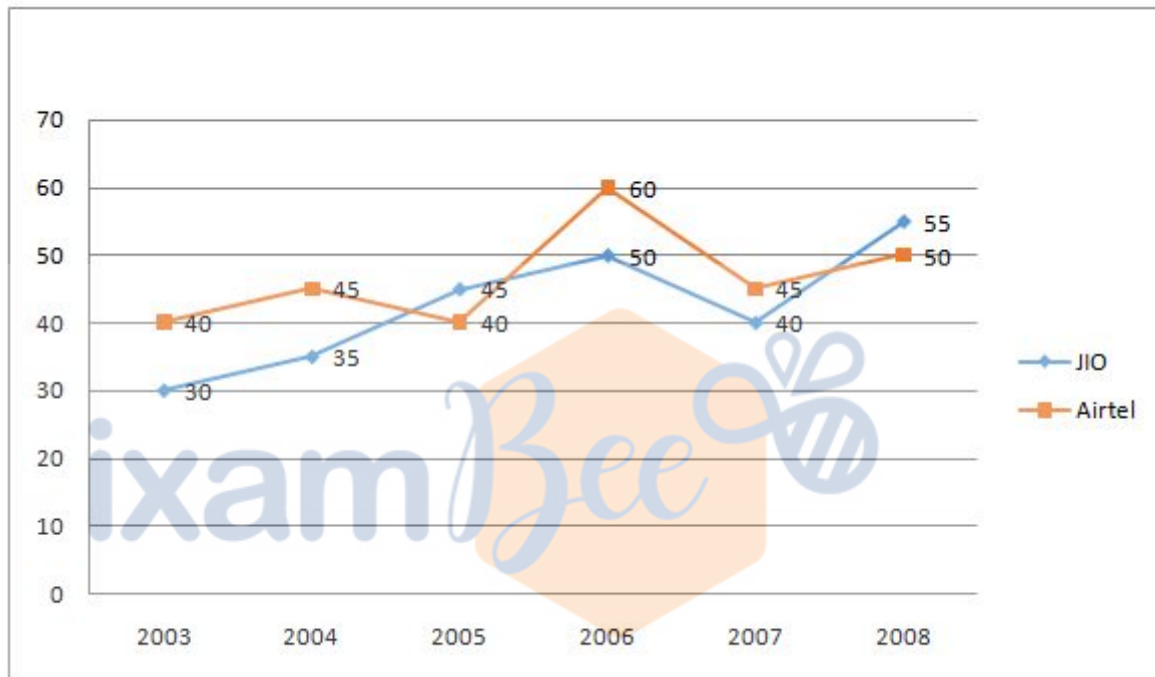
Answer : 522 crores

Direction:

Study the given information carefully to answer the questions.

The following line graph gives the percent profit earned by two Companies JIO and Airtel during the period 2003 - 2008.

Percentage profit earned by two Companies JIO and Airtel over the given years:



$$\% \text{Profit} = \frac{(\text{Income} - \text{Expenditure})}{\text{Expenditure}} \times 100$$

- Question No. 113

If the expenditures of Company JIO and Airtel in 2003 were equal and the total income of the two Companies in 2003 was Rs. 324 crores, what was the total profit of the two Companies together in 2003? (Profit = Income - Expenditure)

Options :

1. 38 crores
2. 41 crores
3. 62 crores
4. 84 crores
5. None of these

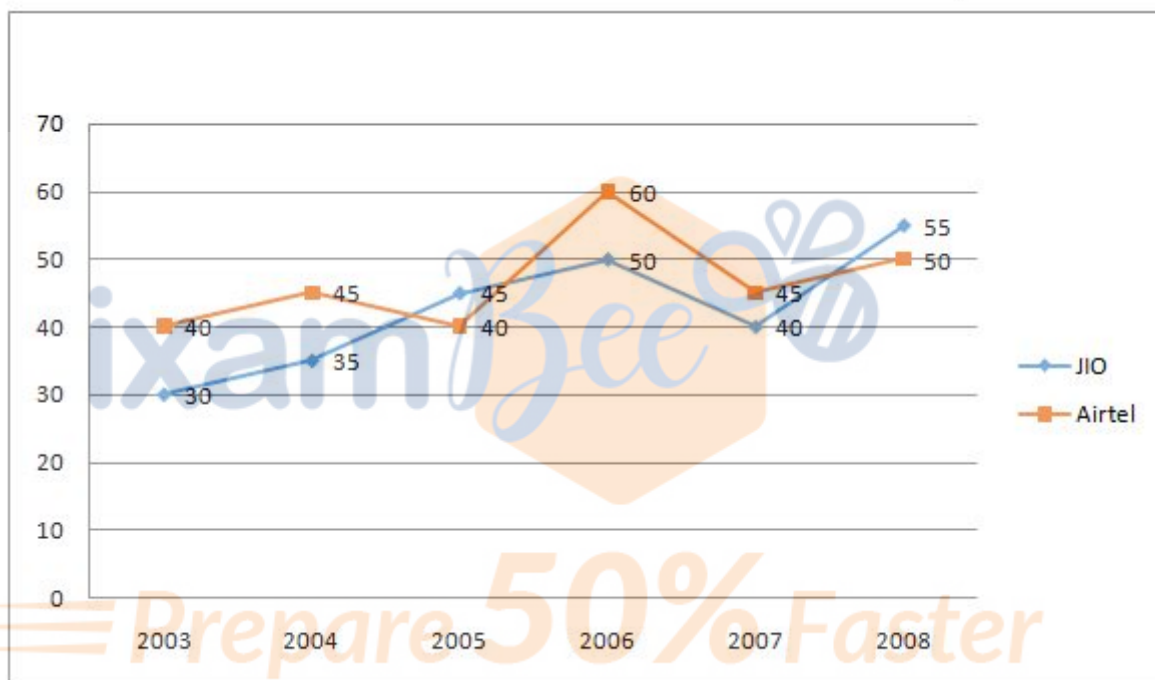
Answer : 84 crores

Direction:

Study the given information carefully to answer the questions.

The following line graph gives the percent profit earned by two Companies JIO and Airtel during the period 2003 - 2008.

Percentage profit earned by two Companies JIO and Airtel over the given years:



$$\% \text{Profit} = \left[\frac{\text{Income} - \text{Expenditure}}{\text{Expenditure}} \right] \times 100$$

- Question No. 114

The expenditure of Company JIO in the year 2005 was Rs. 200 crores and the income of company JIO in 2005 was the same as its expenditure in 2008. The income of Company JIO in 2008 approximately was?

Options :

1. 380 crores
2. 450 crores
3. 220 crores

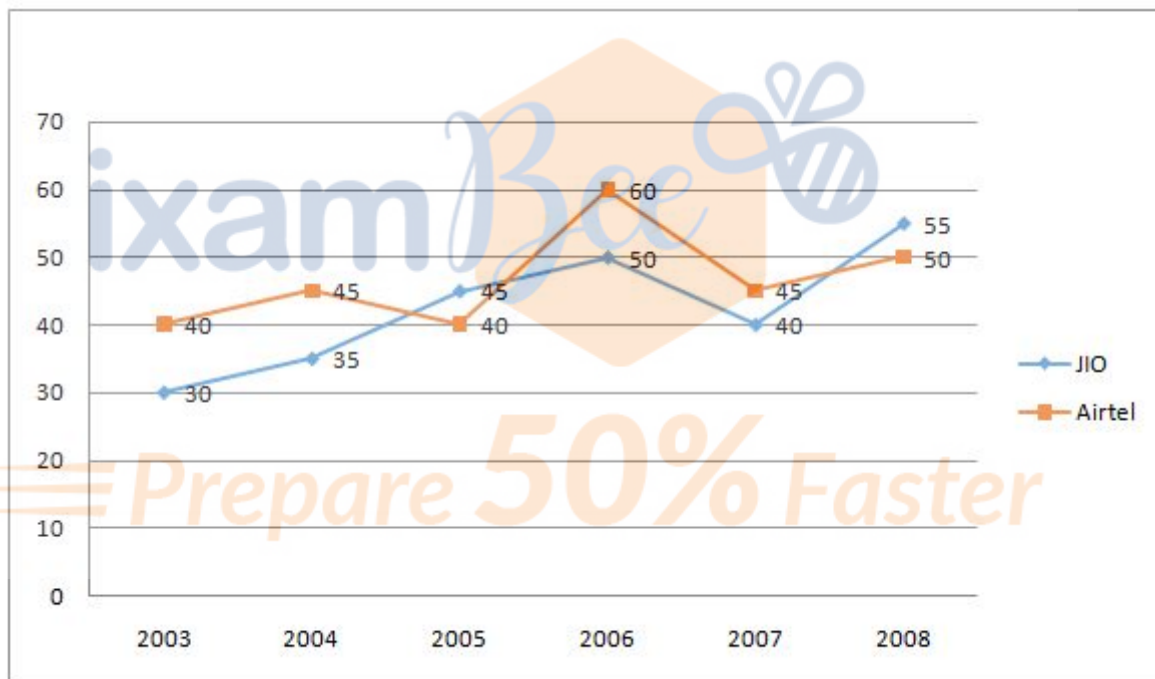
- 4. 240 crores
- 5. None of these

Answer : 450 crores

Direction:
Study the given information carefully to answer the questions.

The following line graph gives the percent profit earned by two Companies JIO and Airtel during the period 2003 - 2008.

Percentage profit earned by two Companies JIO and Airtel over the given years:



$$\% \text{Profit} = \frac{(\text{Income} - \text{Expenditure})}{\text{Expenditure}} \times 100$$

- Question No. 115

If the incomes of two Companies were equal in 2006, then what was the ratio of expenditure of Company JIO to that of Company Airtel in 2006?

Options :

- 1. 13:15

2. 13:11
3. 16:15
4. 16:13
5. None of these

Answer : 16:15

• Question No. 116

CIBIL score is used by banks and NBFCs to ascertain your credit worthiness and the likelihood of you repaying your loan on time. CIBIL Score consists of how many number of digits?

Options :

1. 4 digit number
2. 1 digit number
3. 3 digit number
4. 5 digit number
5. None of these

Answer : 3 digit number

• Question No. 117

How much percentage of total GDP is spent on health by India?

Options :

1. 1.03%
2. 1.01%
3. 1.02%
4. 1.04%
5. None of these

Answer : 1.02%

- Question No. 118

The book "Unquiet River: A Biography of Brahmaputra River" is written by_____.

Options :

1. Arupjyoti Saikia
2. Amitav Ghosh
3. Arundhati Roy
4. Chetan Bhagat
5. None of these

Answer : Arupjyoti Saikia

- Question No. 119

What is the name of the institution which has recently created the first Indian Brain Atlas?

Options :

1. IISC Bangalore
2. IIT Mumbai
3. BITS Pilani
4. IIIT, Hyderabad
5. None of these

Answer : IIIT, Hyderabad

- Question No. 120

Which of the following company has recently tied up with Allahabad Bank for the development of a dedicated eAuction platform?

Options :

1. HDFC Limited
2. MSTC Limited

3. MOIL Limited
4. NMDC Limited
5. IRCTC Limited

Answer : MSTC Limited

- Question No. 121

Headquarter of Ujjivan Small Finance Bank is located at _____

Options :

1. Kolkata
2. Bangalore
3. Chennai
4. Mumbai
5. None of these

Answer : Bangalore

- Question No. 122

Two new countries Eritrea and Saint Kitts and Nevis have signed the International Solar Alliance's Framework Agreement at the second Assembly of ISA held in New Delhi. With this the total number of countries who have so far signed the ISA framework agreement have reached to?

Options :

1. 79
2. 77
3. 81
4. 85
5. 83

Answer : 83

- Question No. 123

Name of the Institute which has formally launched its Global Alumni Endowment Fund with an initial commitment of Rs 250 crore has formally been launched by which of the following institute?

Options :

1. Indian Institute of Technology Delhi
2. Indian Institute of Management Ahmedabad
3. Indian Institute of Technology Mumbai
4. Indian Institute of Technology Goa
5. Indian Institute of Management Calcutta

Answer : Indian Institute of Technology Delhi

- Question No. 124

What is the name of the annual publication of the Central Bureau of Health Intelligence (CBHI)?

Options :

1. World Health Report
2. Universal Health Report
3. National Health Profile
4. Health care in India
5. None of these

Answer : National Health Profile

- Question No. 125

_____ was the chairman of a working group on Social Stock Exchange constituted by SEBI.

Options :

1. Suresh Mathur
2. Bibek Debroy

3. Amitabh Kant
4. Ishaat Hussain
5. Ajay Tyagi

Answer : Ishaat Hussain

• Question No. 126

What was the theme of World Day for Audiovisual Heritage for 2019 which was observed on October 27?

Options :

1. Discover, remember and share
2. It's your story – don't lose it
3. Engage the Past Through Sound and Images
4. Your Story is Moving
5. None of these

Answer : Engage the Past Through Sound and Images

• Question No. 127

Robotic Surgery Facility for public has been started recently by which of the following hospital?

Options :

1. Safdarjung Hospital
2. Kalawati Saran Children's Hospital
3. All India Institute of Medical Sciences, New Delhi
4. Sports Injury Centre
5. Dr. Ram Manohar Lohia Hospital

Answer : Safdarjung Hospital

• Question No. 128

Which of the following has established Mother Teresa Memorial Awards for Social Justice?

Options :

1. Church of North India
2. All India Christian Council
3. Harmony Foundation
4. Bible Society of India
5. Church of South India

Answer : Harmony Foundation

• Question No. 129

Name of the state which has become the first State in country to get law on contract farming?

Options :

1. Uttar Pradesh
2. Tamil Nadu
3. Rajasthan
4. Haryana
5. None of these

Answer : Tamil Nadu

• Question No. 130

Karnam Sekar has been appointed as the new Managing Director and CEO of Indian Overseas Bank. He was the former Managing Director of _____ .

Options :

1. PNB
2. SBI
3. BOB
4. Dena Bank
5. None of these

Answer : Dena Bank

- Question No. 131

"ABADHA" scheme was launched recently by which of the following state?

Options :

1. Punjab
2. Odisha
3. Haryana
4. Karnataka
5. None of these

Answer : Odisha

- Question No. 132

Name of the person who became the first Indian to win prestigious Italian award for Sand Art?

Options :

1. Sudarsan Pattnaik
2. Manisha
3. Rahul Arya
4. Neha Umak
5. None of these

Answer : Sudarsan Pattnaik

- Question No. 133

Who is the present Chief Justice of India (CJI)?

Options :

1. Justice Sharad Arvind Bobde

2. Justice N. V. Ramana
3. Justice Rohinton Fali Nariman
4. Justice Ranjan Gogoi
5. None of these

Answer : Justice Ranjan Gogoi

• Question No. 134

RBI has issued guidelines on _____ authorization for BHARAT Bill Payment Operating Unit (BBPOU), Trade receivables discounting system (TReDS) and White Label ATMs.

Options :

1. Payment
2. On Tap
3. Loan
4. Liquidity
5. None of these

Answer : On Tap

• Question No. 135

_____ unveiled the trophy of Women's T20 World Cup in Melbourne.

Options :

1. Kareena Kapoor Khan
2. Katrina Kaif
3. Deepika Padukone
4. Salman Khan
5. None of these

Answer : Kareena Kapoor Khan

- Question No. 136

Name of the bank which has introduced new Fixed Deposit scheme "FD Health" offering dual-benefit of investment growth via FD (Fixed Deposit) and protection through a critical illness coverage?

Options :

1. ICICI Bank
2. State Bank of India
3. HDFC Bank
4. Punjab National Bank
5. None of these

Answer : ICICI Bank

- Question No. 137

Vikram Solar Company is based in which of the following city?

Options :

1. Kolkata
2. Hyderabad
3. Mumbai
4. New Delhi
5. None of these

Answer : Kolkata

- Question No. 138

Any party that is registered under section _____ (43 of 1951) and has secured at least 1% of the votes polled in the most recent General elections or Assembly elections is eligible to receive Electoral Bonds.

Options :

1. 29A of the Representation of the Peoples Act, 1951

2. 29 of the Representation of the Peoples Act, 1951
3. 29D of the Representation of the Peoples Act, 1951
4. 29B of the Representation of the Peoples Act, 1951
5. None of these

Answer : 29A of the Representation of the Peoples Act, 1951

- Question No. 139

What is the name of the city which has won the UNESCO title of 'Creative City of Gastronomy'?

Options :

1. Mumbai
2. Hyderabad
3. Pune
4. Jaipur
5. None of these

Answer : Hyderabad

- Question No. 140

What is India's GDP growth rate for the financial Year 2017-18 as per economic survey 2018?

Options :

1. 7.2%
2. 7.1%
3. 7.5%
4. 7.3%
5. 7.4%

Answer : 7.2%

- Question No. 141

The government has announced the setting up of Rs 25,000 crore Alternative Investment Fund (AIF) as a relief measure for which sector?

Options :

1. Real Estate Sector
2. Education Sector
3. Women Protection
4. Health Sector
5. None of these

Answer : Real Estate Sector

- Question No. 142

The Reserve Bank of India has enhanced the limit for withdrawal to Rs 50,000, inclusive of Rs 40,000 allowed earlier. What percent of the depositors of the bank will be able to withdraw their entire account balance with the above relaxation?

Options :

1. 68%
2. 78%
3. 75%
4. 65%
5. 56%

Answer : 78%

- Question No. 143

Which of the following company has signed an MoU with NTPC Limited and The Energy and Resources Institute for decarbonisation?

Options :

1. ABB Limited

2. Siemens Limited
3. Robert Bosch Limited
4. Miele Limited
5. None of these

Answer : Siemens Limited

• Question No. 144

India and Asian Development Bank has signed \$200 million loan agreement for the development of the roads of which of the following state?

Options :

1. Maharashtra
2. Kerala
3. Haryana
4. Karnataka
5. Odisha

Answer : Maharashtra

• Question No. 145

Who has been awarded with the 'Vyas Samaan' 2018 for his poetry collection 'Jitne Log Utne Prem'?

Options :

1. Vikram Seth
2. Leeladhar Jagoori
3. Salman Rushdie
4. Mamta Kalia
5. Govind Mishra

Answer : Leeladhar Jagoori

- Question No. 146

Indian Railways recently conducted the 'Operation Dhanush' against ticket touts involved in e-ticketing for which zone?

Options :

1. Eastern Railway Zone
2. Northern Railway Zone
3. Central Railway Zone
4. Western Railway Zone
5. Southern Railway Zone

Answer : Central Railway Zone

- Question No. 147

Asian Development Bank has signed USD 451 million loan agreement with Indian Government to strengthen power connectivity of southern and northern part of which of the following state?

Options :

1. Tamil Nadu
2. Karnataka
3. Maharashtra
4. Andhra Pradesh
5. Madhya Pradesh

Answer : Tamil Nadu

- Question No. 148

COP25 Climate Change Conference is going to be hosted by which of the following country?

Options :

1. Spain

2. Chile
3. France
4. Mexico
5. None of these

Answer : Spain

- Question No. 149

The Non-Bank entities which set up, owned and operate the ATMs are known as_____

Options :

1. Yellow Label ATMs
2. White Label ATMs
3. Onsite ATMs
4. Orange Label ATMs
5. Brown Label ATMs

Answer : White Label ATMs

- Question No. 150

Name of the bank which has launched Bharosa Saving Account?

Options :

1. Aditya Birla Payment Bank
2. Paytm Payment Bank
3. Fino Payments Bank
4. Airtel Payment Bank
5. India Post Payments Bank

Answer : Airtel Payment Bank

- Question No. 151

Which technology is used in the 'SBI Card Pay' recently launched by SBI, a feature which allows contactless payment using mobile phones at point of sale (PoS) terminals?

Options :

1. Tap
2. Switch
3. Swipe
4. NFC
5. None of these

Answer : NFC

- Question No. 152

_____ is the name of the resolution scheme launched to solve the NPA problem through a market-led approach.

Options :

1. Utkarsh
2. Shakti
3. Shaurya
4. Sashakt
5. None of these

Answer : Sashakt

- Question No. 153

Nirmala Sitharaman said public sector banks will provide loans to retail, agriculture, and MSME loans and farmers under _____ category which can also be availed in 400 districts.

Options :

1. MAR
2. RAM

3. ARM
4. RMA
5. None of these

Answer : RAM

• Question No. 154

Name of the bank which has partnered with Srei Equipment Finance Limited to offer loans to MSMEs and retail customers under a co-lending arrangement?

Options :

1. ICICI Bank
2. United Bank of India
3. HDFC Bank
4. SBI
5. Punjab National Bank

Answer : United Bank of India

• Question No. 155

Bank of Baroda has issued FASTag that will act as the composite solution on Electronic Toll Collection. On which of the following technology FASTag works?

Options :

1. NFC
2. RFID
3. GPS
4. WiFi
5. Bluetooth

Answer : RFID

[Attempt Mock Test Now](#)