

Direction:

In each of the following questions find out the alternative which will replace the question mark.

VOHA: WPIB :: CJQX :?

- Question No. 1

Options :

1. YRKD
2. RKDY
3. DKRY
4. YDKR
- 5.

Answer : DKRY

Direction:

In each of the following questions find out the alternative which will replace the question mark.

- Question No. 2

Snow : Glacier :: Water : ?

Options :

1. River
2. Rain
3. Ocean
4. Cloud
- 5.

Answer : Ocean

Direction:

In each of the following questions find out the alternative which will replace the question mark.

- Question No. 3

Shallot : Boat :: Pongee : ?

Options :

1. Fiber
2. Ribbon
3. Silk
4. Cotton
- 5.

Answer : Silk

Direction:

A and B are a married couple. X and Y are brothers. X is the brother of A. C is the only child of B, who is the mother.
How is C related to Y?

- Question No. 4

Options :

1. Nephew
2. Niece
3. Cannot be determined
4. Either nephew or niece
- 5.

Answer : Either nephew or niece

Direction:

In a certain code DRAWING is written as 'BSEVFMH'. How is NATURAL written in that code?

- Question No. 5

Options :

1. UBZOTKQ
2. UBOZQTK
3. UTKZQBO
4. UBOTKZQ
- 5.

Answer : UBOTKZQ

Direction:

Arrange the following as per the dictionary order-

- Question No. 6

1. Remote
2. Repeal
3. Realm
4. Relax

Options :

1. 3, 4, 1, 2
2. 3, 4, 2, 1
3. 4, 1, 2, 3
4. 1, 2, 4, 3
- 5.

Answer : 3, 4, 1, 2

Direction:

In each of the following questions, choose that set numbers from the four alternative sets, that is similar to the given set.

- Question No. 7

Given set: [313, 414, 515]

Options :

1. [121, 144, 169]
2. [125, 343, 729]
3. [305, 405, 605]
4. [613, 714, 815]
- 5.

Answer : [613, 714, 815]

• Question No. 8

In the following question, select the word which can be formed using the letters of the given word.

CAPITULATE

Options :

1. CAPITALS
2. PETITION
3. PILOT
4. PALE
- 5.

Answer : PALE

• Question No. 9

If all the letters of the word "EXPECTANCY" are arranged in alphabetical order then how many letters will retain their original position?

Options :

1. One
2. Two
3. Three
4. Four
- 5.

Answer : Two

- Question No. 10

In the given number '483651383' if '2' is added to each odd number and '1' is subtracted to each even number then how many digits are not repeated in the resultant thus obtained?

Options :

1. None
2. Two
3. Three
4. Four
- 5.

Answer : None

Direction:

In each of the questions below is given a statement followed by two assumptions numbered I and II. An assumption is something supposed or taken for granted. You have to consider the statement and the following assumptions and decide which of the assumptions is implicit in the statement.

Give your answer as

- Question No. 11

Statement :Uber sees grocery delivery sparking its next wave of growth

Assumptions:

- I) Grocery delivery is in demand
- II) There are other competitors too in the line of grocery delivery

Options :

1. if only assumption I is implicit
2. if only assumption II is implicit
3. if either I or II is implicit
4. if neither I nor II is implicit
- 5.

Answer : if only assumption I is implicit

- Question No. 12

Find the out man out.

Options :

1. Red
2. Blue
3. Yellow
4. Orange
- 5.

Answer : Orange

- Question No. 13

Find the out man out.

Options :

1. Victory
2. Conquest
3. Triumph
4. Conquer
- 5.

Answer : Conquer

- Question No. 14

If 'FOUND' is coded as 'ILXKG' then how will 'GAMES' be coded?

Options :

1. JXPBV
2. PBVXJ
3. XPJVB

- 4. XJBPV
- 5. None of these

Answer : JXPBV

Direction:

A bus moves 20km westward, then turns left and moves 10 km. It then again turns left and moves 20km. It takes a 45 degree turn rightwards and moves straight and stops at point Q. In which direction is the bus from starting point?

- Question No. 15

Options :

- 1. Southeast
- 2. Northwest
- 3. East
- 4. North
- 5.

Answer : Southeast

- Question No. 16

The age of Ajay is same as Vijay because they are twins, Sarika is younger than Vijay, Sarika is younger than Jyoti but elder than Devayansh, and Vijay is younger than Jyoti. Who is the eldest among them?

Options :

- 1. Devayansh
- 2. Vijay
- 3. Jyoti
- 4. Sarika
- 5.

Answer : Jyoti

Direction:

In each of the following Questions, arrange the given words in a meaningful sequence and then choose the most appropriate sequence from amongst the alternatives provided below each question.

• Question No. 17

1. Wax
2. Flower
3. Honey
4. Bee

Options :

1. 1, 3, 4, 2
2. 2, 4, 3, 1
3. 2, 3, 4, 1
4. 1, 4, 3, 2
- 5.

Answer : 2, 4, 3, 1

Direction:

Prepare 50% Faster

If P means 'multiplied by', T means 'subtracted from', M means 'added to' and B means 'divided by', then $32 \text{ B } 4 \text{ P } 16$
 $\text{T } 10 \text{ M } 10 = ?$

• Question No. 18

Options :

1. 128
2. 125
3. 121
4. 111
- 5.

Answer : 128

Direction:

If '%' means 'divided by', '\$' means 'multiplied by', '#' means 'added to' and '*' means 'subtracted from', then –

$$37 \# 75 * 18 \$ 216 \% 36$$

- Question No. 19

Options :

1. 5
2. 4
3. 9
4. 6
- 5.

Answer : 4

Direction:

A word is represented by only one set of numbers as given in any one of the alternatives. The sets of numbers given in the alternatives are represented by two classes of alphabets as in two matrices given below. The columns and rows of Matrix I are numbered from 0 to 4 and that of Matrix II are numbered from 5 to 9. A letter from these matrices can be represented first by its row and next by its column, e.g. 'E' can be represented by 01, 14 etc. and 'P' can be represented by 56, 68 etc. Similarly, you have to identify the set for the word **NERD**.

- Question No. 20

MATRIX – I

	0	1	2	3	4
0	N	E	A	U	D
1	A	U	D	N	E
2	D	N	E	A	U
3	E	A	U	D	N
4	U	D	N	E	A

	5
5	G
6	R
7	O
8	S
9	P


Options :

1. 69, 11, 78, 58
2. 40, 69, 88, 65
3. 66, 98, 76, 97
4. 42, 43, 65, 33
- 5.

Answer : 42, 43, 65, 33

Direction:

Group the given figures into three classes using each figure only once.



• Question No. 21

Options :

1. 1,3,9 ; 2,5,6 ; 4,7,8

2. 1,3,9 ; 2,7,8 ; 4,5,6

3. 1,2,4 ; 3,5,7 ; 6,8,9

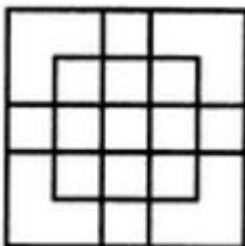
4. 1,3,6 ; 2,4,8 ; 5,7,9

5.

Answer : 1,3,9 ; 2,5,6 ; 4,7,8

Direction:

Count the number of squares in the given figure.



- Question No. 22

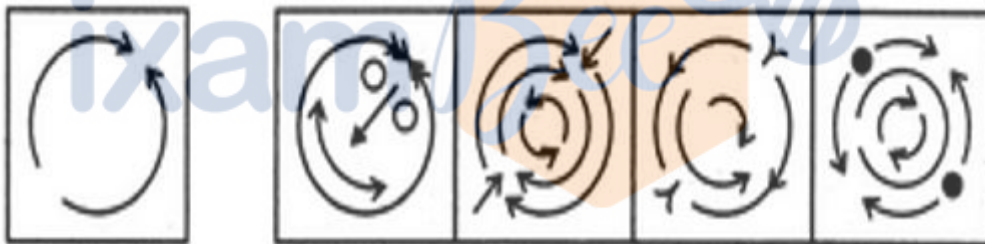
Options :

- 1. 18
- 2. 19
- 3. 25
- 4. 27
- 5.

Answer : 27

Direction:

Find out the alternative figure which contains figure (X) as its part.



(X) (1) (2) (3) (4)

- Question No. 23


Options :

- 1. 1
- 2. 2
- 3. 3
- 4. 4
- 5.

Answer : 1

Direction:

Identify the figure that completes the pattern.



(X)



(1)



(2)



(3)



(4)

• Question No. 24

Options :

- 1. 1
- 2. 2
- 3. 3
- 4. 4
- 5.

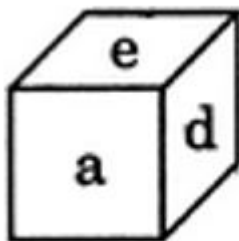
Answer : 2

Direction:

Prepare 50% Faster

In a dice a, b, c and d are written on the adjacent faces, in a clockwise order and e and f at the top and bottom.

When c is at the top, what will be at the bottom?



(i)

• Question No. 25

Options :

1. a
2. b
3. c
4. d
- 5.

Answer : a

- Question No. 26

Saila dance is the traditional dance of which Indian state?

Options :

1. Uttarakhand
2. Madhya Pradesh
3. Chhattisgarh
4. Karnataka
- 5.

Answer : Chhattisgarh

- Question No. 27

What is the pH of the human blood?

Options :

1. 8.1
2. 8.4
3. 7.1
4. 7.4
- 5.

Answer : 7.4

- Question No. 28

Who was the excavator of Mohenjo Daro?

Options :

1. R. D. Banerji
2. Dr. R.S Bisht
3. N Gopal Majumdar
4. Sir Mortimer Wheeler
- 5.

Answer : R. D. Banerji

- Question No. 29

Which of the following states does not come under the 7 sisters?

Options :

1. Chhattisgarh
2. Meghalaya
3. Nagaland
4. Assam
- 5.

Answer : Chhattisgarh

- Question No. 30

What is the capital of Nagaland?

Options :

1. Bengaluru
2. Kohima
3. Gandhinagar

4. Chennai

5.

Answer : Kohima

- Question No. 31

International day for biological diversity is celebrated on which date?

Options :

1. 22nd June

2. 12th March

3. 22nd May

4. 21st August

5.

Answer : 22nd May

- Question No. 32

The short key used in MS word for centre alignment is?

Options :

1. Ctrl + F

2. Ctrl + Shift + A

3. Ctrl + D

4. Ctrl + E

5.

Answer : Ctrl + E

- Question No. 33

For Galvanization of Iron which of the following metal is used?

Options :

1. Lead
2. Zinc
3. Aluminium
4. Copper
- 5.

Answer : Zinc

• Question No. 34

What is the height of statue of unity?

Options :

1. 180m
2. 182m
3. 194m
4. 210m
- 5.

Answer : 182m

• Question No. 35

What is the minimum age to become President of India?

Options :

1. 35 years
2. 32 years
3. 40 years
4. 38 years
- 5.

Answer : 35 years

- Question No. 36

Who has written Malavikagnimitram?

Options :

1. Kalidas
2. Vikramaditya
3. Tulsidas
4. Bhavabhuti
- 5.

Answer : Kalidas

- Question No. 37

Pollination done by birds is also known as?

Options :

1. Anemophily
2. Entomophily
3. Ornithophily
4. Malacophily
- 5.

Answer : Ornithophily

- Question No. 38

Sandy Soil is suitable for which of the following crop?

Options :

1. Onion
2. Ginger
3. Tomato

4. None of these

5.

Answer : Tomato

- Question No. 39

Who is the writer of the Man Booker Prize Winner Book 'Celestial Bodies'?

Options :

1. Bernardine Evaristo

2. Richard powers

3. Daisy Johnson

4. Jokha Alharthi

5.

Answer : Jokha Alharthi

- Question No. 40

Thiamine deficiency causes which of the following disease?

Options :

1. Pellagra

2. Beri Beri

3. Rickets

4. Scurvy

5.

Answer : Beri Beri

- Question No. 41

When was constitution adopted in India?

Options :

1. 17th September
2. 23rd December
3. 26th November
4. 3rd May
- 5.

Answer : 26th November

• Question No. 42

Who is appointed as India's new CIC (Chief Information Commissioner) ?

Options :

1. Dhanendra Kumar
2. Ashok Kumar Gupta
3. Deepak Sandhu
4. Bimal Julka
- 5.

Answer : Bimal Julka

• Question No. 43

What is India's rank as per the World Happiness Report 2020?

Options :

1. 156th
2. 163rd
3. 144th
4. 140th
- 5.

Answer : 144th

- Question No. 44

Which app is launched by Reserve bank of India for visually challenged persons to identify currency note?

Options :

1. MANI
2. DIYA
3. EASE
4. GENIE
- 5.

Answer : MANI

- Question No. 45

In which state of India is Tomb of Shershah situated?

Options :

1. Bihar
2. Madhya Pradesh
3. Kerala
4. Uttar Pradesh
- 5.

Answer : Bihar

- Question No. 46

Where is Hirakud dam built?

Options :

1. Sambalpur
2. Nagpur
3. Tehri

4. Telangana

5.

Answer : Sambalpur

- Question No. 47

Where was the 5th International science festival 2019 was organised?

Options :

1. New Delhi

2. Kolkata

3. Jaipur

4. Mumbai

5.

Answer : Kolkata

- Question No. 48

Who won the world Badminton Championship 2019?

Options :

1. P. V. Sindhu

2. Lin Dan

3. Saina Nehwal

4. Carolina Marin

5.

Answer : P. V. Sindhu

- Question No. 48

On what date and in which month Arun Jaitley died in 2019?

Options :

1. 24th August
2. 25th December
3. 24th July
4. 23rd October
- 5.

Answer : 24th August

- Question No. 50

Who participated with Indian Navy in the Naseem – Al – Bahr exercise?

Options :

1. Bahrain
2. USA
3. Oman
4. Gulf
- 5.

Answer : Oman

- Question No. 51

If $\operatorname{cosec} x + \cot x = 9$ then find $\operatorname{cosec} x$?

Options :

1. 1
2. $41/13$
3. $41/9$
4. 0
5. none of these

Answer : $41/9$

- Question No. 52

In an examination P got 25% marks more than Q, Q got 25% more than R and R got 20% less than S. If S got 360 marks out of 600, what were the marks obtained by Q?

Options :

1. 765
2. 552
3. 413.1
4. 360
- 5.

Answer : 360

- Question No. 53

In what ratio must a person mix three kinds of rice costing him Rs 1.24, Rs 1.42 and Rs 1.70 per Kg so that the mixture may be worth Rs 1.35 per Kg?

Options :

1. 11:35:55
2. 31:155:15
3. 27:35:5
4. 11:45:25
- 5.

Answer : 11:35:55

- Question No. 54

Find the number of prime factors of 400?

Options :

1. 1

2. 7

3. 6

4. 9

5.

Answer : 6

• Question No. 55

A can do a piece of work in 30 days. B is 25% more efficient than A. Then in how many days the work gets completed when both are working simultaneously?

Options :

1. $14\frac{4}{9}$ days

2. $13\frac{1}{3}$ days

3. $9\frac{3}{5}$ days

4. $8\frac{2}{11}$ days

5.

Answer : $13\frac{1}{3}$ days

• Question No. 56

Three numbers A, B and C are in the ratio of 8 : 10 : 15. If sum of these numbers is 462, ratio between the difference of B and A and the difference of C and B is –

Options :

1. 3:10

2. 2:5

3. 4:7

4. 7:9

5.

Answer : 2:5

- Question No. 57

In what time will Rs. 6000 amount to Rs. 6945.75 @ 10% compound interest payable half-yearly?

Options :

1. 2 years
2. 3 years
3. $3/2$ years
4. 4 years
- 5.

Answer : $3/2$ years

- Question No. 58

Maahi bought 30 kg broccoli for Rs 60 per kg, b kg broccoli for Rs 70 per kg and $(b + 8)$ kg broccoli for Rs 50 per kg. She mixed all type of broccolis together and the average cost price of 1 kg broccoli is Rs 59.2. Find the quantity of broccoli that is bought at Rs 50 per kg.

Options :

1. 24
2. 68
3. 39
4. 17
- 5.

Answer : 39

- Question No. 59

A trader sells two beds for Rs. 4700 each, neither losing nor gaining in all. If he sold one of the beds at a gain of 25%, the other was sold at a loss of

Options :

1. 14.28%
2. 16.67%
3. 9.67%
4. 8.33%
- 5.

Answer : 16.67%

• Question No. 60

A polygon has 90 diagonals, the number of sides of the polygon is?

Options :

1. 16
2. 15
3. 18
4. 11
- 5.

Answer : 15

Direction:

Prepare 50% Faster

Two parallel chords of length 6 cm & 8 cm are in same side of centre, If radius is 5 cm then find the distance between these two chords?

• Question No. 61

Options :

1. 7 cm
2. 1 cm
3. 17 cm
4. 28 cm
- 5.

Answer : 1 cm

- Question No. 62

If LCM of two numbers is 400 then which of the following can never be their HCF?

Options :

1. 20
2. 40
3. 80
4. 60
- 5.

Answer : 60

- Question No. 63

24% of monthly salary of R is equal to 16% of monthly salary of S and 15% of monthly salary of S is equal to 20% of monthly salary of T. If T's monthly income is Rs. 27000, then the total income of R, S and T is?

Options :

1. Rs. 75000
2. Rs. 73750
3. Rs. 84000
4. Rs. 87000
- 5.

Answer : Rs. 87000

- Question No. 64

if $8 \sin^2 x + 5 \cos^2 x = 6$ then find $\tan x$

Options :

1. 1
2. $1/2$
3. $1/\sqrt{2}$

4. 0

5.

Answer : $1/\sqrt{2}$

- Question No. 65

The surface area of the three adjacent faces of a cuboid are 6, 8 and 12 sq.cm respectively. Find the volume of the cuboid.

Options :

1. 26 cm^3

2. 24 cm^3

3. 16 cm^3

4. 28 cm^3

5.

Answer : 24 cm^3

- Question No. 66

What is the unit digit of 97^{22} ?

Options :

1. 9

2. 4

3. 7

4. 1

5.

Answer : 9

- Question No. 67

A dishonest dealer professes to sell his goods at cost price, but he uses a weight of 950 gm for the kg weight. Find his approximate gain per cent.

Options :

1. 5.26%
2. 6.67%
3. 5.25 %
4. 3.33 %
- 5.

Answer : 5.26%

- Question No. 68

Deepak covered a distance of 350 km in 7 hours on a bike. How much distance will he cover on a bicycle in 5 hours if he rides the bicycle at $\frac{1}{5}$ the speed of the bike?

Options :

1. 40 km
2. 50 km
3. 45 km
4. 35 km
- 5.

Answer : 50 km

- Question No. 69

A man can row at 21 km/hr in still water. In a stream which is flowing at 9 km/hr, it takes him 7 hrs to a place and back. How far is the place?

Options :

1. 42 km
2. 45 km

3. 60 km

4. 44 km

5.

Answer : 60 km

• Question No. 70

Neeti , Bihu and Gaurav divide an amount of ₹ 9000 amongst themselves in the ratio of 3 : 4 : 8, respectively. If an amount of ₹ 600 is added to each of their shares, what will be the new respective ratio of their shares of amount?

Options :

1. 4 : 3 : 5

2. 7 : 10 : 4

3. 4 : 5 : 9

4. 7 : 10 : 9

5.

Answer : 4 : 5 : 9

Direction:

Study the table and answer the following question.**Percentage of marks obtained by different students in different subject in the exam****Note:** Number written in bracket is the total marks of that subject.

Students	EVS(50)	Maths(100)	Science (75)	English (120)
Himani	62	86	56	80
Neha	86	64	84	60
Shikha	90	75	68	70
Reena	74	65	64	75
Neelam	78	82	76	85

- Question No. 71

What are the total marks obtained by Shikha in all the subjects together?

Options :

1. 245
2. 265
3. 275
4. 255
- 5.

Answer : 255

Direction:

Study the table and answer the following question.

Percentage of marks obtained by different students in different subject in the exam

Note: Number written in bracket is the total marks of that subject.

Students	EVS(50)	Maths(100)	Science (75)	English (120)
Himani	62	86	56	80
Neha	86	64	84	60
Shikha	90	75	68	70
Reena	74	65	64	75
Neelam	78	82	76	85

- Question No. 72

What is overall percentage of Himani in the exam?

Options :

1. 74%

2. 66%
3. 52%
4. 88%
- 5.

Answer : 74%

Direction:

Study the table and answer the following question.

Percentage of marks obtained by different students in different subject in the exam

Note: Number written in bracket is the total marks of that subject.

Students	EVS(50)	Maths(100)	Science (75)	English (120)
Himani	62	86	56	80
Neha	86	64	84	60
Shikha	90	75	68	70
Reena	74	65	64	75
Neelam	78	82	76	85

- Question No. 73

What is the respective ratio of total marks obtained by Neelam in Math and Science together to the total marks obtained by Reena in EVS and English together?

Options :

1. 119:121
2. 129:131
3. 149:151
4. 139:127
- 5.

Answer : 139:127

• Question No. 74

A box contains the coins of 5p, 10p and 25p are in the ratio 4:5:6. If there is Rs. 44 in all, how many 10p coins are there?

Options :

1. 60
2. 120
3. 160
4. 100
- 5.

Answer : 100

• Question No. 75

The area of an equilateral triangle is $81\sqrt{3}$ sq m. Its perimeter is

Options :

1. 54 m
2. 36 m
3. 48 m
4. 96 m
- 5.

Answer : 54 m

Direction:

Select the most appropriate Antonym of the given word.

• Question No. 76

RELISH

Options :

1. Cherish
2. Penetrate
3. Indulge
4. Abhor
- 5.

Answer : Abhor

Direction:

Select the option that is the passive form of the given sentence.

- Question No. 77

They have already completed the task.

Options :

1. The task had been completed by them already.
2. Already, the task has been completed by them.
3. The task has already been completed by them.
4. The task is already completed by them.
- 5.

Answer : The task has already been completed by them.

Direction:

Select the most appropriate option to fill in the blank in the given sentence.

- Question No. 78

_____ coffee, which admittedly had its own adherents, tea delivered us without startling us alarm-clock like, into the morning.

Options :

1. Unless
2. Unlike

- 3. Until
- 4. Likewise
- 5.

Answer : Unlike

Direction:

Select the most appropriate synonym of the given word.

- Question No. 79

INSTIGATION

Options :

- 1. Provocation
- 2. Subduing
- 3. Instinct
- 4. Dissemination
- 5.

Answer : Provocation

Direction:

Comprehension:

The carnage at the US Capitol building has retriggered _____1_____ on the role of social media in providing a platform to disseminate false information that finally _____2_____ in violence. A fallout of the widespread _____3_____ about the event was that President Donald Trump was locked out of his social media _____4_____ for instigation. Twitter and YouTube have served serious warnings about permanent _____5_____ while Facebook and Instagram have frozen his accounts.

- Question No. 80

Select the most appropriate option to fill in blank number 1.

Options :

1. considerable
2. debate
3. collaboration
4. alarm
- 5.

Answer : debate

Direction:

Comprehension :

The carnage at the US Capitol building has retriggered _____1_____ on the role of social media in providing a platform to disseminate false information that finally _____2_____ in violence. A fallout of the widespread _____3_____ about the event was that President Donald Trump was locked out of his social media _____4_____ for instigation. Twitter and YouTube have served serious warnings about permanent _____5_____ while Facebook and Instagram have frozen his accounts.

- Question No. 81

Select the most appropriate option to fill in blank number 2.

Options :

1. culminating
2. culmination
3. culminates
4. culminated
- 5.

Answer : culminates

Direction:

Comprehension:

The carnage at the US Capitol building has retriggered _____1_____ on the role of social media in providing a platform to disseminate false information that finally _____2_____ in violence. A fallout of the widespread _____3_____ about the event was that President Donald Trump was locked out of his social

media_____4_____ for instigation. Twitter and YouTube have served serious warnings about permanent _____5_____ while Facebook and Instagram have frozen his accounts.

• Question No. 82

Select the most appropriate option to fill in blank number 3.

Options :

1. forbearance
2. submission
3. empathy
4. outrage
- 5.

Answer : outrage

Direction:

Comprehension:

The carnage at the US Capitol building has retriggered _____1_____ on the role of social media in providing a platform to disseminate false information that finally _____2_____ in violence. A fallout of the widespread _____3_____ about the event was that President Donald Trump was locked out of his social media_____4_____ for instigation. Twitter and YouTube have served serious warnings about permanent _____5_____ while Facebook and Instagram have frozen his accounts.

• Question No. 83

Select the most appropriate option to fill in blank number 4.

Options :

1. scores
2. accounts
3. budget
4. assets
- 5.

Answer : accounts

Direction:

Comprehension:

The carnage at the US Capitol building has retriggered _____1_____ on the role of social media in providing a platform to disseminate false information that finally _____2_____ in violence. A fallout of the widespread _____3_____ about the event was that President Donald Trump was locked out of his social media _____4_____ for instigation. Twitter and YouTube have served serious warnings about permanent removal while Facebook and Instagram have _____5_____ his accounts.

- Question No. 84

Select the most appropriate option to fill in blank number 5.

Options :

1. froze
2. frozen
3. freezing
4. freeze
- 5.

Answer : frozen

Direction:

Select the most appropriate ANTONYM of the given word.

- Question No. 85

FLUSTER

Options :

1. Inevitable
2. Clarify
3. Distract
4. Confound

5.

Answer : Clarify

Direction:

Select the most appropriate option to substitute the underlined segment in the given sentence. If there is no need to substitute it, select No improvement.

• Question No. 86

There are various export promotion schemes implement on the Government of India.

Options :

1. schemes implement by
2. schemes implemented by
3. No improvement
4. scheme implement by
- 5.

Answer : schemes implemented by

Direction:

Select the most appropriate synonym of the given word.

• Question No. 87

SYNERGETIC

Options :

1. Solitary
2. Autonomous
3. Cooperative
4. Dominant
- 5.

Answer : Cooperative

Direction:

Select the word which means the same as the group of words given.

- Question No. 88

A person who deliberately sets fire to a building

Options :

1. Arsonist
2. Demagogue
3. Cartographer
4. Apostate
- 5.

Answer : Arsonist

Direction:

Identify the segment in the given sentence which contains the grammatical error.

- Question No. 89

The advent of technology has touched every segment so how can this area been ignored

Options :

1. The advent of technology
2. has touched every
3. this area been ignored
4. segment so how can
- 5.

Answer : this area been ignored

- Question No. 90

Select the INCORRECTLY spelt word.

Options :

1. Astonishing
2. Establishments
3. Resuscitate
4. Archaic
- 5.

Answer : Resuscitate

Direction:

Select the most appropriate option to substitute the underlined segment in the given sentence. If there is no need to substitute it, select No improvement.

• Question No. 91

It is an irony that even though all powers in the universe are present right among us , we are not able to access these, and continue to live in a state of misery.

Options :

1. is present right among us
2. are present right within us
3. is present within us
4. No improvement
- 5.

Answer : are present right within us

Direction:

Identify the segment in the given sentence which contains the grammatical error.

• Question No. 92

Social media companies have taken some steps for curb the dissemination of fake news.

Options :

1. have taken some steps
2. Social media companies
3. for curb the dissemination
4. of fake news
- 5.

Answer : for curb the dissemination

Direction:

Select the most appropriate word to fill in the blank in the given sentence.

- Question No. 93

If the radio understood that the morning _____ for quiet saturation, the newspaper put us in direct touch with the very idea of time.

Options :

1. called
2. understands
3. necessitate
4. demand
- 5.

Answer : called

Direction:

Select the most appropriate meaning of the underlined idiom in the given sentence.

- Question No. 94

Remember, charity begins at home , so before donating others help your needy neighbour.

Options :

1. Do someone a favour hoping that a favour will be returned
2. A person's first duty is for the needs of their own family and friends

3. To have sufficient money to prevent starvation or hunger of family members
4. To do charity without family concern
- 5.

Answer : A person's first duty is for the needs of their own family and friends

Direction:

Given below are four jumbled sentences. Select the option that gives their correct order.

• Question No. 95

- A. This is also why sages who had perfected the science of mantra could bless or even curse someone.
- B. Therefore, it makes sense that the world was created from the sound vibration of Sanskrit letters.
- C. Modern science has proven that matter is energy, vibration.
- D. Their words could create the corresponding objects.

Options :

1. ADCB
2. CBAD
3. DABC
4. CABD
- 5.

Answer : CBAD

Direction:

Select the option that is the direct form of the given sentence.

• Question No. 96

The coach told him that he had not played the game well.

Options :

1. The coach said to him, " You have not played the game well."

2. The coach said to him, " You did not play the game well."
3. The coach said, "Why have you not played the game well."
4. The coach said that, " You have not played the game well."
- 5.

Answer : The coach said to him, " You have not played the game well."

Direction:

Select the word which means the same as the group of words given.

- Question No. 97

Someone who leaves one country to settle in another

Options :

1. Emigrate
2. Resident
3. Emigrant
4. Divergent
- 5.

Answer : Emigrant

- Question No. 98

Select the correctly spelt word.

Options :

1. Concioussness
2. Obsesion
3. Convicsion
4. Tranquility
- 5.

Answer : Tranquility

Direction:

Select the most appropriate meaning of the idiom.

- Question No. 99

The smell of an oily rag

Options :

1. Giving a foul smell
2. To run economically
3. To smell like a rag
4. A very pleasant smell
- 5.

Answer : To run economically

Direction:

Given below are four jumbled sentences. Select the option that gives their correct order.

- Question No. 100

A. We love trying new cuisines, new dishes and the newly trendy foods which go viral on social media.

B. Most humans have a great love for food.

C. However, have you ever thought that this love and fetish of humans towards food costs various living species their lives?

D. In order to fulfill the human desire for good food, thousands of animals are killed, cooked and then eaten merely to satisfy the taste buds of humans.

Options :

1. ACBD
2. BACD
3. CDAB
4. DCAB
- 5.

Answer : BACD

[Attempt Mock Test Now](#)

All ixamBee Mock Test are FREE @ www.ixamBee.com



Prepare **50%** Faster